



















Percentage Increase/Decrease (B)

Name: _____

Date: _____

Calculate the percentage increase or decrease.

	Original Amount		New Amount	Increase or Decrease	Percentage Change
1.	\$800	→	\$1000	 	
2.	\$948	→	\$1659	 	
3.	\$978	→	\$489	 	
4.	\$182	→	\$91	 	
5.	\$380	→	\$95	 	
6.	\$184	→	\$230	 	
7.	\$492	→	\$246	 	
8.	\$380	→	\$665	 	
9.	\$816	→	\$612	 	
10.	\$160	→	\$200	