

Number Patterns (A)

Name: _____

Date: _____

Identify, complete and describe each number pattern.

1. ← — — — — 65 — — 63 — — 61 — →

2. ← 52 — — — — — — 28 — 24 — — →

3. ← — 98 — 86 — — 62 — — — — — →

4. ← — 120 — — — 105 — — — — 85 — →

5. ← — 897 — — — — 497 — — 297 — — →

6. ← — — — — 77 — — 59 — 50 — — →

7. ← — — — 69 — — — — 57 — 54 — →

8. ← 201 — — — — 141 — — — 96 — — →

9. ← — — 101 — — — — — — 89 — 87 →

10. ← — — — — — 226 — 176 — — 76 — →

Number Patterns (A) Answers

Name: _____

Date: _____

Identify, complete and describe each number pattern.

1. ← 69 — 68 — 67 — 66 — 65 — 64 — 63 — 62 — 61 — 60 →

Start at 69 and subtract 1 each time.

2. ← 52 — 48 — 44 — 40 — 36 — 32 — 28 — 24 — 20 — 16 →

Start at 52 and subtract 4 each time.

3. ← 110 — 98 — 86 — 74 — 62 — 50 — 38 — 26 — 14 — 2 →

Start at 110 and subtract 12 each time.

4. ← 125 — 120 — 115 — 110 — 105 — 100 — 95 — 90 — 85 — 80 →

Start at 125 and subtract 5 each time.

5. ← 997 — 897 — 797 — 697 — 597 — 497 — 397 — 297 — 197 — 97 →

Start at 997 and subtract 100 each time.

6. ← 113 — 104 — 95 — 86 — 77 — 68 — 59 — 50 — 41 — 32 →

Start at 113 and subtract 9 each time.

7. ← 78 — 75 — 72 — 69 — 66 — 63 — 60 — 57 — 54 — 51 →

Start at 78 and subtract 3 each time.

8. ← 201 — 186 — 171 — 156 — 141 — 126 — 111 — 96 — 81 — 66 →

Start at 201 and subtract 15 each time.

9. ← 105 — 103 — 101 — 99 — 97 — 95 — 93 — 91 — 89 — 87 →

Start at 105 and subtract 2 each time.

10. ← 476 — 426 — 376 — 326 — 276 — 226 — 176 — 126 — 76 — 26 →

Start at 476 and subtract 50 each time.

Number Patterns (B)

Name: _____

Date: _____

Identify, complete and describe each number pattern.

1. \leftarrow — — 733 — — — 433 — 333 — — — \rightarrow

2. \leftarrow — — — 310 — 260 — — — 110 — — \rightarrow

3. \leftarrow — 136 — — — 103 — — 81 — — — \rightarrow

4. \leftarrow — — 98 — — — — — 58 — — 42 \rightarrow

5. \leftarrow — — — — 94 — — — 79 — — 69 \rightarrow

6. \leftarrow 45 — — — — 37 — — — — — 27 \rightarrow

7. \leftarrow 14 — — — — — 9 — 8 — — — \rightarrow

8. \leftarrow — 175 — — 155 — — — — 115 — — \rightarrow

9. \leftarrow — 202 — — 172 — — 142 — — — — \rightarrow

10. \leftarrow 185 — — — 149 — — — — — 89 — \rightarrow

Number Patterns (B) Answers

Name: _____

Date: _____

Identify, complete and describe each number pattern.

1. ←

933	—	833	—	733	—	633	—	533	—	433	—	333	—	233	—	133	—	33
-----	---	-----	---	-----	---	-----	---	-----	---	-----	---	-----	---	-----	---	-----	---	----

 →

Start at 933 and subtract 100 each time.

2. ←

460	—	410	—	360	—	310	—	260	—	210	—	160	—	110	—	60	—	10
-----	---	-----	---	-----	---	-----	---	-----	---	-----	---	-----	---	-----	---	----	---	----

 →

Start at 460 and subtract 50 each time.

3. ←

147	—	136	—	125	—	114	—	103	—	92	—	81	—	70	—	59	—	48
-----	---	-----	---	-----	---	-----	---	-----	---	----	---	----	---	----	---	----	---	----

 →

Start at 147 and subtract 11 each time.

4. ←

114	—	106	—	98	—	90	—	82	—	74	—	66	—	58	—	50	—	42
-----	---	-----	---	----	---	----	---	----	---	----	---	----	---	----	---	----	---	----

 →

Start at 114 and subtract 8 each time.

5. ←

114	—	109	—	104	—	99	—	94	—	89	—	84	—	79	—	74	—	69
-----	---	-----	---	-----	---	----	---	----	---	----	---	----	---	----	---	----	---	----

 →

Start at 114 and subtract 5 each time.

6. ←

45	—	43	—	41	—	39	—	37	—	35	—	33	—	31	—	29	—	27
----	---	----	---	----	---	----	---	----	---	----	---	----	---	----	---	----	---	----

 →

Start at 45 and subtract 2 each time.

7. ←

14	—	13	—	12	—	11	—	10	—	9	—	8	—	7	—	6	—	5
----	---	----	---	----	---	----	---	----	---	---	---	---	---	---	---	---	---	---

 →

Start at 14 and subtract 1 each time.

8. ←

185	—	175	—	165	—	155	—	145	—	135	—	125	—	115	—	105	—	95
-----	---	-----	---	-----	---	-----	---	-----	---	-----	---	-----	---	-----	---	-----	---	----

 →

Start at 185 and subtract 10 each time.

9. ←

217	—	202	—	187	—	172	—	157	—	142	—	127	—	112	—	97	—	82
-----	---	-----	---	-----	---	-----	---	-----	---	-----	---	-----	---	-----	---	----	---	----

 →

Start at 217 and subtract 15 each time.

10. ←

185	—	173	—	161	—	149	—	137	—	125	—	113	—	101	—	89	—	77
-----	---	-----	---	-----	---	-----	---	-----	---	-----	---	-----	---	-----	---	----	---	----

 →

Start at 185 and subtract 12 each time.

Number Patterns (C)

Name: _____

Date: _____

Identify, complete and describe each number pattern.

1. ← 135 — □ — □ — 120 — 115 — □ — □ — □ — □ — □ →

2. ← □ — □ — □ — 57 — □ — □ — □ — 21 — □ — 3 →

3. ← □ — 122 — 112 — □ — 92 — □ — □ — □ — □ — □ →

4. ← □ — □ — 159 — 144 — □ — 114 — □ — □ — □ — □ →

5. ← 979 — □ — □ — 679 — □ — □ — □ — □ — □ — 79 →

6. ← □ — 109 — □ — □ — □ — □ — □ — □ — 67 — 61 →

7. ← □ — 271 — □ — 221 — □ — □ — □ — □ — □ — 71 →

8. ← □ — □ — □ — 116 — □ — □ — □ — 100 — □ — 92 →

9. ← 130 — 118 — 106 — □ — □ — □ — □ — □ — □ — □ →

10. ← □ — □ — □ — □ — 53 — □ — □ — □ — 25 — 18 →

Number Patterns (C) Answers

Name: _____

Date: _____

Identify, complete and describe each number pattern.

1. ← 135 — 130 — 125 — 120 — 115 — 110 — 105 — 100 — 95 — 90 →

Start at 135 and subtract 5 each time.

2. ← 84 — 75 — 66 — 57 — 48 — 39 — 30 — 21 — 12 — 3 →

Start at 84 and subtract 9 each time.

3. ← 132 — 122 — 112 — 102 — 92 — 82 — 72 — 62 — 52 — 42 →

Start at 132 and subtract 10 each time.

4. ← 189 — 174 — 159 — 144 — 129 — 114 — 99 — 84 — 69 — 54 →

Start at 189 and subtract 15 each time.

5. ← 979 — 879 — 779 — 679 — 579 — 479 — 379 — 279 — 179 — 79 →

Start at 979 and subtract 100 each time.

6. ← 115 — 109 — 103 — 97 — 91 — 85 — 79 — 73 — 67 — 61 →

Start at 115 and subtract 6 each time.

7. ← 296 — 271 — 246 — 221 — 196 — 171 — 146 — 121 — 96 — 71 →

Start at 296 and subtract 25 each time.

8. ← 128 — 124 — 120 — 116 — 112 — 108 — 104 — 100 — 96 — 92 →

Start at 128 and subtract 4 each time.

9. ← 130 — 118 — 106 — 94 — 82 — 70 — 58 — 46 — 34 — 22 →

Start at 130 and subtract 12 each time.

10. ← 81 — 74 — 67 — 60 — 53 — 46 — 39 — 32 — 25 — 18 →

Start at 81 and subtract 7 each time.

Number Patterns (D)

Name: _____

Date: _____

Identify, complete and describe each number pattern.

1. \leftarrow — 82 — — 76 — — — — — 61 — \rightarrow

2. \leftarrow — 168 — — — — 124 — — — 91 — \rightarrow

3. \leftarrow — — 110 — 104 — — — 86 — — — \rightarrow

4. \leftarrow — — — — 108 — — — — 60 — 48 \rightarrow

5. \leftarrow — 75 — — — — — — 27 — — 11 \rightarrow

6. \leftarrow — — 51 — — — — — 31 — 27 — \rightarrow

7. \leftarrow — 482 — — — 332 — — — — 132 — \rightarrow

8. \leftarrow — — — 56 — — — — — 46 — 44 \rightarrow

9. \leftarrow — — — 249 — — 199 — — 149 — — \rightarrow

10. \leftarrow — — — 67 — — 47 — — — — 7 \rightarrow

Number Patterns (D) Answers

Name: _____

Date: _____

Identify, complete and describe each number pattern.

1. ← 85 — 82 — 79 — 76 — 73 — 70 — 67 — 64 — 61 — 58 →

Start at 85 and subtract 3 each time.

2. ← 179 — 168 — 157 — 146 — 135 — 124 — 113 — 102 — 91 — 80 →

Start at 179 and subtract 11 each time.

3. ← 122 — 116 — 110 — 104 — 98 — 92 — 86 — 80 — 74 — 68 →

Start at 122 and subtract 6 each time.

4. ← 156 — 144 — 132 — 120 — 108 — 96 — 84 — 72 — 60 — 48 →

Start at 156 and subtract 12 each time.

5. ← 83 — 75 — 67 — 59 — 51 — 43 — 35 — 27 — 19 — 11 →

Start at 83 and subtract 8 each time.

6. ← 59 — 55 — 51 — 47 — 43 — 39 — 35 — 31 — 27 — 23 →

Start at 59 and subtract 4 each time.

7. ← 532 — 482 — 432 — 382 — 332 — 282 — 232 — 182 — 132 — 82 →

Start at 532 and subtract 50 each time.

8. ← 62 — 60 — 58 — 56 — 54 — 52 — 50 — 48 — 46 — 44 →

Start at 62 and subtract 2 each time.

9. ← 324 — 299 — 274 — 249 — 224 — 199 — 174 — 149 — 124 — 99 →

Start at 324 and subtract 25 each time.

10. ← 97 — 87 — 77 — 67 — 57 — 47 — 37 — 27 — 17 — 7 →

Start at 97 and subtract 10 each time.

Number Patterns (E)

Name: _____

Date: _____

Identify, complete and describe each number pattern.

1. \leftarrow — — — — 56 — — — 50 — — 46 \rightarrow

2. \leftarrow — — — 143 — 133 — 123 — — — — \rightarrow

3. \leftarrow — — 180 — 168 — 156 — — — — — \rightarrow

4. \leftarrow 91 — — 85 — — 79 — — — — — \rightarrow

5. \leftarrow 904 — — — — 504 — — 304 — — — \rightarrow

6. \leftarrow — — — 83 — — — — — 78 — 77 \rightarrow

7. \leftarrow — 65 — — 55 — 50 — — — — — \rightarrow

8. \leftarrow 91 — — 79 — — — — 55 — — — \rightarrow

9. \leftarrow — — 107 — 100 — — — 79 — — — \rightarrow

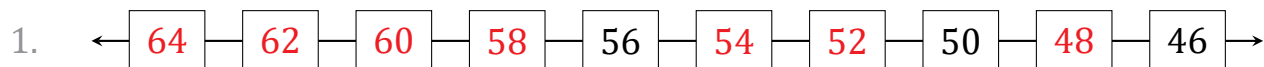
10. \leftarrow 253 — — 203 — — — 128 — — — — \rightarrow

Number Patterns (E) Answers

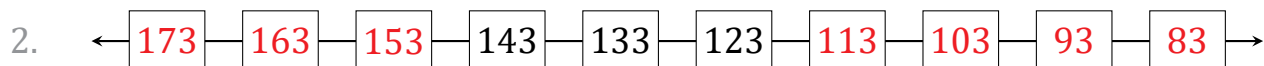
Name: _____

Date: _____

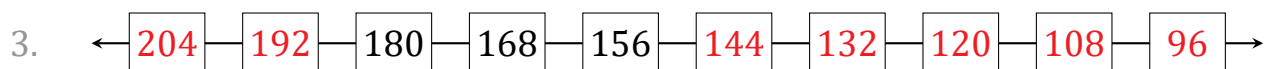
Identify, complete and describe each number pattern.



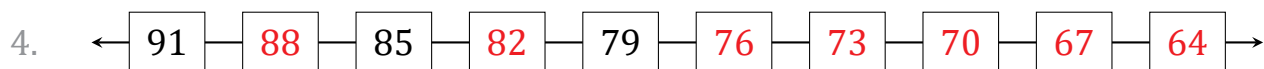
Start at 64 and subtract 2 each time.



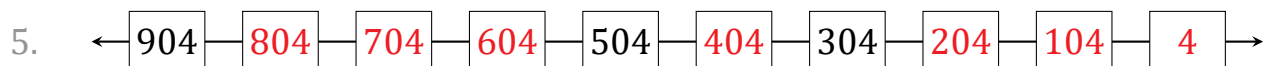
Start at 173 and subtract 10 each time.



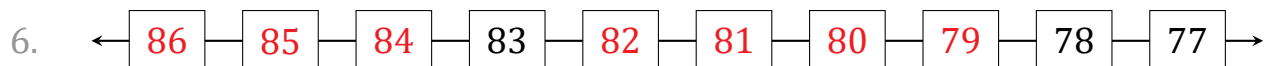
Start at 204 and subtract 12 each time.



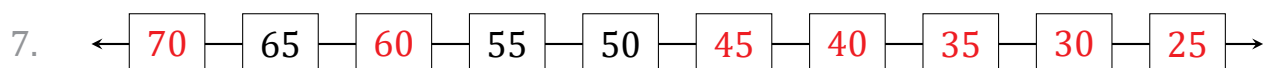
Start at 91 and subtract 3 each time.



Start at 904 and subtract 100 each time.



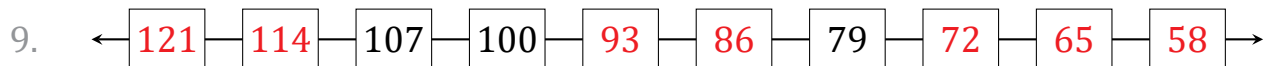
Start at 86 and subtract 1 each time.



Start at 70 and subtract 5 each time.



Start at 91 and subtract 6 each time.



Start at 121 and subtract 7 each time.



Start at 253 and subtract 25 each time.

Number Patterns (F)

Name: _____

Date: _____

Identify, complete and describe each number pattern.

1. \leftarrow — 38 — — — — — 33 — 32 — — \rightarrow

2. \leftarrow — — — 123 — 115 — — — — — 75 \rightarrow

3. \leftarrow — — 745 — — — — 345 — — 145 — \rightarrow

4. \leftarrow — 179 — — 149 — — — — — 74 — \rightarrow

5. \leftarrow — — 131 — 126 — 121 — — — — — \rightarrow

6. \leftarrow — 141 — 130 — — — — — 75 — — \rightarrow

7. \leftarrow — — — 219 — — 169 — — — 94 — \rightarrow

8. \leftarrow — 99 — — — 63 — — — — 15 — \rightarrow

9. \leftarrow — — 67 — — — 46 — — 32 — — \rightarrow

10. \leftarrow 102 — — — — — — 48 — 39 — — \rightarrow

Number Patterns (F) Answers

Name: _____

Date: _____

Identify, complete and describe each number pattern.

1. ← 39 — 38 — 37 — 36 — 35 — 34 — 33 — 32 — 31 — 30 →

Start at 39 and subtract 1 each time.

2. ← 147 — 139 — 131 — 123 — 115 — 107 — 99 — 91 — 83 — 75 →

Start at 147 and subtract 8 each time.

3. ← 945 — 845 — 745 — 645 — 545 — 445 — 345 — 245 — 145 — 45 →

Start at 945 and subtract 100 each time.

4. ← 194 — 179 — 164 — 149 — 134 — 119 — 104 — 89 — 74 — 59 →

Start at 194 and subtract 15 each time.

5. ← 141 — 136 — 131 — 126 — 121 — 116 — 111 — 106 — 101 — 96 →

Start at 141 and subtract 5 each time.

6. ← 152 — 141 — 130 — 119 — 108 — 97 — 86 — 75 — 64 — 53 →

Start at 152 and subtract 11 each time.

7. ← 294 — 269 — 244 — 219 — 194 — 169 — 144 — 119 — 94 — 69 →

Start at 294 and subtract 25 each time.

8. ← 111 — 99 — 87 — 75 — 63 — 51 — 39 — 27 — 15 — 3 →

Start at 111 and subtract 12 each time.

9. ← 81 — 74 — 67 — 60 — 53 — 46 — 39 — 32 — 25 — 18 →

Start at 81 and subtract 7 each time.

10. ← 102 — 93 — 84 — 75 — 66 — 57 — 48 — 39 — 30 — 21 →

Start at 102 and subtract 9 each time.

Number Patterns (G)

Name: _____

Date: _____

Identify, complete and describe each number pattern.

1. \leftarrow 111 66 51 \rightarrow

2. \leftarrow 406 306 206 \rightarrow

3. \leftarrow 116 113 98 \rightarrow

4. \leftarrow 129 105 45 \rightarrow

5. \leftarrow 75 51 19 \rightarrow

6. \leftarrow 532 482 332 \rightarrow

7. \leftarrow 63 54 45 \rightarrow

8. \leftarrow 63 62 58 \rightarrow

9. \leftarrow 124 117 110 \rightarrow

10. \leftarrow 46 42 40 \rightarrow

Number Patterns (G) Answers

Name: _____

Date: _____

Identify, complete and describe each number pattern.

1. ← 186 — 171 — 156 — 141 — 126 — 111 — 96 — 81 — 66 — 51 →

Start at 186 and subtract 15 each time.

2. ← 906 — 806 — 706 — 606 — 506 — 406 — 306 — 206 — 106 — 6 →

Start at 906 and subtract 100 each time.

3. ← 122 — 119 — 116 — 113 — 110 — 107 — 104 — 101 — 98 — 95 →

Start at 122 and subtract 3 each time.

4. ← 129 — 117 — 105 — 93 — 81 — 69 — 57 — 45 — 33 — 21 →

Start at 129 and subtract 12 each time.

5. ← 83 — 75 — 67 — 59 — 51 — 43 — 35 — 27 — 19 — 11 →

Start at 83 and subtract 8 each time.

6. ← 532 — 482 — 432 — 382 — 332 — 282 — 232 — 182 — 132 — 82 →

Start at 532 and subtract 50 each time.

7. ← 126 — 117 — 108 — 99 — 90 — 81 — 72 — 63 — 54 — 45 →

Start at 126 and subtract 9 each time.

8. ← 66 — 65 — 64 — 63 — 62 — 61 — 60 — 59 — 58 — 57 →

Start at 66 and subtract 1 each time.

9. ← 138 — 131 — 124 — 117 — 110 — 103 — 96 — 89 — 82 — 75 →

Start at 138 and subtract 7 each time.

10. ← 50 — 48 — 46 — 44 — 42 — 40 — 38 — 36 — 34 — 32 →

Start at 50 and subtract 2 each time.

Number Patterns (H)

Name: _____

Date: _____

Identify, complete and describe each number pattern.

1. \leftarrow — — — 54 — 51 — — — — — 36 \rightarrow

2. \leftarrow — — 756 — 656 — — 456 — — — — \rightarrow

3. \leftarrow 77 — 69 — — — — — — — 13 — \rightarrow

4. \leftarrow — — — — — 106 — — — 85 — 78 \rightarrow

5. \leftarrow 133 — — — — — — 61 — 49 — — \rightarrow

6. \leftarrow — — — — — 53 — 44 — — 26 — \rightarrow

7. \leftarrow — — 163 — 153 — — — — — 103 — \rightarrow

8. \leftarrow — 108 — — — 93 — 88 — — — — \rightarrow

9. \leftarrow — — 224 — — — 149 — 124 — — — \rightarrow

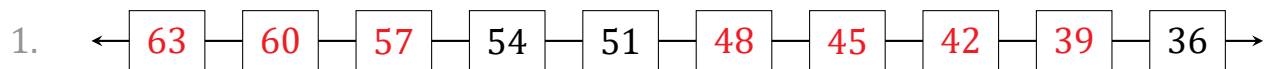
10. \leftarrow — — 122 — — — — — 67 — 56 — \rightarrow

Number Patterns (H) Answers

Name: _____

Date: _____

Identify, complete and describe each number pattern.



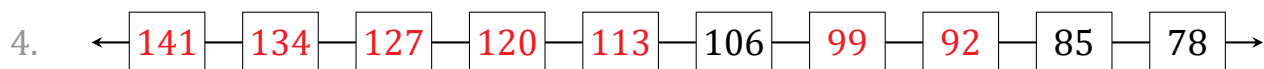
Start at 63 and subtract 3 each time.



Start at 956 and subtract 100 each time.



Start at 77 and subtract 8 each time.



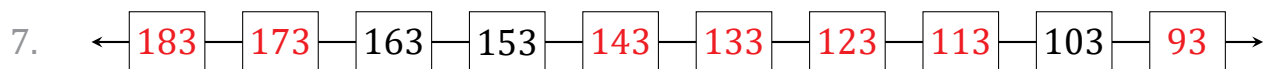
Start at 141 and subtract 7 each time.



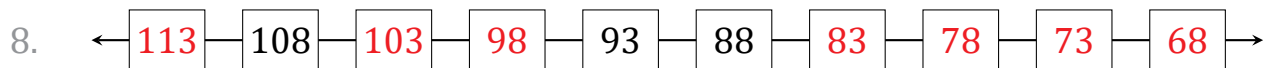
Start at 133 and subtract 12 each time.



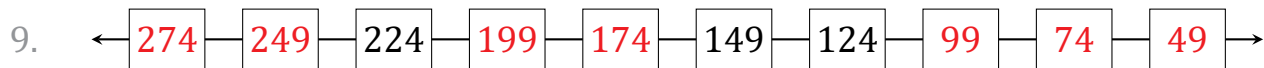
Start at 98 and subtract 9 each time.



Start at 183 and subtract 10 each time.



Start at 113 and subtract 5 each time.



Start at 274 and subtract 25 each time.



Start at 144 and subtract 11 each time.

Number Patterns (I)

Name: _____

Date: _____

Identify, complete and describe each number pattern.

1. ← — — — — — — — — — →

2. ← — — — — — — — — — →

3. ← — — — — — — — — — →

4. ← — — — — — — — — — →

5. ← — — — — — — — — — →

6. ← — — — — — — — — — →

7. ← — — — — — — — — — →

8. ← — — — — — — — — — →

9. ← — — — — — — — — — →

10. ← — — — — — — — — — →

Number Patterns (I) Answers

Name: _____

Date: _____

Identify, complete and describe each number pattern.

1. ← 46 — 43 — 40 — 37 — 34 — 31 — 28 — 25 — 22 — 19 →

Start at 46 and subtract 3 each time.

2. ← 76 — 71 — 66 — 61 — 56 — 51 — 46 — 41 — 36 — 31 →

Start at 76 and subtract 5 each time.

3. ← 509 — 459 — 409 — 359 — 309 — 259 — 209 — 159 — 109 — 59 →

Start at 509 and subtract 50 each time.

4. ← 89 — 81 — 73 — 65 — 57 — 49 — 41 — 33 — 25 — 17 →

Start at 89 and subtract 8 each time.

5. ← 124 — 120 — 116 — 112 — 108 — 104 — 100 — 96 — 92 — 88 →

Start at 124 and subtract 4 each time.

6. ← 129 — 119 — 109 — 99 — 89 — 79 — 69 — 59 — 49 — 39 →

Start at 129 and subtract 10 each time.

7. ← 153 — 147 — 141 — 135 — 129 — 123 — 117 — 111 — 105 — 99 →

Start at 153 and subtract 6 each time.

8. ← 230 — 205 — 180 — 155 — 130 — 105 — 80 — 55 — 30 — 5 →

Start at 230 and subtract 25 each time.

9. ← 202 — 187 — 172 — 157 — 142 — 127 — 112 — 97 — 82 — 67 →

Start at 202 and subtract 15 each time.

10. ← 59 — 58 — 57 — 56 — 55 — 54 — 53 — 52 — 51 — 50 →

Start at 59 and subtract 1 each time.

Number Patterns (J)

Name: _____

Date: _____

Identify, complete and describe each number pattern.

1. \leftarrow — 192 — — 168 — — — 132 — — — \rightarrow

2. \leftarrow — 169 — 158 — — — — — — — 81 \rightarrow

3. \leftarrow — 490 — — 390 — — 290 — — — — \rightarrow

4. \leftarrow 65 — — 55 — — — — — — 25 — \rightarrow

5. \leftarrow — — 113 — — — 92 — 85 — — — \rightarrow

6. \leftarrow — — — — 22 — 18 — — — 6 — \rightarrow

7. \leftarrow — — 47 — — 43 — — 39 — — — \rightarrow

8. \leftarrow — — — — — — 61 — — 49 — 43 \rightarrow

9. \leftarrow — — — — 18 — 17 — — 15 — — \rightarrow

10. \leftarrow — — — 116 — — — 89 — — 71 — \rightarrow

Number Patterns (J) Answers

Name: _____

Date: _____

Identify, complete and describe each number pattern.

1. ← 204 — 192 — 180 — 168 — 156 — 144 — 132 — 120 — 108 — 96 →

Start at 204 and subtract 12 each time.

2. ← 180 — 169 — 158 — 147 — 136 — 125 — 114 — 103 — 92 — 81 →

Start at 180 and subtract 11 each time.

3. ← 540 — 490 — 440 — 390 — 340 — 290 — 240 — 190 — 140 — 90 →

Start at 540 and subtract 50 each time.

4. ← 65 — 60 — 55 — 50 — 45 — 40 — 35 — 30 — 25 — 20 →

Start at 65 and subtract 5 each time.

5. ← 127 — 120 — 113 — 106 — 99 — 92 — 85 — 78 — 71 — 64 →

Start at 127 and subtract 7 each time.

6. ← 38 — 34 — 30 — 26 — 22 — 18 — 14 — 10 — 6 — 2 →

Start at 38 and subtract 4 each time.

7. ← 51 — 49 — 47 — 45 — 43 — 41 — 39 — 37 — 35 — 33 →

Start at 51 and subtract 2 each time.

8. ← 97 — 91 — 85 — 79 — 73 — 67 — 61 — 55 — 49 — 43 →

Start at 97 and subtract 6 each time.

9. ← 22 — 21 — 20 — 19 — 18 — 17 — 16 — 15 — 14 — 13 →

Start at 22 and subtract 1 each time.

10. ← 143 — 134 — 125 — 116 — 107 — 98 — 89 — 80 — 71 — 62 →

Start at 143 and subtract 9 each time.