

# Number Patterns (D)

Name: \_\_\_\_\_

Date: \_\_\_\_\_

Identify, complete and describe each number pattern.

1.  $\leftarrow$   — 82 —  — 76 —  —  —  —  — 61 —   $\rightarrow$

2.  $\leftarrow$   — 168 —  —  —  — 124 —  —  — 91 —   $\rightarrow$

3.  $\leftarrow$   —  — 110 — 104 —  —  — 86 —  —  —   $\rightarrow$

4.  $\leftarrow$   —  —  —  — 108 —  —  —  — 60 — 48  $\rightarrow$

5.  $\leftarrow$   — 75 —  —  —  —  —  — 27 —  — 11  $\rightarrow$

6.  $\leftarrow$   —  — 51 —  —  —  —  — 31 — 27 —   $\rightarrow$

7.  $\leftarrow$   — 482 —  —  — 332 —  —  —  — 132 —   $\rightarrow$

8.  $\leftarrow$   —  —  — 56 —  —  —  —  — 46 — 44  $\rightarrow$

9.  $\leftarrow$   —  —  — 249 —  — 199 —  — 149 —  —   $\rightarrow$

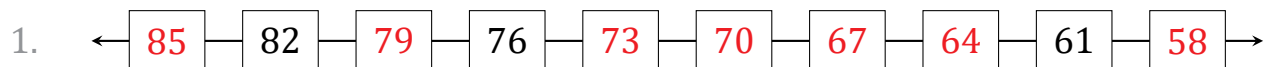
10.  $\leftarrow$   —  —  — 67 —  — 47 —  —  —  — 7  $\rightarrow$

# Number Patterns (D) Answers

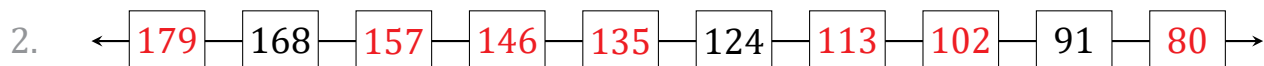
Name: \_\_\_\_\_

Date: \_\_\_\_\_

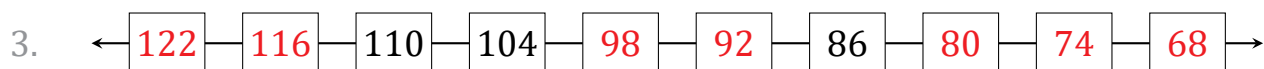
Identify, complete and describe each number pattern.



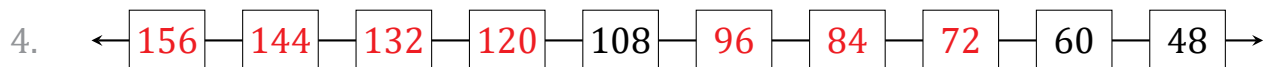
Start at 85 and subtract 3 each time.



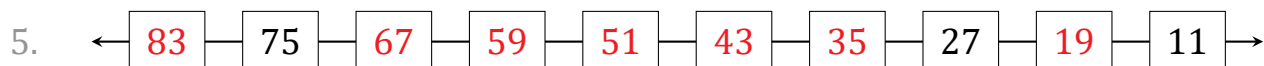
Start at 179 and subtract 11 each time.



Start at 122 and subtract 6 each time.



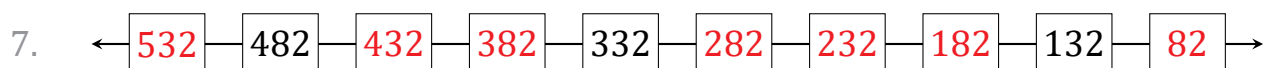
Start at 156 and subtract 12 each time.



Start at 83 and subtract 8 each time.



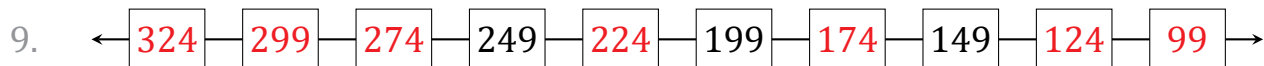
Start at 59 and subtract 4 each time.



Start at 532 and subtract 50 each time.



Start at 62 and subtract 2 each time.



Start at 324 and subtract 25 each time.



Start at 97 and subtract 10 each time.