

# Ten Frames (D)

Name: \_\_\_\_\_

Date: \_\_\_\_\_

Make a ten frame to represent each number.


1


9


10


2


8


6


5


3


4

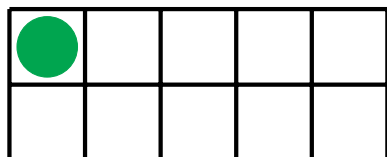

7

# Ten Frames (D) Answers


Name: \_\_\_\_\_

Date: \_\_\_\_\_


Make a ten frame to represent each number.



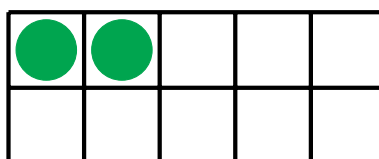
1



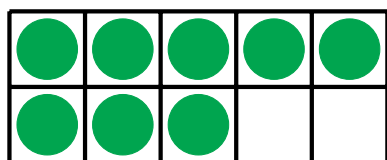
9



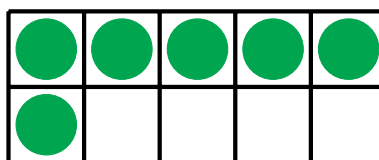
10



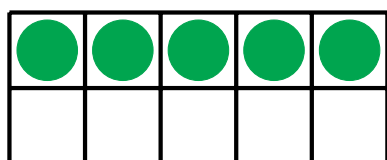
2



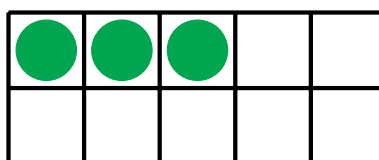
8



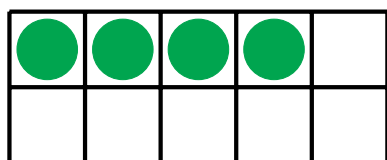
6



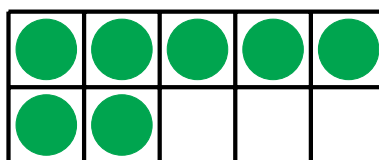
5



3



4



7