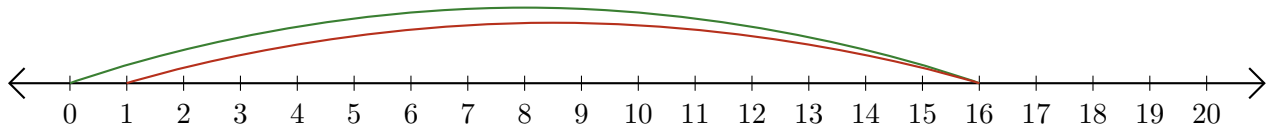


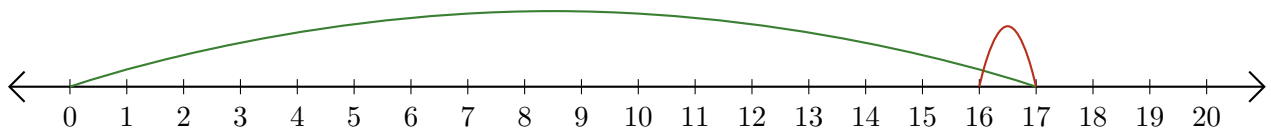
Reading Number Lines (E)

Write the question that each number line demonstrates.

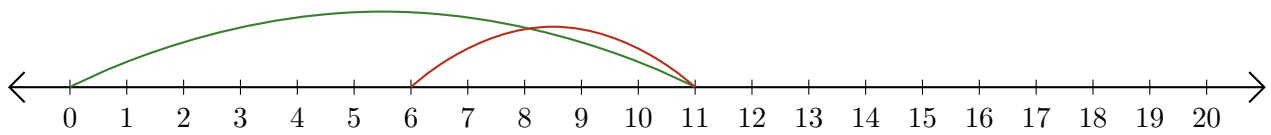
1. $\underline{\quad} - \underline{\quad} = \underline{\quad}$



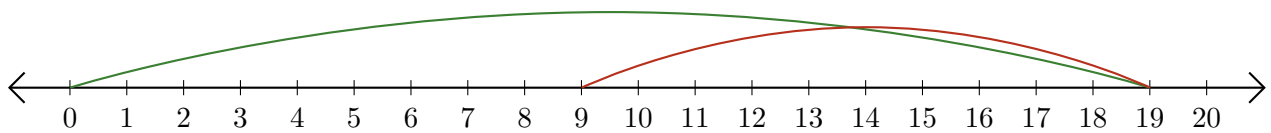
2. $\underline{\quad} - \underline{\quad} = \underline{\quad}$



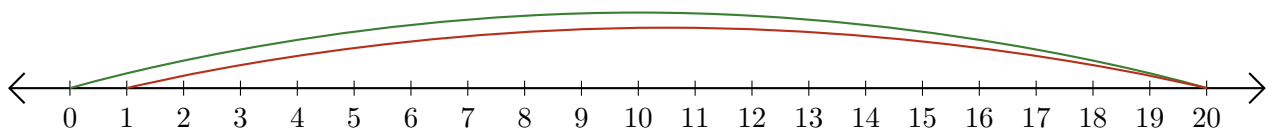
3. $\underline{\quad} - \underline{\quad} = \underline{\quad}$



4. $\underline{\quad} - \underline{\quad} = \underline{\quad}$



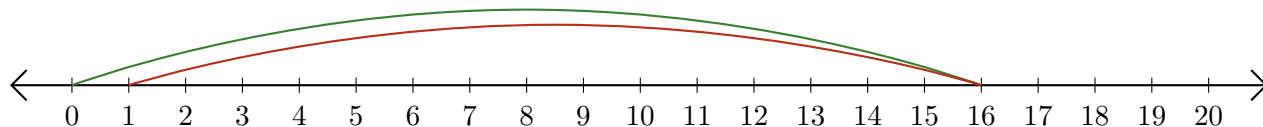
5. $\underline{\quad} - \underline{\quad} = \underline{\quad}$



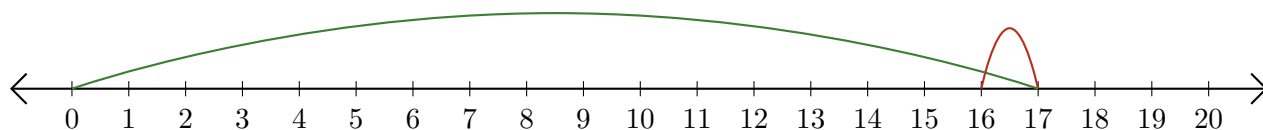
Reading Number Lines (E) Answers

Write the question that each number line demonstrates.

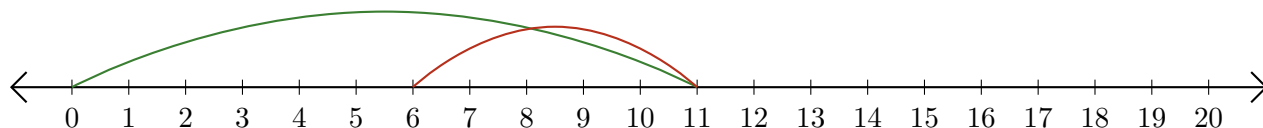
1. $\underline{16} - \underline{15} = \underline{1}$



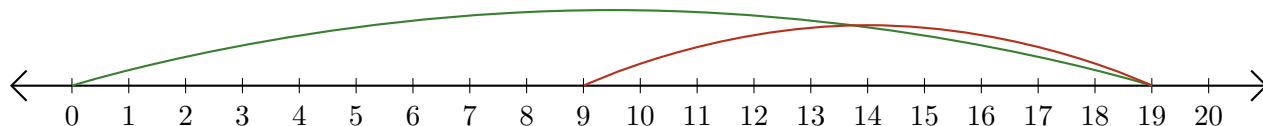
2. $\underline{17} - \underline{1} = \underline{16}$



3. $\underline{11} - \underline{5} = \underline{6}$



4. $\underline{19} - \underline{10} = \underline{9}$



5. $\underline{20} - \underline{19} = \underline{1}$

