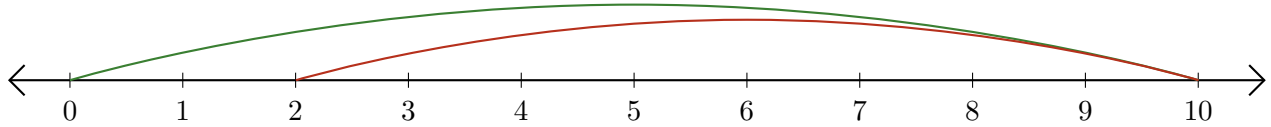


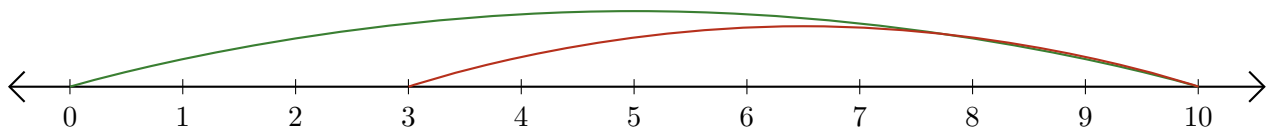
# Reading Number Lines (C)

Write the question that each number line demonstrates.

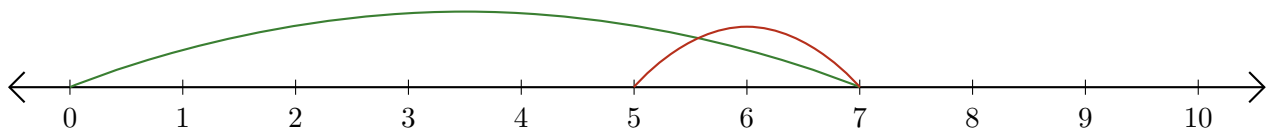
1.  $\underline{\quad} - \underline{\quad} = \underline{\quad}$



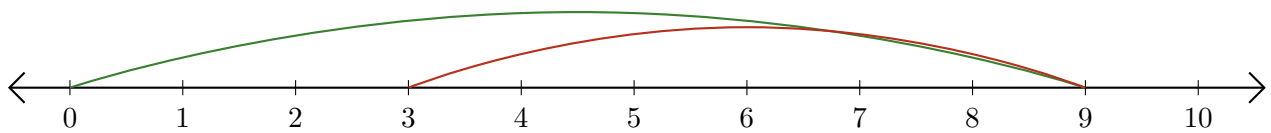
2.  $\underline{\quad} - \underline{\quad} = \underline{\quad}$



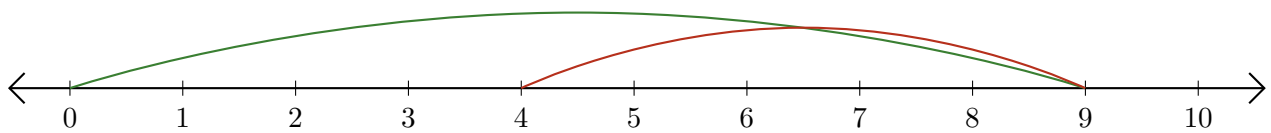
3.  $\underline{\quad} - \underline{\quad} = \underline{\quad}$



4.  $\underline{\quad} - \underline{\quad} = \underline{\quad}$



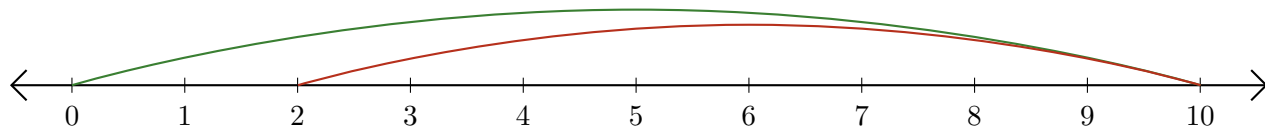
5.  $\underline{\quad} - \underline{\quad} = \underline{\quad}$



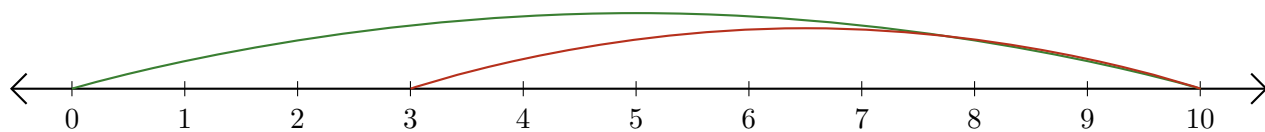
# Reading Number Lines (C) Answers

Write the question that each number line demonstrates.

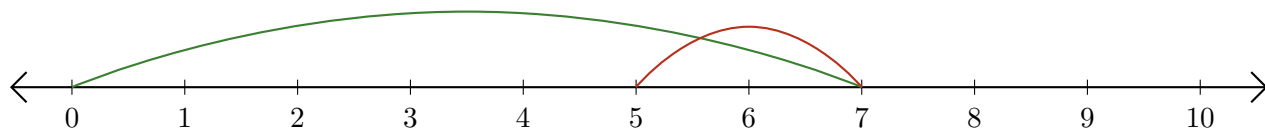
1.  $\underline{10} - \underline{8} = \underline{2}$



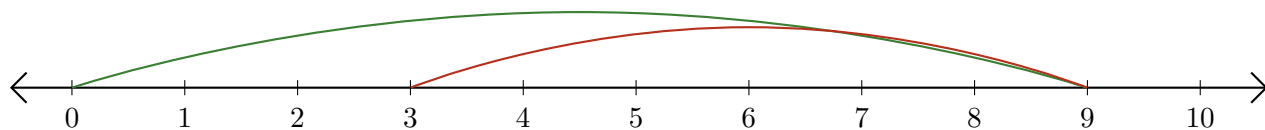
2.  $\underline{10} - \underline{7} = \underline{3}$



3.  $\underline{7} - \underline{2} = \underline{5}$



4.  $\underline{9} - \underline{6} = \underline{3}$



5.  $\underline{9} - \underline{5} = \underline{4}$

