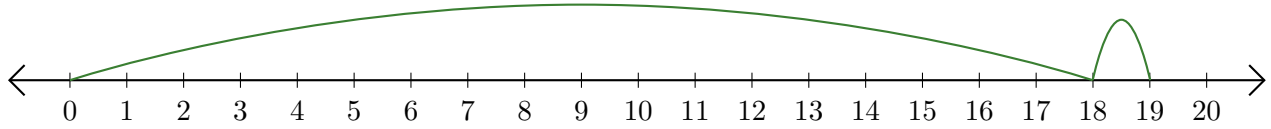


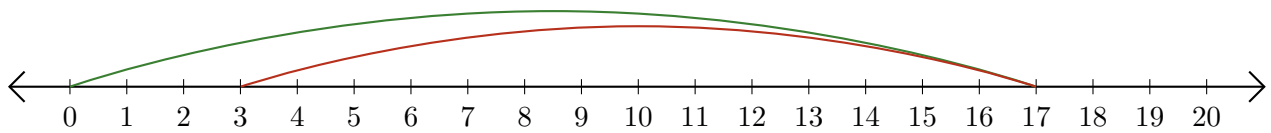
Reading Number Lines (J)

Write the question that each number line demonstrates.

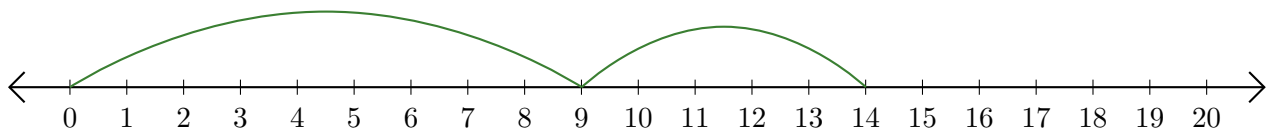
1. $\underline{\quad} + \underline{\quad} = \underline{\quad}$



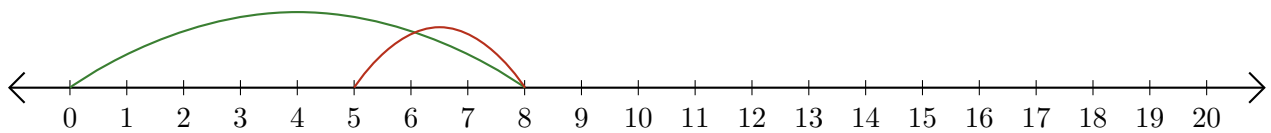
2. $\underline{\quad} - \underline{\quad} = \underline{\quad}$



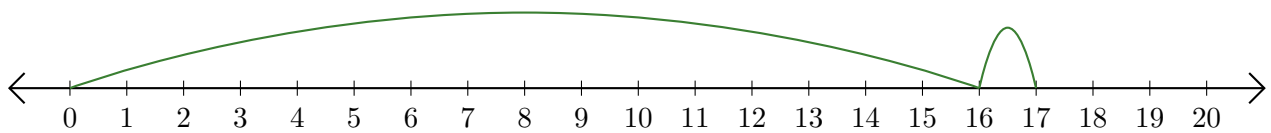
3. $\underline{\quad} + \underline{\quad} = \underline{\quad}$



4. $\underline{\quad} - \underline{\quad} = \underline{\quad}$



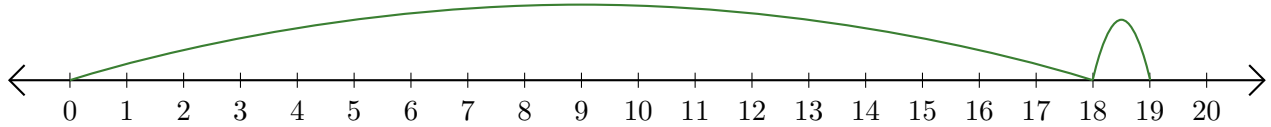
5. $\underline{\quad} + \underline{\quad} = \underline{\quad}$



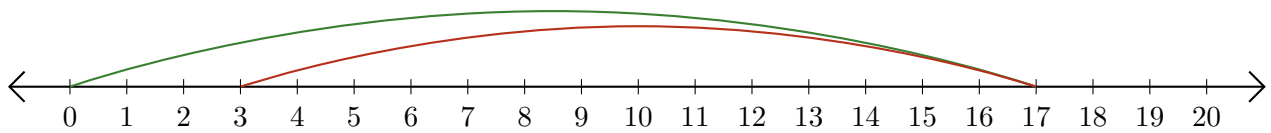
Reading Number Lines (J) Answers

Write the question that each number line demonstrates.

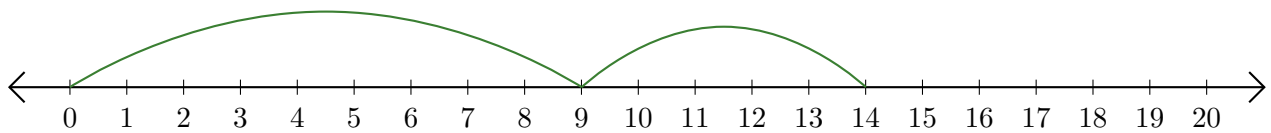
1. $\underline{18} + \underline{1} = \underline{19}$



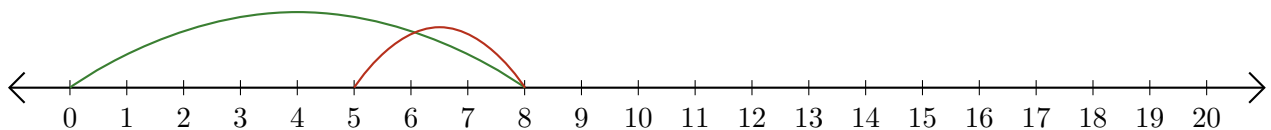
2. $\underline{17} - \underline{14} = \underline{3}$



3. $\underline{9} + \underline{5} = \underline{14}$



4. $\underline{8} - \underline{3} = \underline{5}$



5. $\underline{16} + \underline{1} = \underline{17}$

