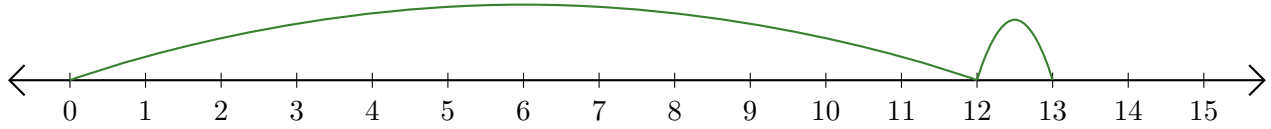


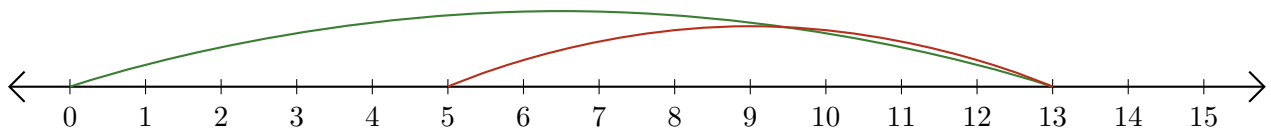
Reading Number Lines (D)

Write the question that each number line demonstrates.

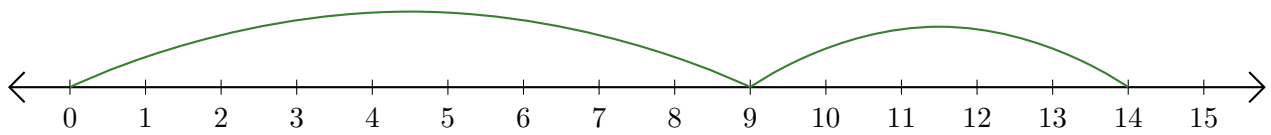
1. $\underline{\quad} + \underline{\quad} = \underline{\quad}$



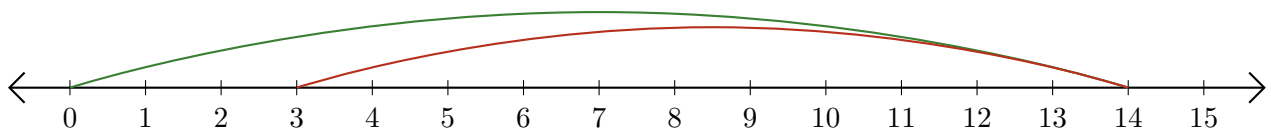
2. $\underline{\quad} - \underline{\quad} = \underline{\quad}$



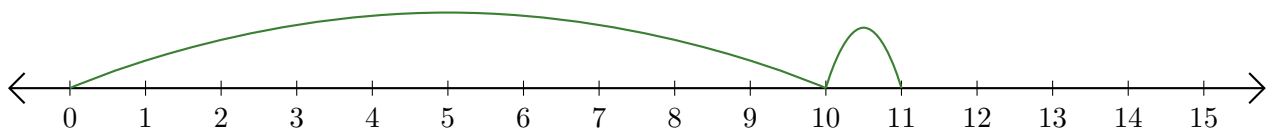
3. $\underline{\quad} + \underline{\quad} = \underline{\quad}$



4. $\underline{\quad} - \underline{\quad} = \underline{\quad}$



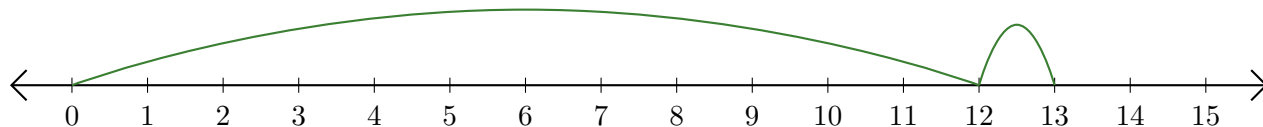
5. $\underline{\quad} + \underline{\quad} = \underline{\quad}$



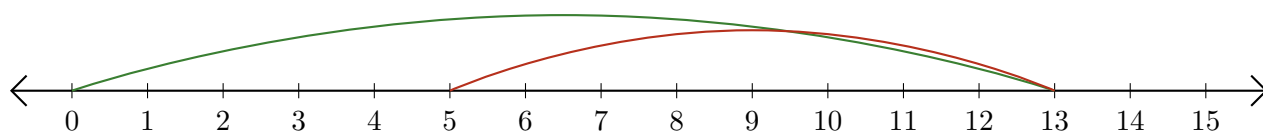
Reading Number Lines (D) Answers

Write the question that each number line demonstrates.

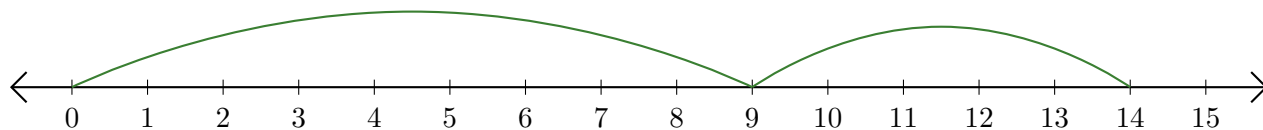
1. $\underline{12} + \underline{1} = \underline{13}$



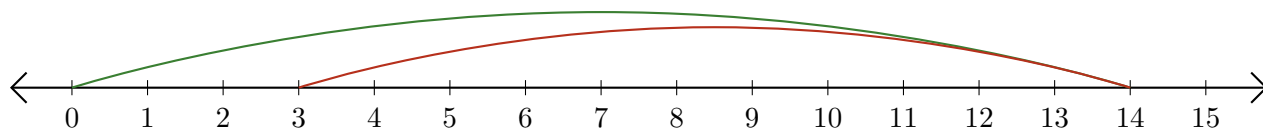
2. $\underline{13} - \underline{8} = \underline{5}$



3. $\underline{9} + \underline{5} = \underline{14}$



4. $\underline{14} - \underline{11} = \underline{3}$



5. $\underline{10} + \underline{1} = \underline{11}$

