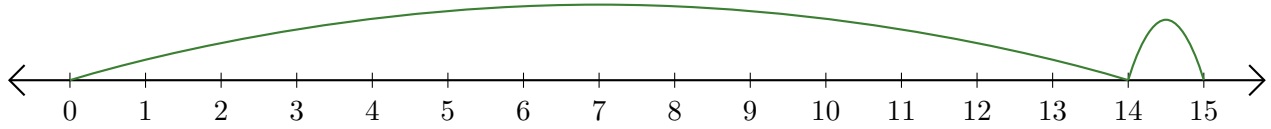


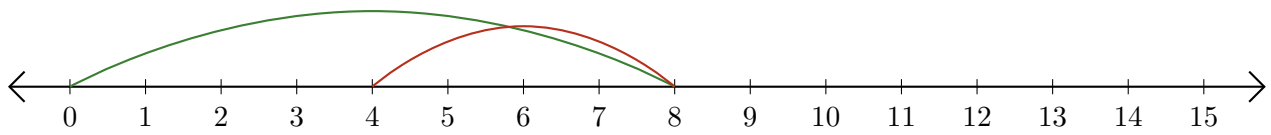
Reading Number Lines (A)

Write the question that each number line demonstrates.

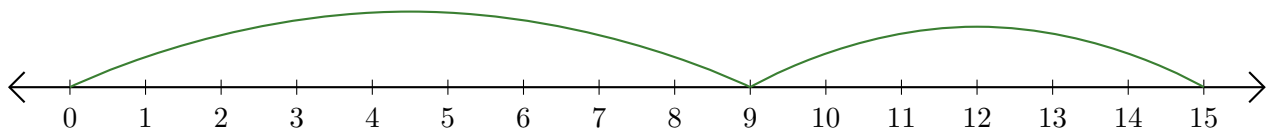
1. $\underline{\quad} + \underline{\quad} = \underline{\quad}$



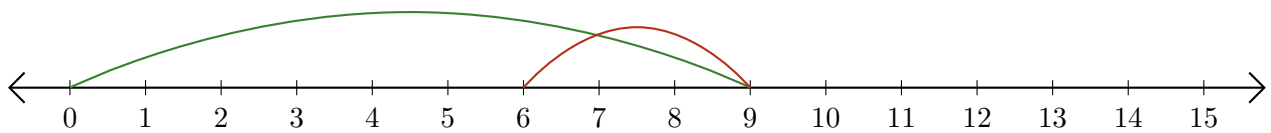
2. $\underline{\quad} - \underline{\quad} = \underline{\quad}$



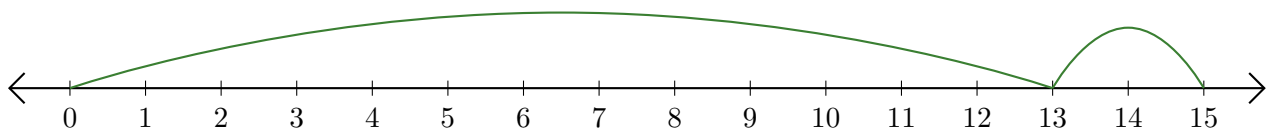
3. $\underline{\quad} + \underline{\quad} = \underline{\quad}$



4. $\underline{\quad} - \underline{\quad} = \underline{\quad}$



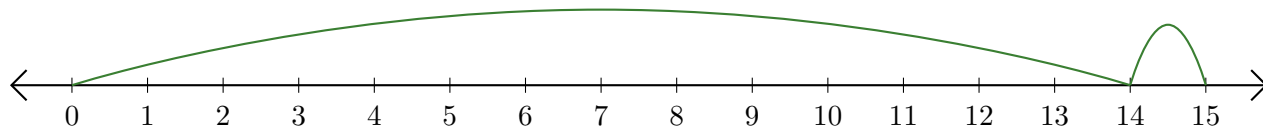
5. $\underline{\quad} + \underline{\quad} = \underline{\quad}$



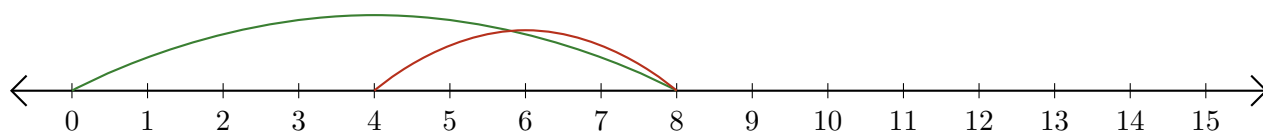
Reading Number Lines (A) Answers

Write the question that each number line demonstrates.

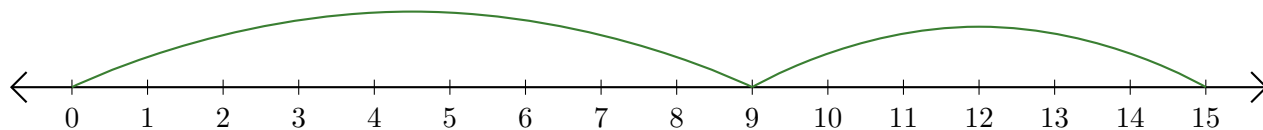
1. $\underline{14} + \underline{1} = \underline{15}$



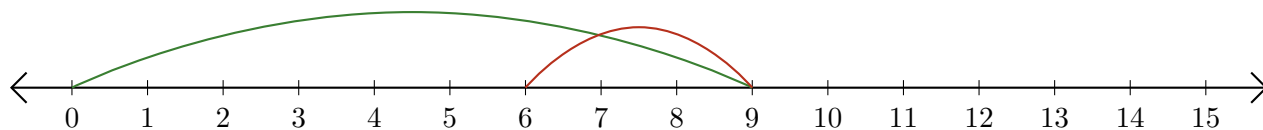
2. $\underline{8} - \underline{4} = \underline{4}$



3. $\underline{9} + \underline{6} = \underline{15}$



4. $\underline{9} - \underline{3} = \underline{6}$



5. $\underline{13} + \underline{2} = \underline{15}$

