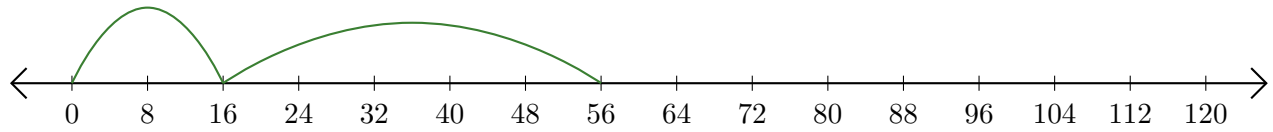


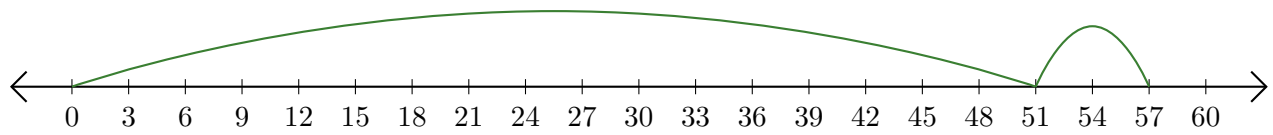
# Reading Number Lines (H)

Write the question that each number line demonstrates.

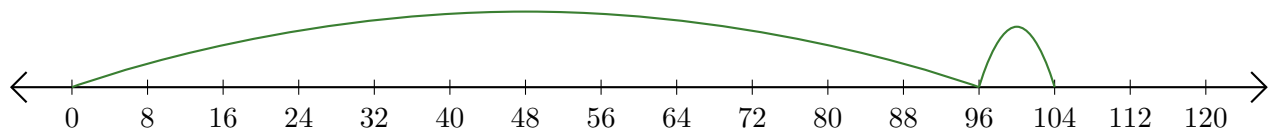
1.  $\underline{\quad} + \underline{\quad} = \underline{\quad}$



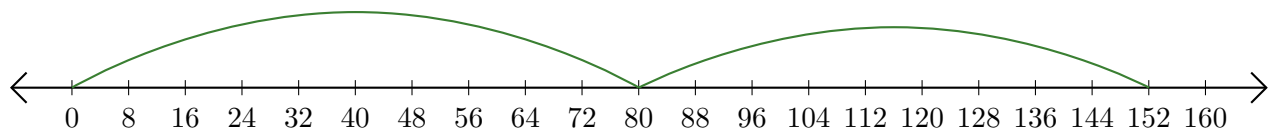
2.  $\underline{\quad} + \underline{\quad} = \underline{\quad}$



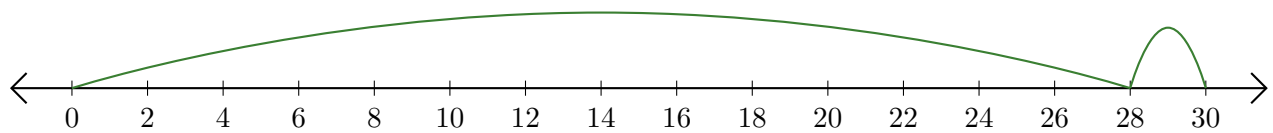
3.  $\underline{\quad} + \underline{\quad} = \underline{\quad}$



4.  $\underline{\quad} + \underline{\quad} = \underline{\quad}$



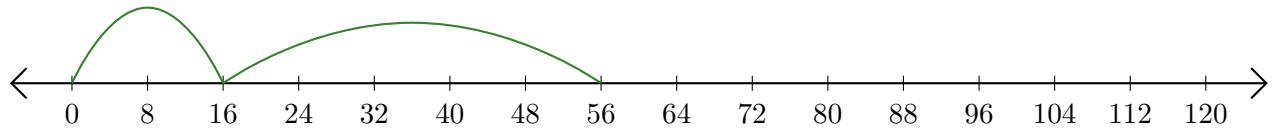
5.  $\underline{\quad} + \underline{\quad} = \underline{\quad}$



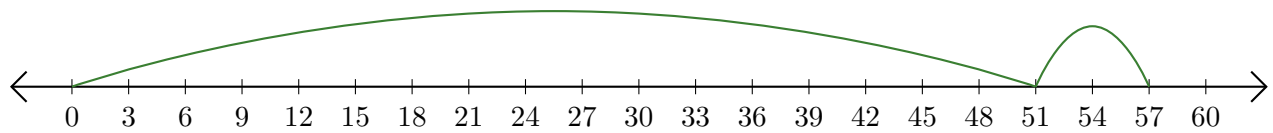
# Reading Number Lines (H) Answers

Write the question that each number line demonstrates.

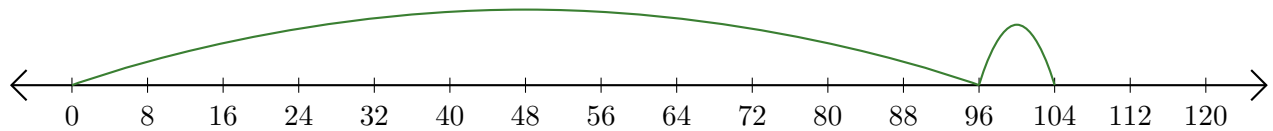
1.  $\underline{16} + \underline{40} = \underline{56}$



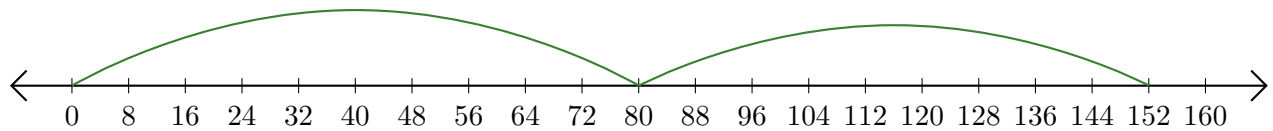
2.  $\underline{51} + \underline{6} = \underline{57}$



3.  $\underline{96} + \underline{8} = \underline{104}$



4.  $\underline{80} + \underline{72} = \underline{152}$



5.  $\underline{28} + \underline{2} = \underline{30}$

