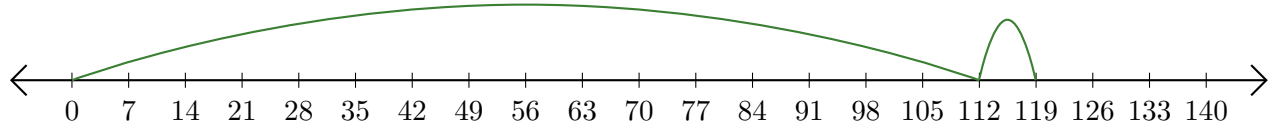


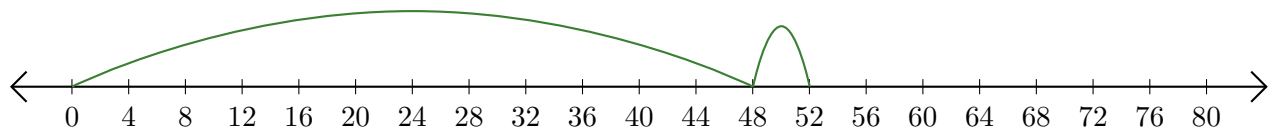
Reading Number Lines (G)

Write the question that each number line demonstrates.

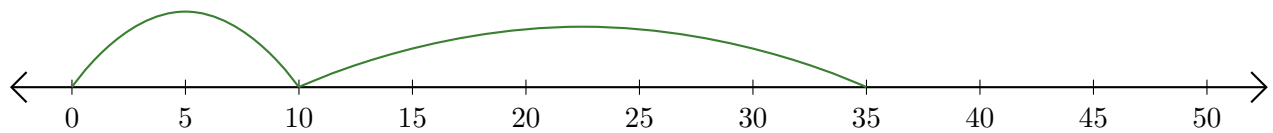
1. $\underline{\quad} + \underline{\quad} = \underline{\quad}$



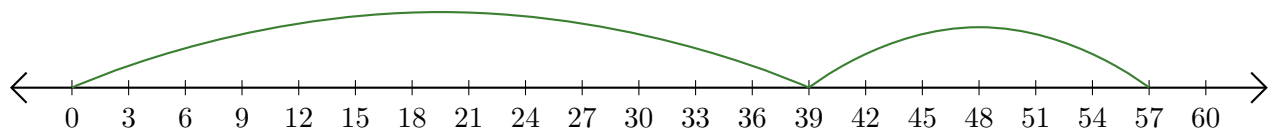
2. $\underline{\quad} + \underline{\quad} = \underline{\quad}$



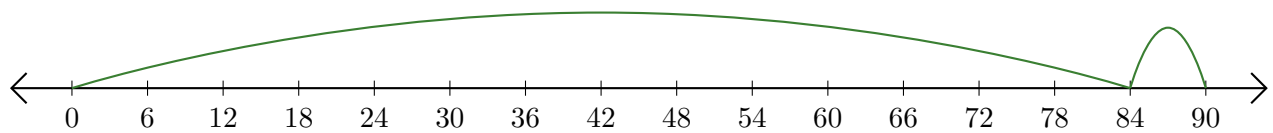
3. $\underline{\quad} + \underline{\quad} = \underline{\quad}$



4. $\underline{\quad} + \underline{\quad} = \underline{\quad}$



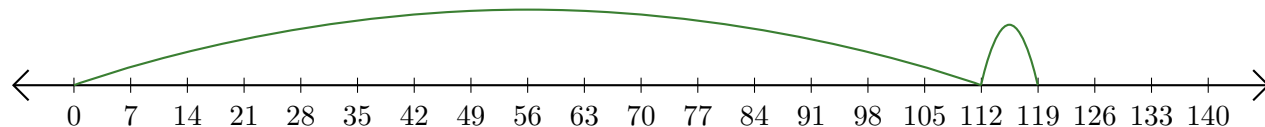
5. $\underline{\quad} + \underline{\quad} = \underline{\quad}$



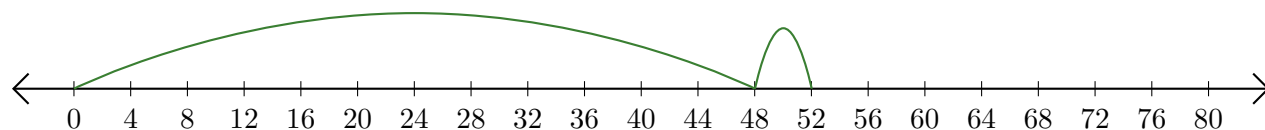
Reading Number Lines (G) Answers

Write the question that each number line demonstrates.

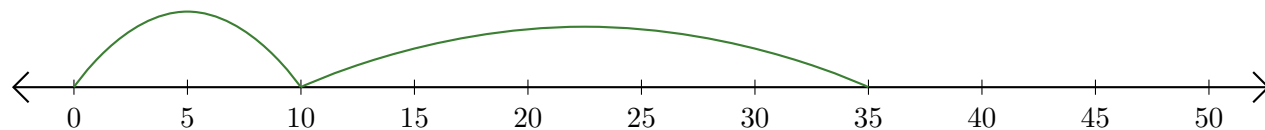
1. $\underline{112} + \underline{7} = \underline{119}$



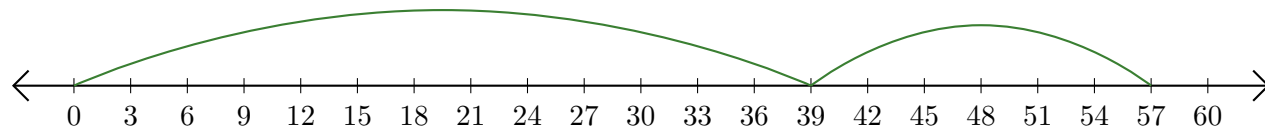
2. $\underline{48} + \underline{4} = \underline{52}$



3. $\underline{10} + \underline{25} = \underline{35}$



4. $\underline{39} + \underline{18} = \underline{57}$



5. $\underline{84} + \underline{6} = \underline{90}$

