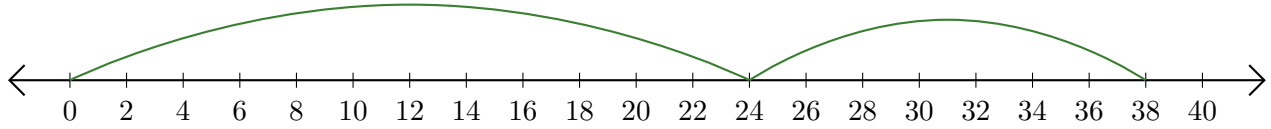


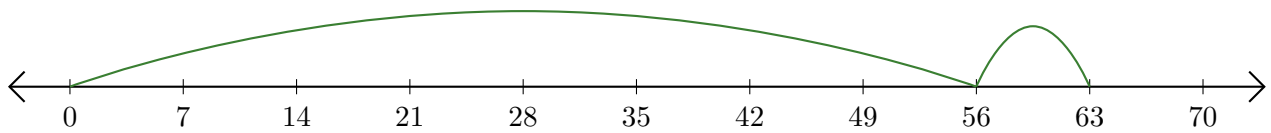
Reading Number Lines (F)

Write the question that each number line demonstrates.

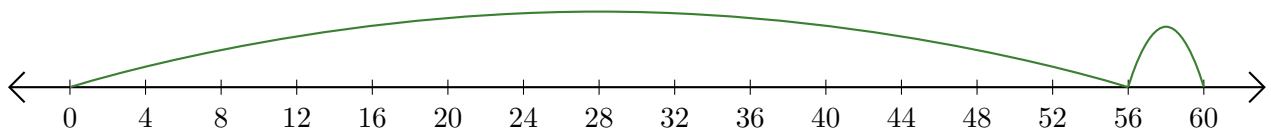
1. $\underline{\quad} + \underline{\quad} = \underline{\quad}$



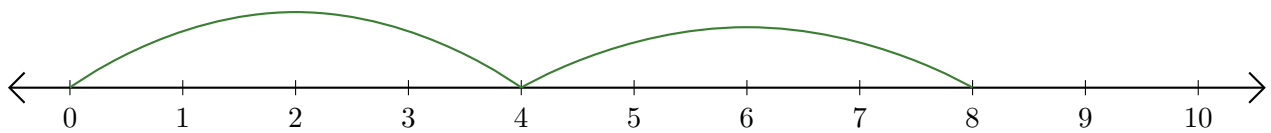
2. $\underline{\quad} + \underline{\quad} = \underline{\quad}$



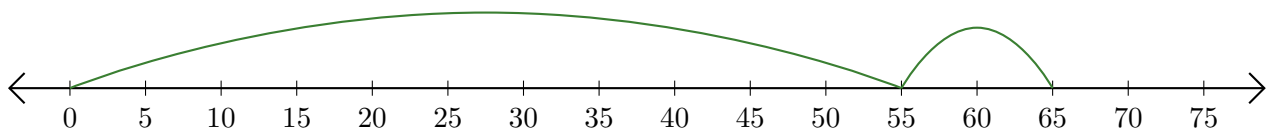
3. $\underline{\quad} + \underline{\quad} = \underline{\quad}$



4. $\underline{\quad} + \underline{\quad} = \underline{\quad}$



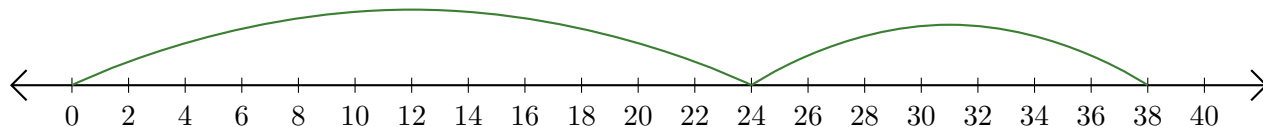
5. $\underline{\quad} + \underline{\quad} = \underline{\quad}$



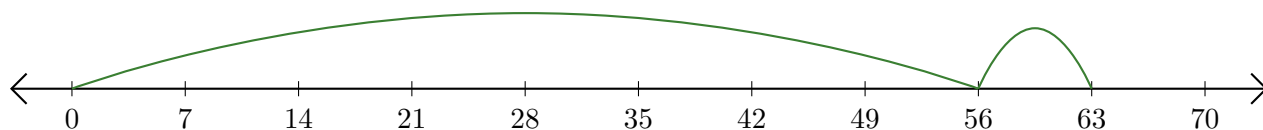
Reading Number Lines (F) Answers

Write the question that each number line demonstrates.

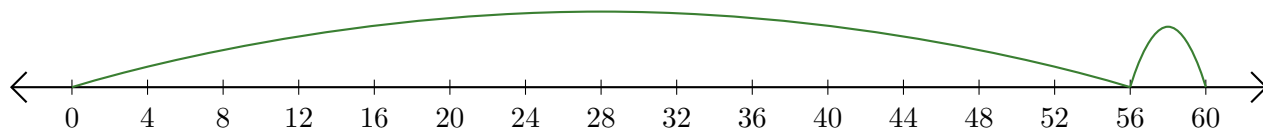
1. $\underline{24} + \underline{14} = \underline{38}$



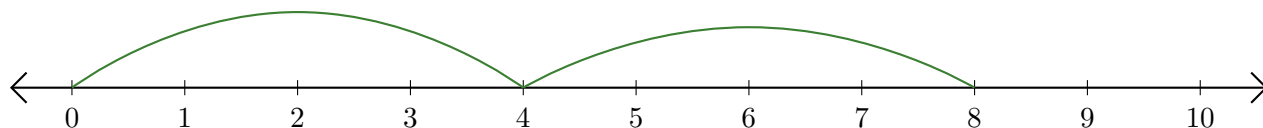
2. $\underline{56} + \underline{7} = \underline{63}$



3. $\underline{56} + \underline{4} = \underline{60}$



4. $\underline{4} + \underline{4} = \underline{8}$



5. $\underline{55} + \underline{10} = \underline{65}$

