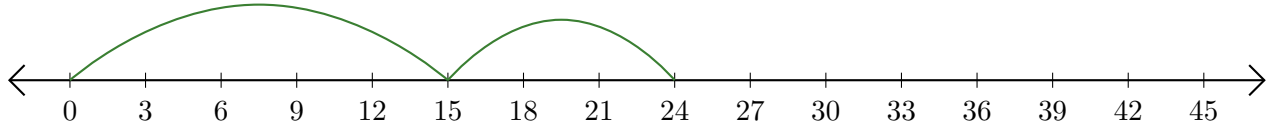


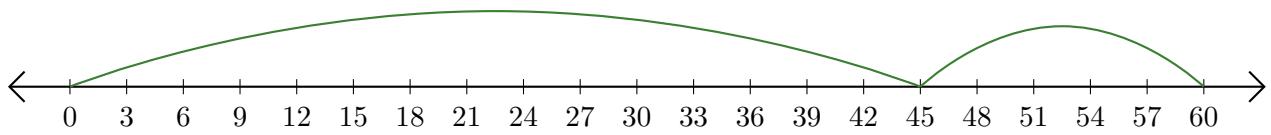
Reading Number Lines (C)

Write the question that each number line demonstrates.

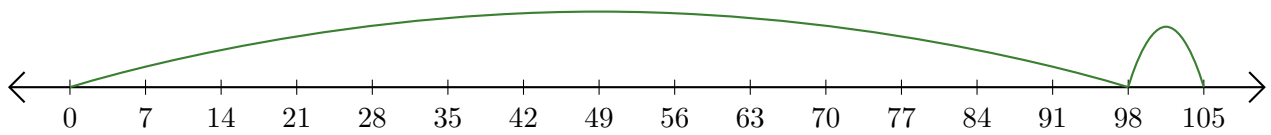
1. $\underline{\quad} + \underline{\quad} = \underline{\quad}$



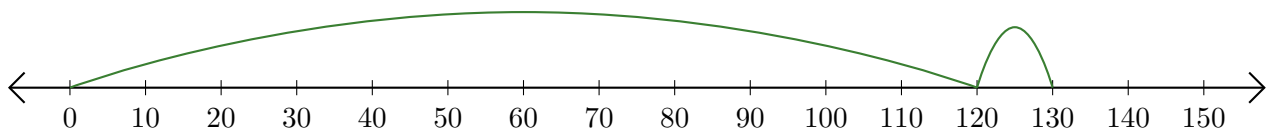
2. $\underline{\quad} + \underline{\quad} = \underline{\quad}$



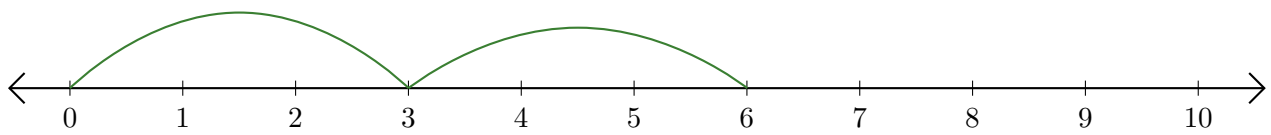
3. $\underline{\quad} + \underline{\quad} = \underline{\quad}$



4. $\underline{\quad} + \underline{\quad} = \underline{\quad}$



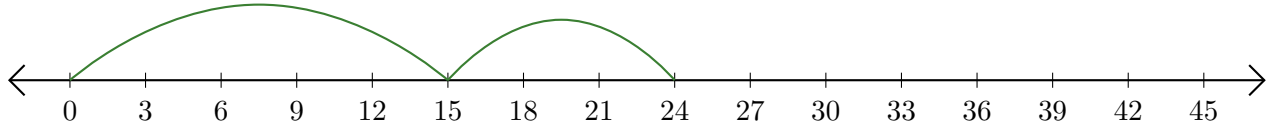
5. $\underline{\quad} + \underline{\quad} = \underline{\quad}$



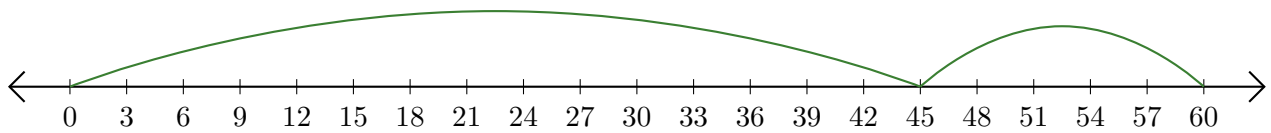
Reading Number Lines (C) Answers

Write the question that each number line demonstrates.

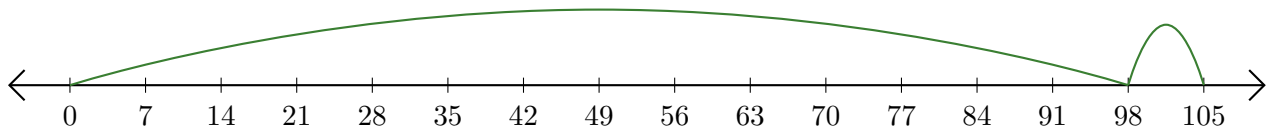
1. $\underline{15} + \underline{9} = \underline{24}$



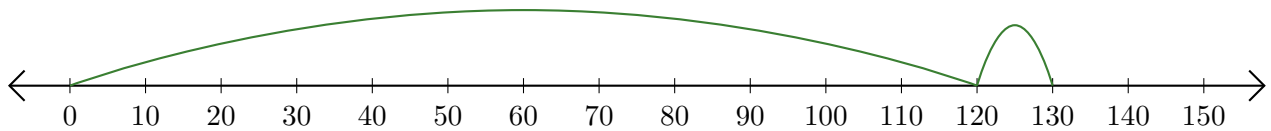
2. $\underline{45} + \underline{15} = \underline{60}$



3. $\underline{98} + \underline{7} = \underline{105}$



4. $\underline{120} + \underline{10} = \underline{130}$



5. $\underline{3} + \underline{3} = \underline{6}$

