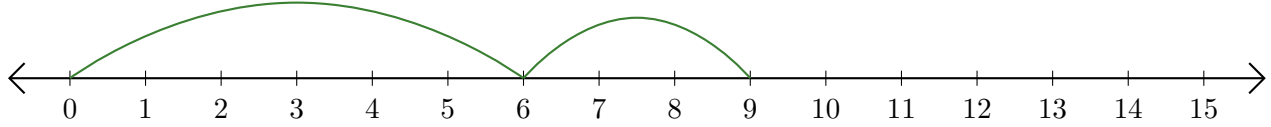


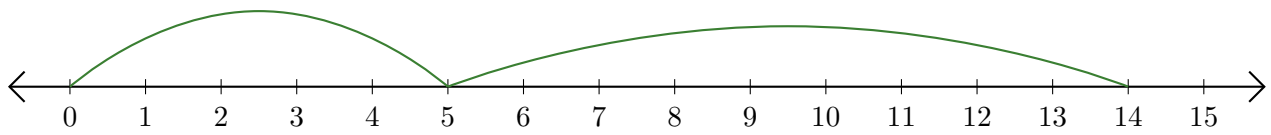
Reading Number Lines (A)

Write the question that each number line demonstrates.

1. $\underline{\quad} + \underline{\quad} = \underline{\quad}$



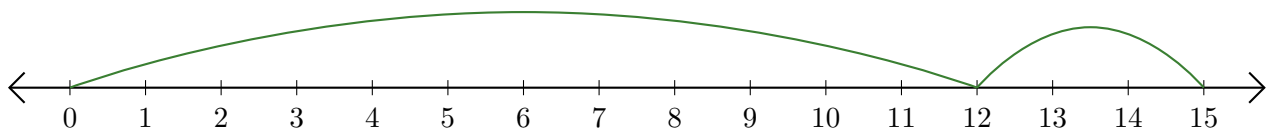
2. $\underline{\quad} + \underline{\quad} = \underline{\quad}$



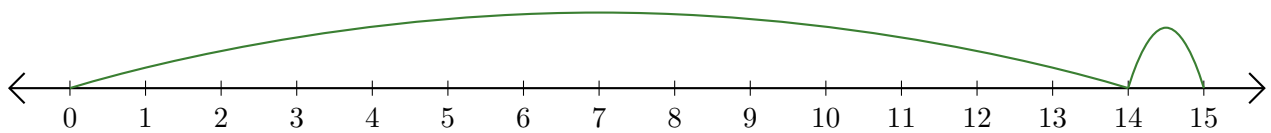
3. $\underline{\quad} + \underline{\quad} = \underline{\quad}$



4. $\underline{\quad} + \underline{\quad} = \underline{\quad}$



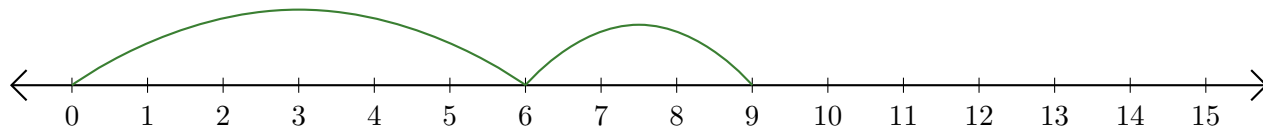
5. $\underline{\quad} + \underline{\quad} = \underline{\quad}$



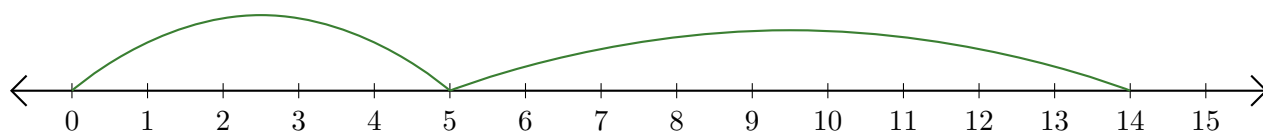
Reading Number Lines (A) Answers

Write the question that each number line demonstrates.

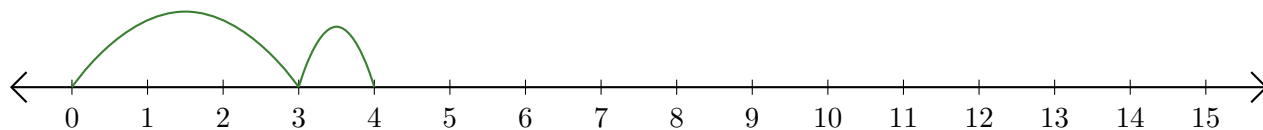
1. $\underline{6} + \underline{3} = \underline{9}$



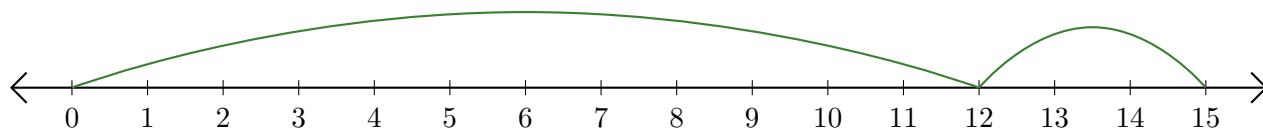
2. $\underline{5} + \underline{9} = \underline{14}$



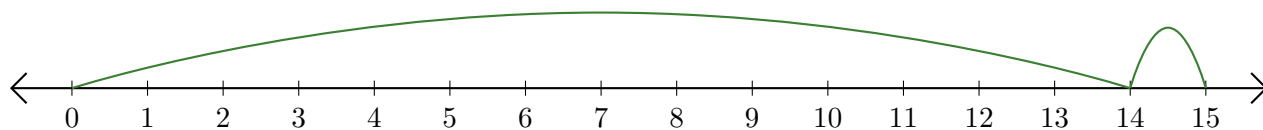
3. $\underline{3} + \underline{1} = \underline{4}$



4. $\underline{12} + \underline{3} = \underline{15}$



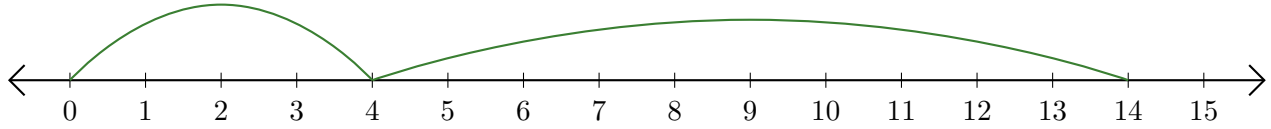
5. $\underline{14} + \underline{1} = \underline{15}$



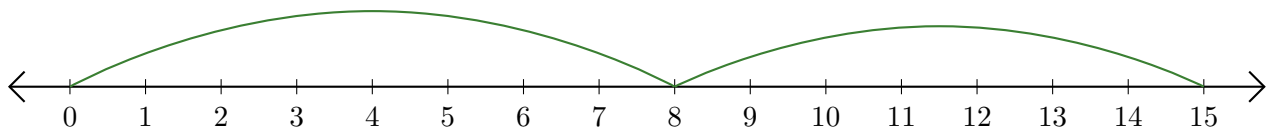
Reading Number Lines (B)

Write the question that each number line demonstrates.

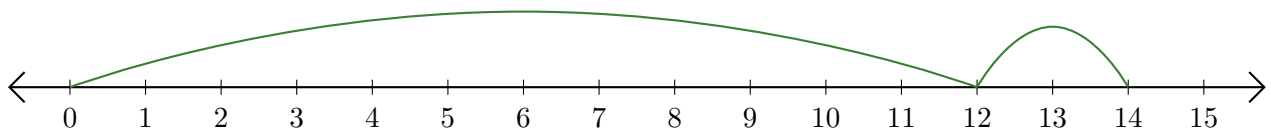
1. $\underline{\quad} + \underline{\quad} = \underline{\quad}$



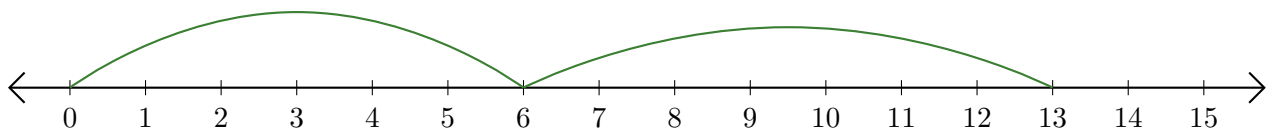
2. $\underline{\quad} + \underline{\quad} = \underline{\quad}$



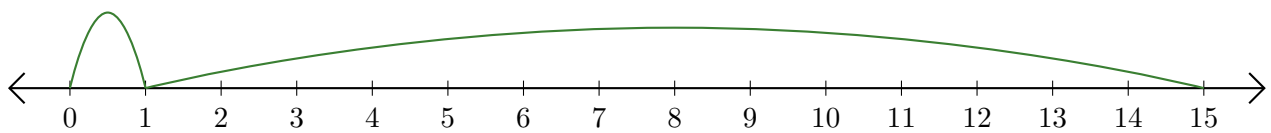
3. $\underline{\quad} + \underline{\quad} = \underline{\quad}$



4. $\underline{\quad} + \underline{\quad} = \underline{\quad}$



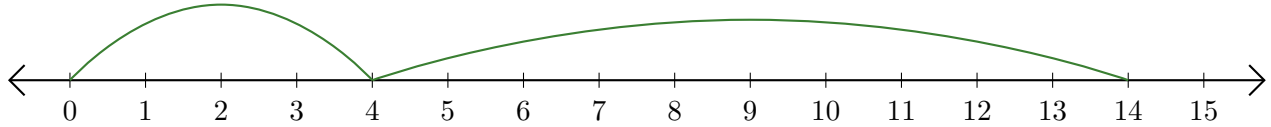
5. $\underline{\quad} + \underline{\quad} = \underline{\quad}$



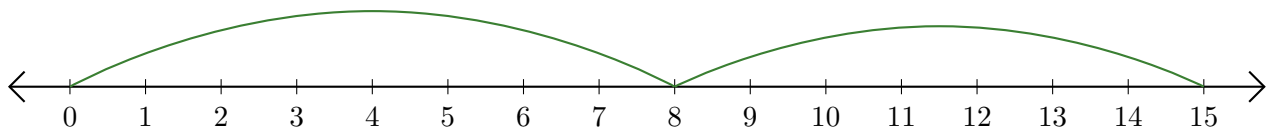
Reading Number Lines (B) Answers

Write the question that each number line demonstrates.

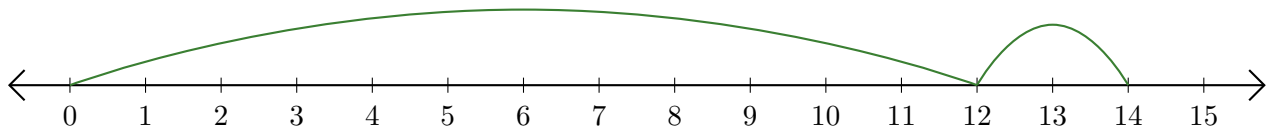
1. $\underline{4} + \underline{10} = \underline{14}$



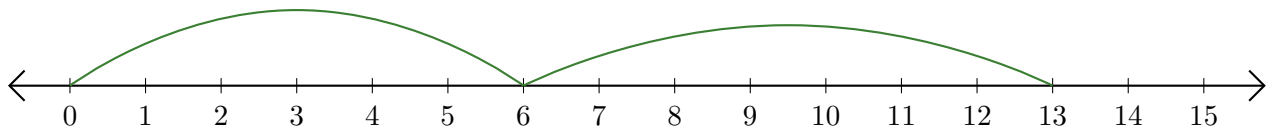
2. $\underline{8} + \underline{7} = \underline{15}$



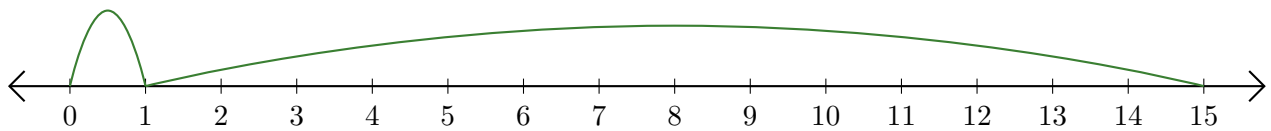
3. $\underline{12} + \underline{2} = \underline{14}$



4. $\underline{6} + \underline{7} = \underline{13}$



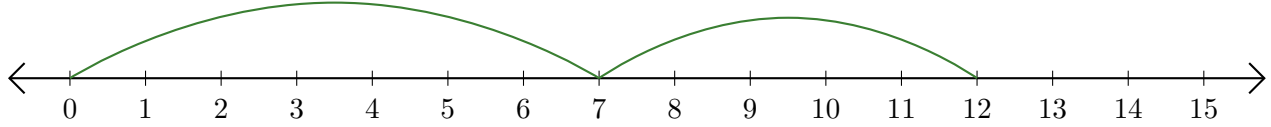
5. $\underline{1} + \underline{14} = \underline{15}$



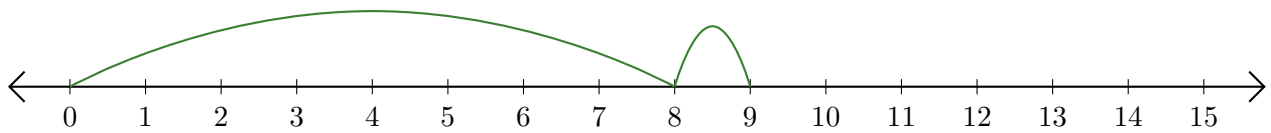
Reading Number Lines (C)

Write the question that each number line demonstrates.

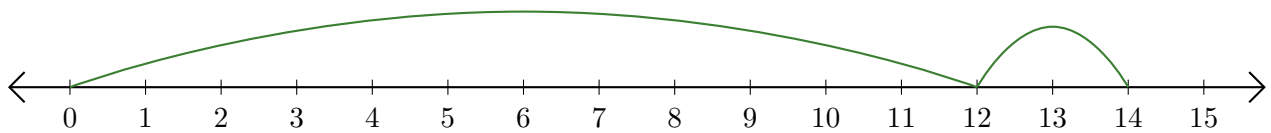
1. $\underline{\quad} + \underline{\quad} = \underline{\quad}$



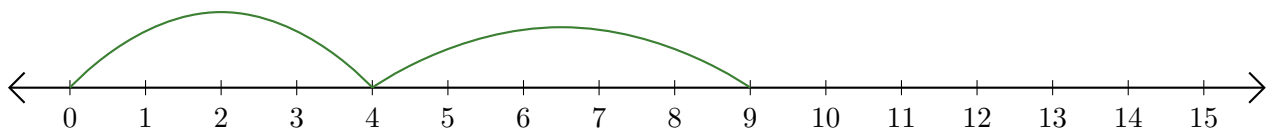
2. $\underline{\quad} + \underline{\quad} = \underline{\quad}$



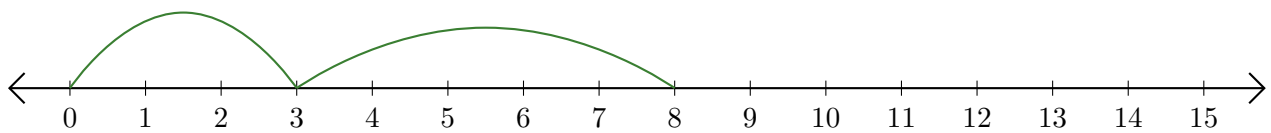
3. $\underline{\quad} + \underline{\quad} = \underline{\quad}$



4. $\underline{\quad} + \underline{\quad} = \underline{\quad}$



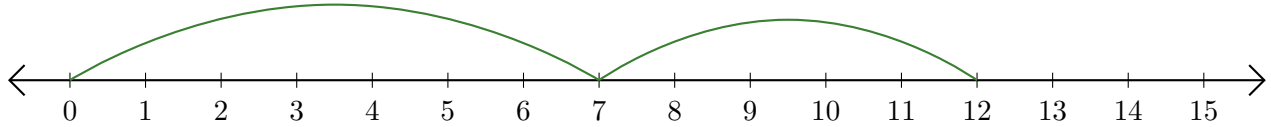
5. $\underline{\quad} + \underline{\quad} = \underline{\quad}$



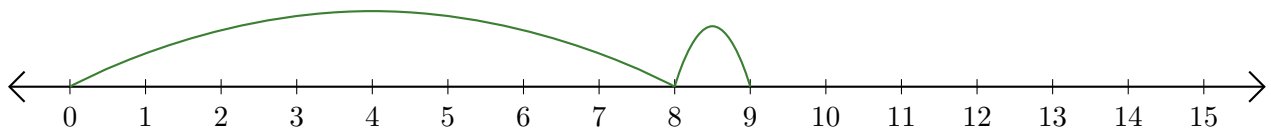
Reading Number Lines (C) Answers

Write the question that each number line demonstrates.

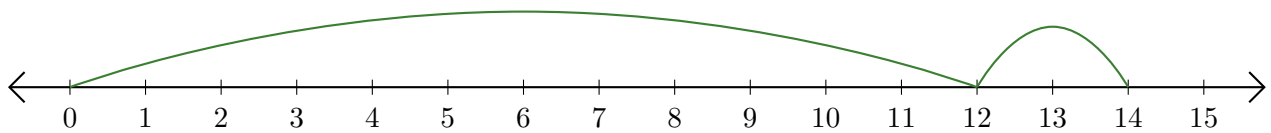
1. $\underline{7} + \underline{5} = \underline{12}$



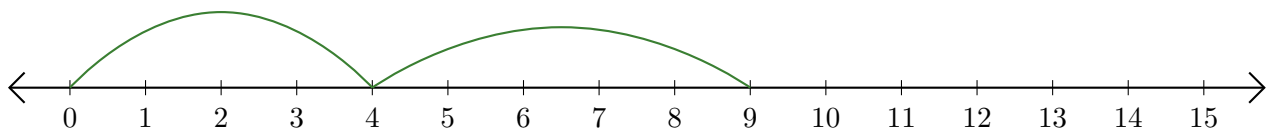
2. $\underline{8} + \underline{1} = \underline{9}$



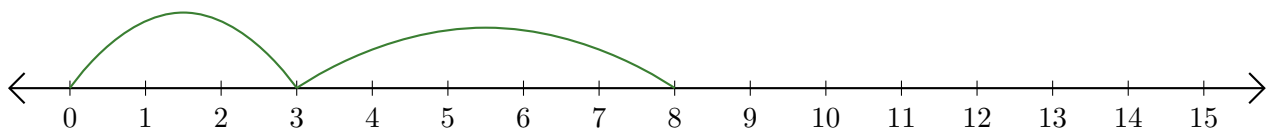
3. $\underline{12} + \underline{2} = \underline{14}$



4. $\underline{4} + \underline{5} = \underline{9}$



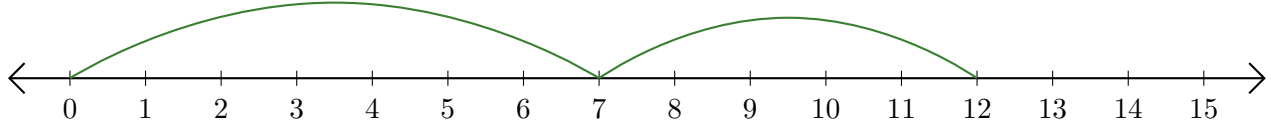
5. $\underline{3} + \underline{5} = \underline{8}$



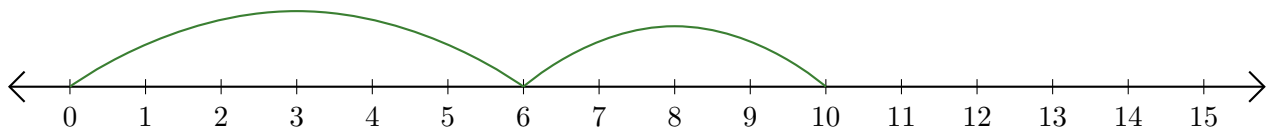
Reading Number Lines (D)

Write the question that each number line demonstrates.

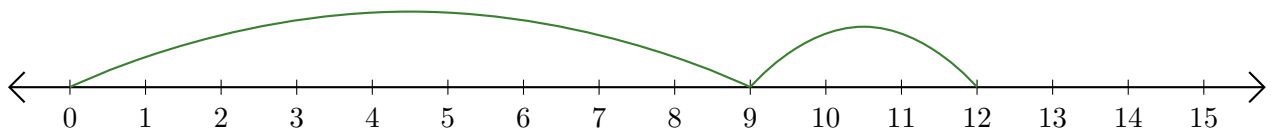
1. $\underline{\quad} + \underline{\quad} = \underline{\quad}$



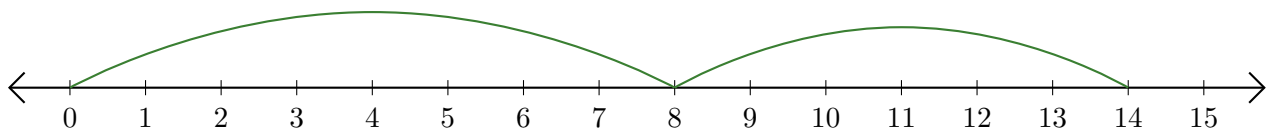
2. $\underline{\quad} + \underline{\quad} = \underline{\quad}$



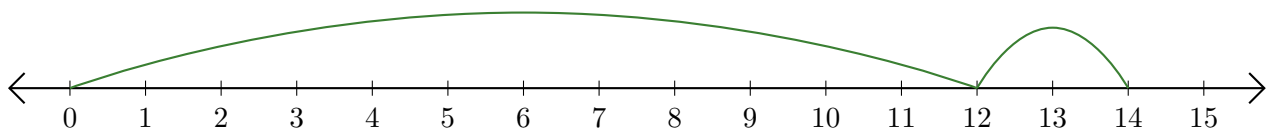
3. $\underline{\quad} + \underline{\quad} = \underline{\quad}$



4. $\underline{\quad} + \underline{\quad} = \underline{\quad}$



5. $\underline{\quad} + \underline{\quad} = \underline{\quad}$



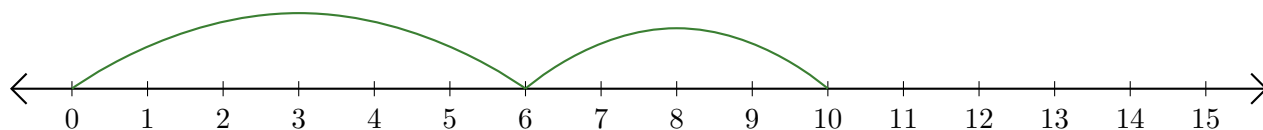
Reading Number Lines (D) Answers

Write the question that each number line demonstrates.

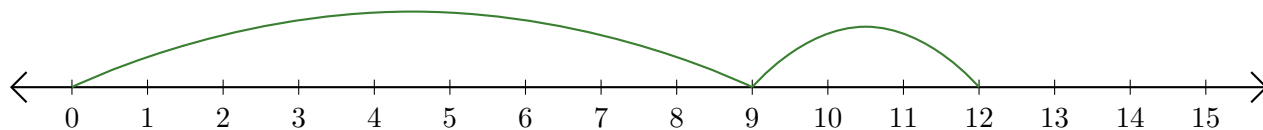
1. $\underline{7} + \underline{5} = \underline{12}$



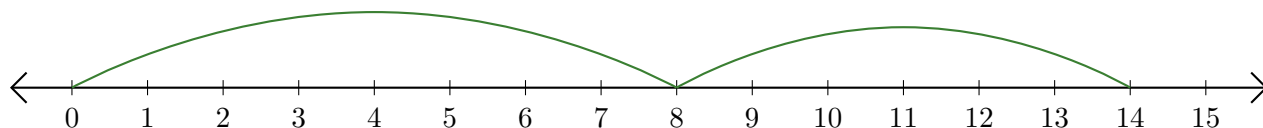
2. $\underline{6} + \underline{4} = \underline{10}$



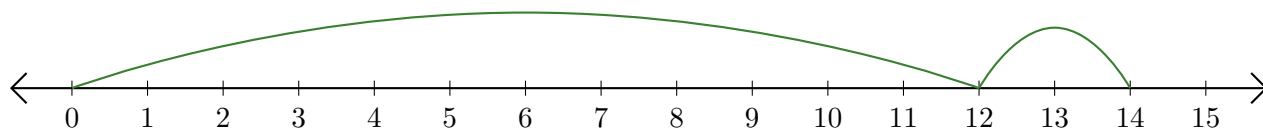
3. $\underline{9} + \underline{3} = \underline{12}$



4. $\underline{8} + \underline{6} = \underline{14}$



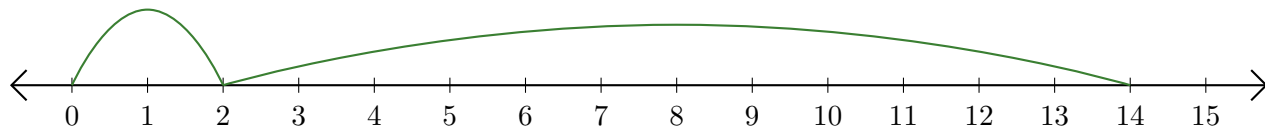
5. $\underline{12} + \underline{2} = \underline{14}$



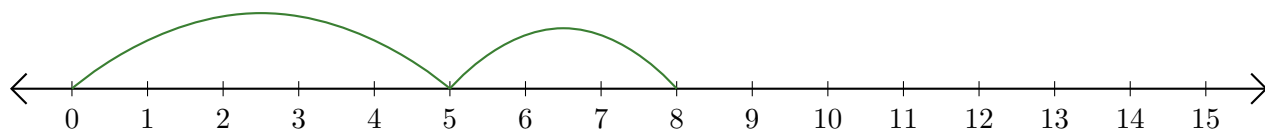
Reading Number Lines (E)

Write the question that each number line demonstrates.

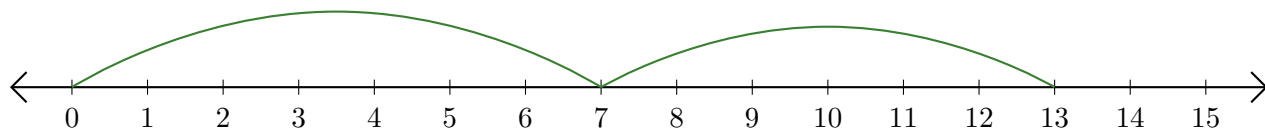
1. $\underline{\quad} + \underline{\quad} = \underline{\quad}$



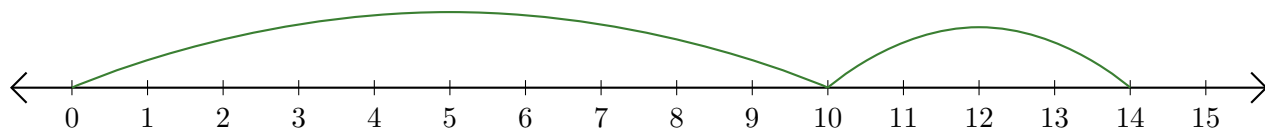
2. $\underline{\quad} + \underline{\quad} = \underline{\quad}$



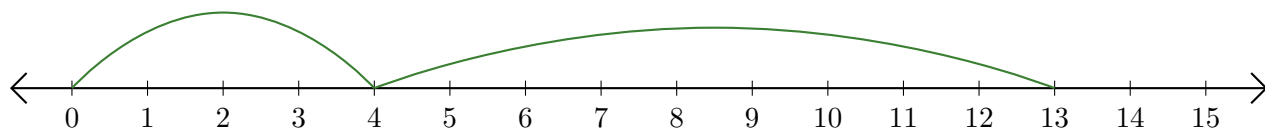
3. $\underline{\quad} + \underline{\quad} = \underline{\quad}$



4. $\underline{\quad} + \underline{\quad} = \underline{\quad}$



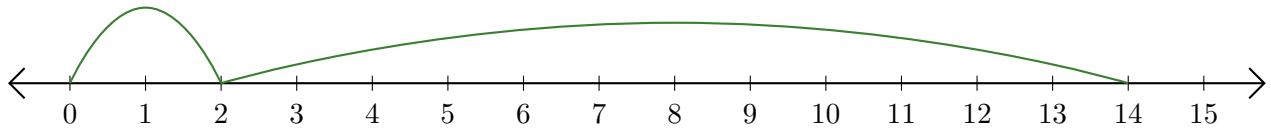
5. $\underline{\quad} + \underline{\quad} = \underline{\quad}$



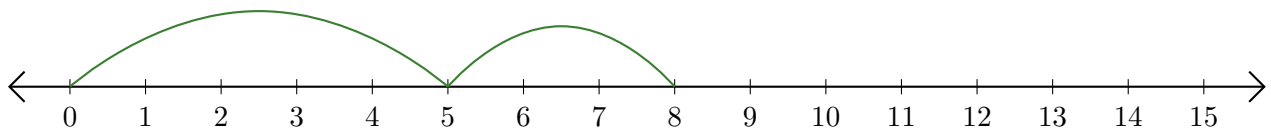
Reading Number Lines (E) Answers

Write the question that each number line demonstrates.

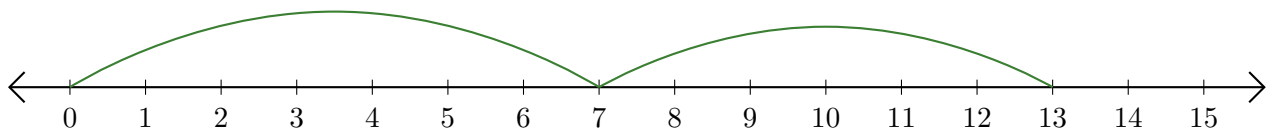
1. $\underline{2} + \underline{12} = \underline{14}$



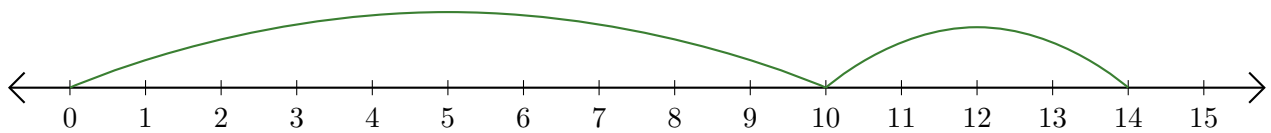
2. $\underline{5} + \underline{3} = \underline{8}$



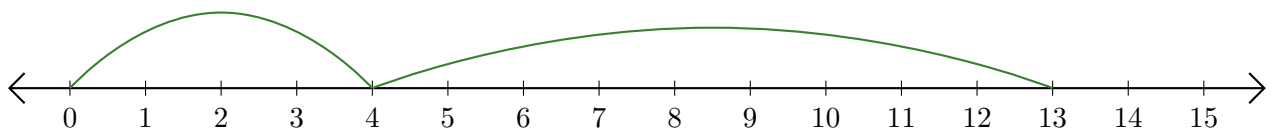
3. $\underline{7} + \underline{6} = \underline{13}$



4. $\underline{10} + \underline{4} = \underline{14}$



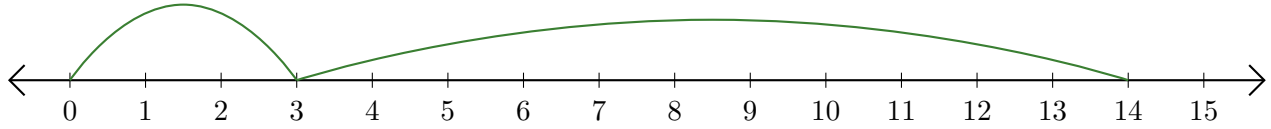
5. $\underline{4} + \underline{9} = \underline{13}$



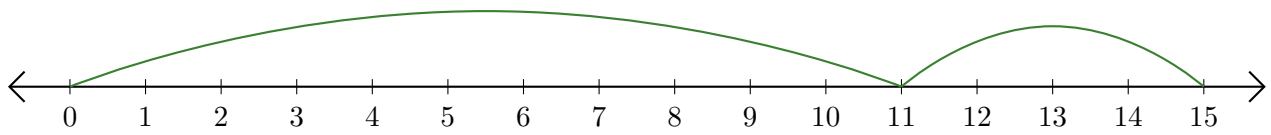
Reading Number Lines (F)

Write the question that each number line demonstrates.

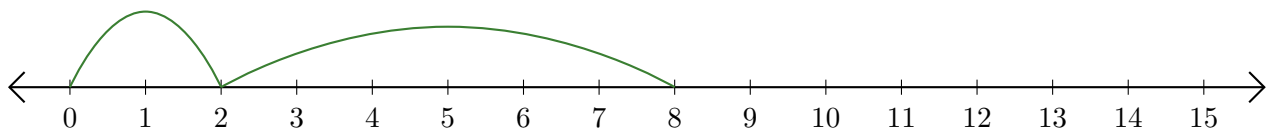
1. $\underline{\quad} + \underline{\quad} = \underline{\quad}$



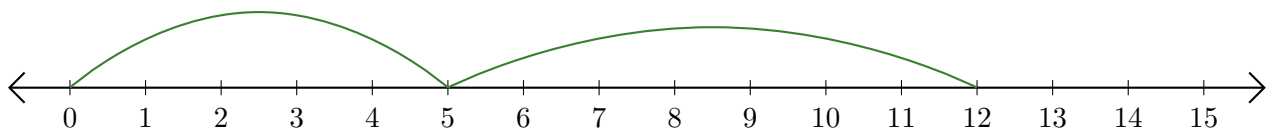
2. $\underline{\quad} + \underline{\quad} = \underline{\quad}$



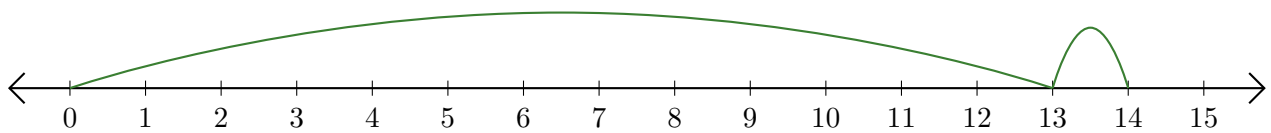
3. $\underline{\quad} + \underline{\quad} = \underline{\quad}$



4. $\underline{\quad} + \underline{\quad} = \underline{\quad}$



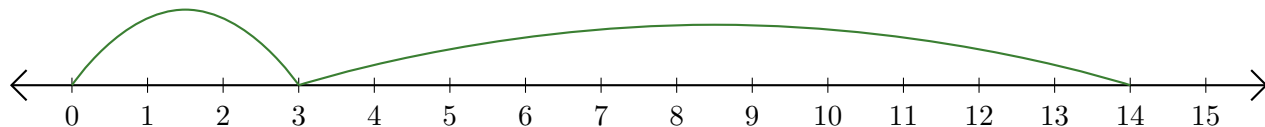
5. $\underline{\quad} + \underline{\quad} = \underline{\quad}$



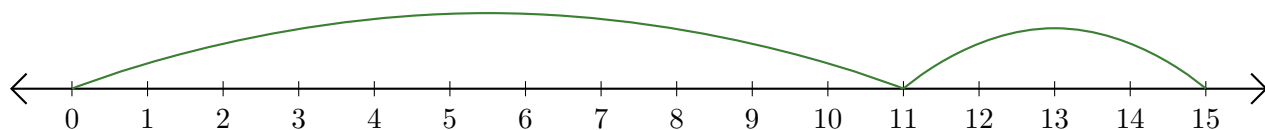
Reading Number Lines (F) Answers

Write the question that each number line demonstrates.

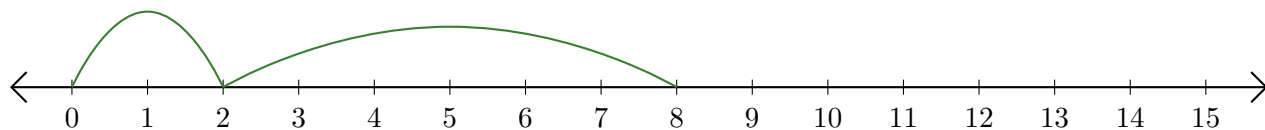
1. $\underline{3} + \underline{11} = \underline{14}$



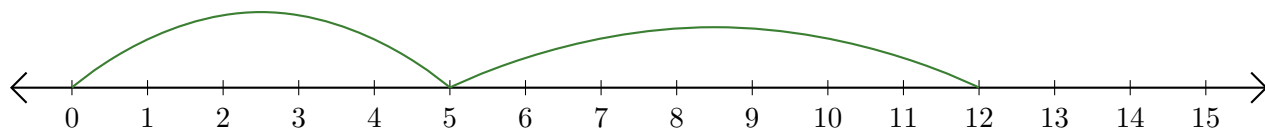
2. $\underline{11} + \underline{4} = \underline{15}$



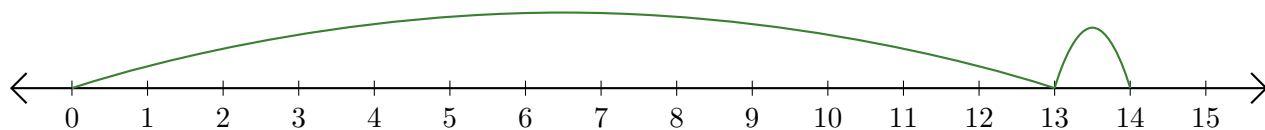
3. $\underline{2} + \underline{6} = \underline{8}$



4. $\underline{5} + \underline{7} = \underline{12}$



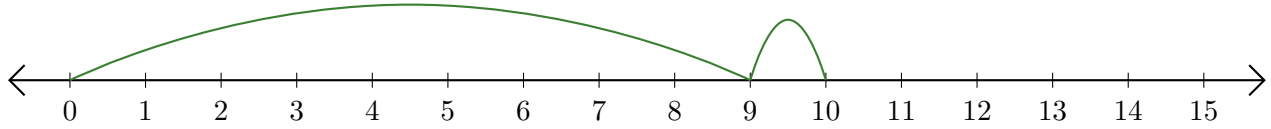
5. $\underline{13} + \underline{1} = \underline{14}$



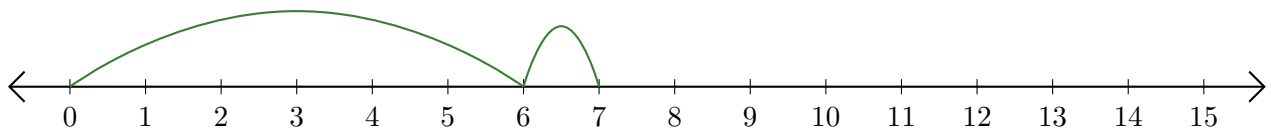
Reading Number Lines (G)

Write the question that each number line demonstrates.

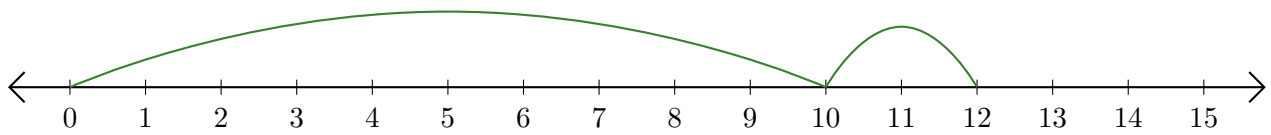
1. $\underline{\quad} + \underline{\quad} = \underline{\quad}$



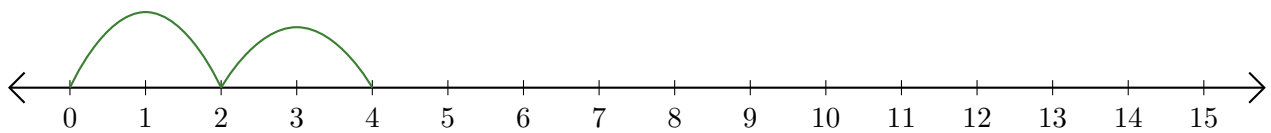
2. $\underline{\quad} + \underline{\quad} = \underline{\quad}$



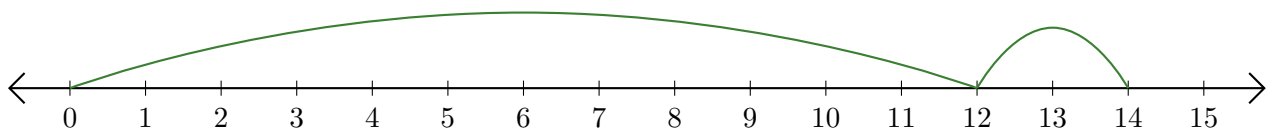
3. $\underline{\quad} + \underline{\quad} = \underline{\quad}$



4. $\underline{\quad} + \underline{\quad} = \underline{\quad}$



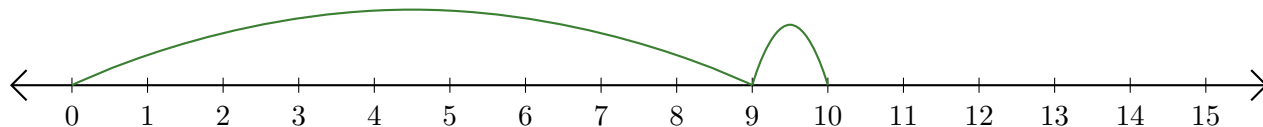
5. $\underline{\quad} + \underline{\quad} = \underline{\quad}$



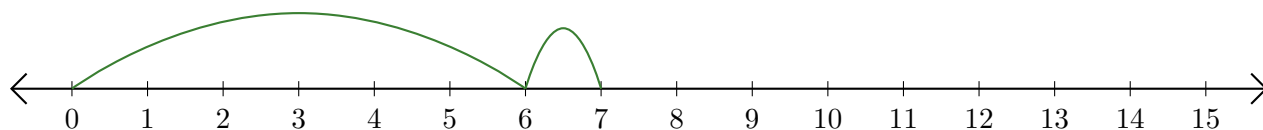
Reading Number Lines (G) Answers

Write the question that each number line demonstrates.

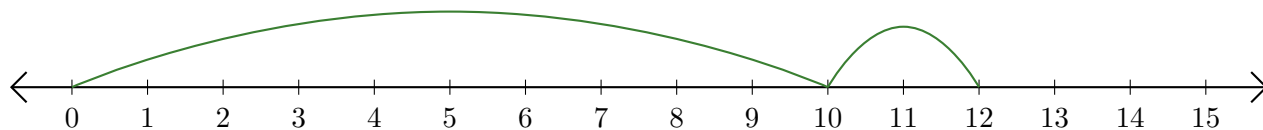
1. $\underline{9} + \underline{1} = \underline{10}$



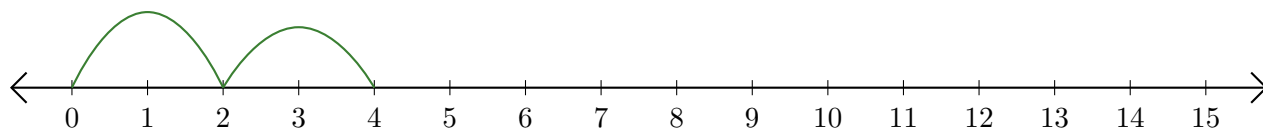
2. $\underline{6} + \underline{1} = \underline{7}$



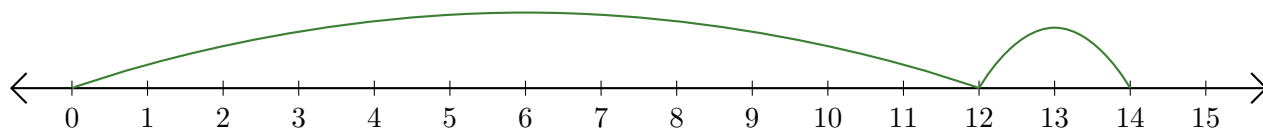
3. $\underline{10} + \underline{2} = \underline{12}$



4. $\underline{2} + \underline{2} = \underline{4}$



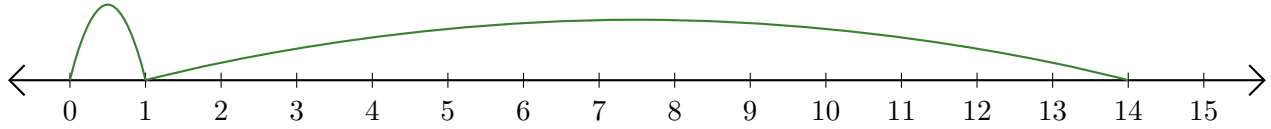
5. $\underline{12} + \underline{2} = \underline{14}$



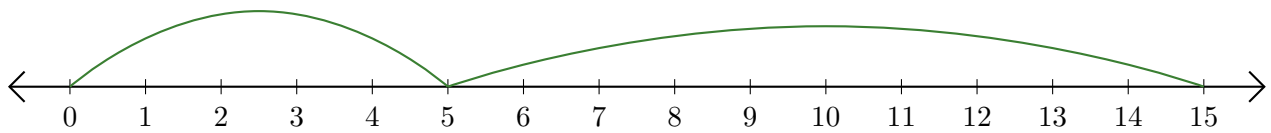
Reading Number Lines (H)

Write the question that each number line demonstrates.

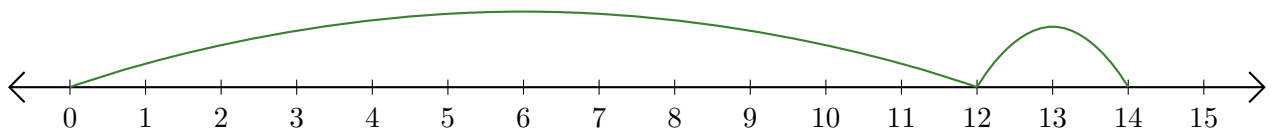
1. $\underline{\quad} + \underline{\quad} = \underline{\quad}$



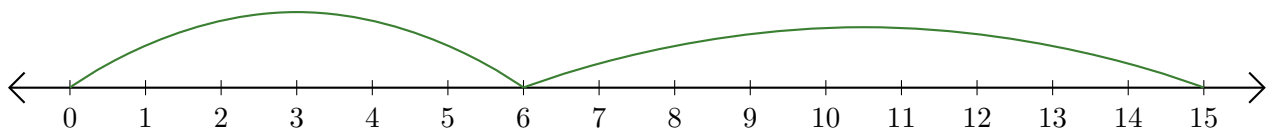
2. $\underline{\quad} + \underline{\quad} = \underline{\quad}$



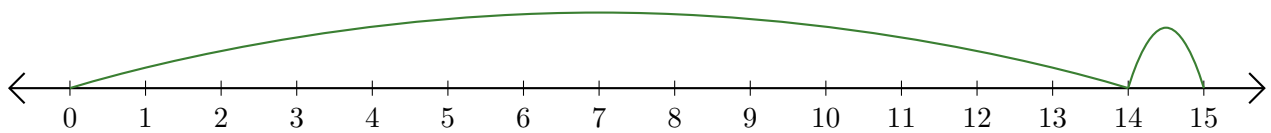
3. $\underline{\quad} + \underline{\quad} = \underline{\quad}$



4. $\underline{\quad} + \underline{\quad} = \underline{\quad}$



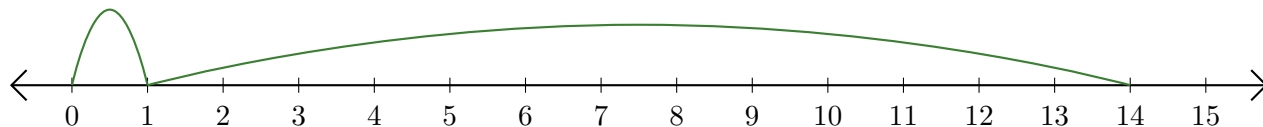
5. $\underline{\quad} + \underline{\quad} = \underline{\quad}$



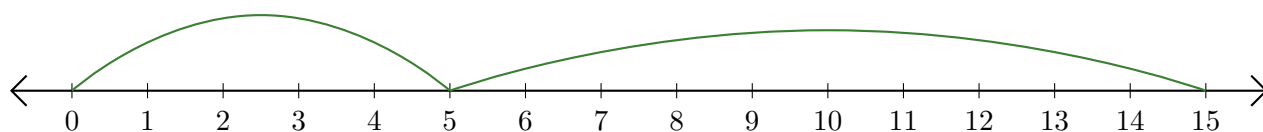
Reading Number Lines (H) Answers

Write the question that each number line demonstrates.

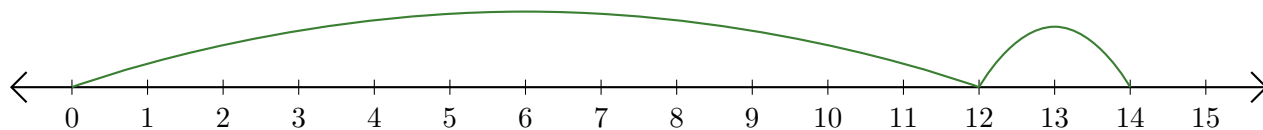
1. $\underline{1} + \underline{13} = \underline{14}$



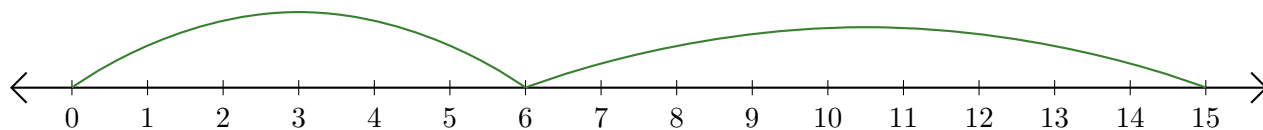
2. $\underline{5} + \underline{10} = \underline{15}$



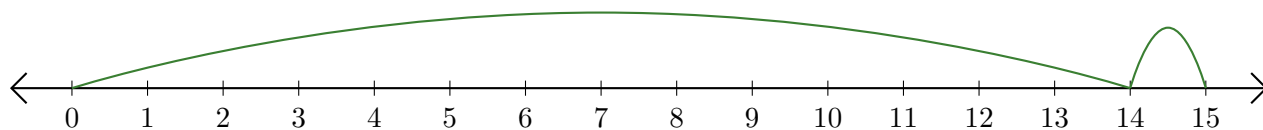
3. $\underline{12} + \underline{2} = \underline{14}$



4. $\underline{6} + \underline{9} = \underline{15}$



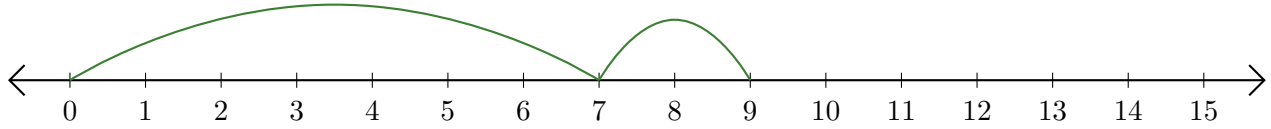
5. $\underline{14} + \underline{1} = \underline{15}$



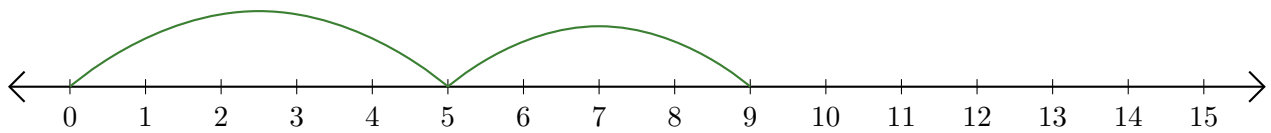
Reading Number Lines (I)

Write the question that each number line demonstrates.

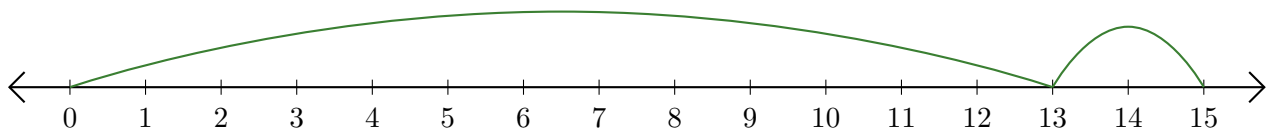
1. $\underline{\quad} + \underline{\quad} = \underline{\quad}$



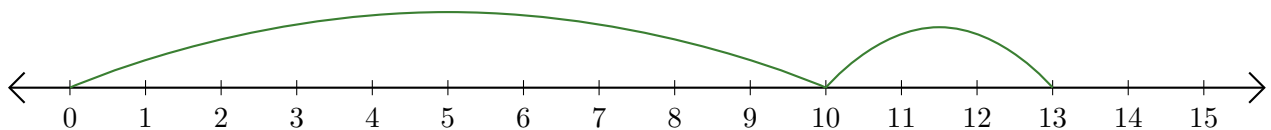
2. $\underline{\quad} + \underline{\quad} = \underline{\quad}$



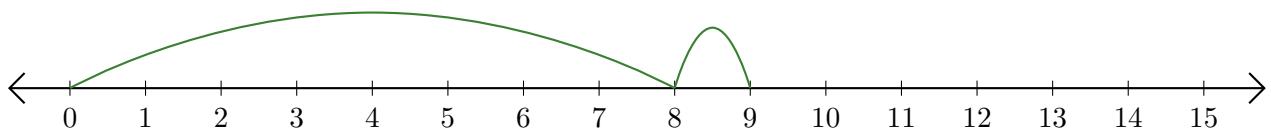
3. $\underline{\quad} + \underline{\quad} = \underline{\quad}$



4. $\underline{\quad} + \underline{\quad} = \underline{\quad}$



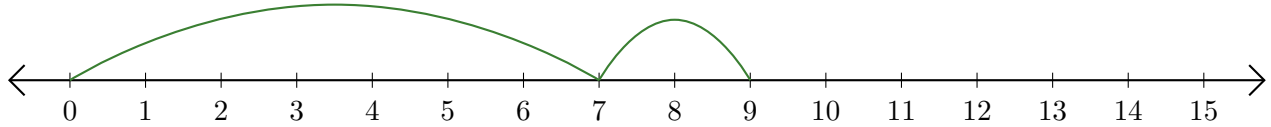
5. $\underline{\quad} + \underline{\quad} = \underline{\quad}$



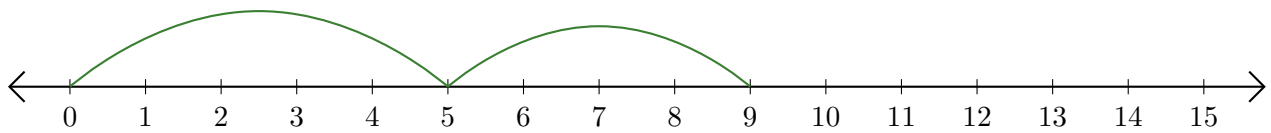
Reading Number Lines (I) Answers

Write the question that each number line demonstrates.

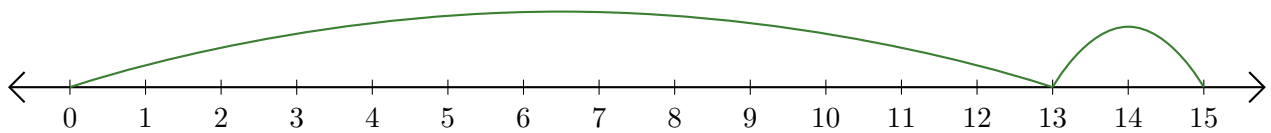
1. $\underline{7} + \underline{2} = \underline{9}$



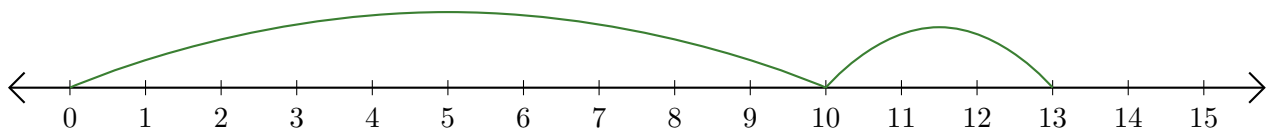
2. $\underline{5} + \underline{4} = \underline{9}$



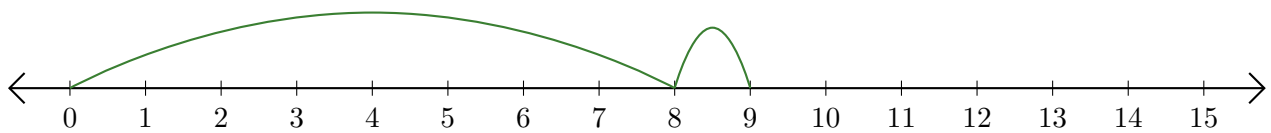
3. $\underline{13} + \underline{2} = \underline{15}$



4. $\underline{10} + \underline{3} = \underline{13}$



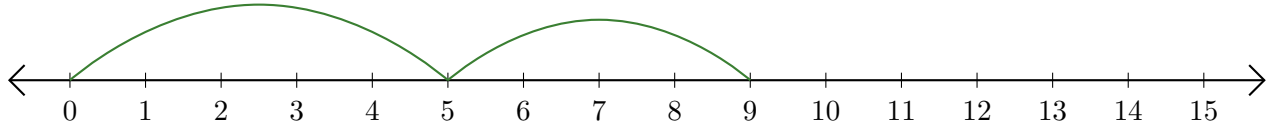
5. $\underline{8} + \underline{1} = \underline{9}$



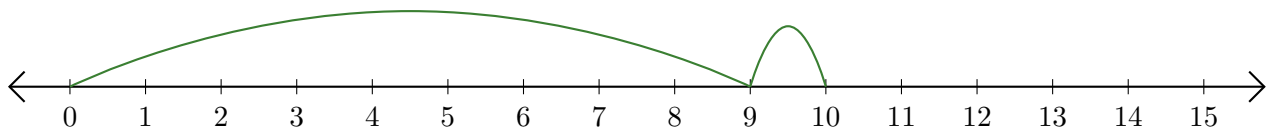
Reading Number Lines (J)

Write the question that each number line demonstrates.

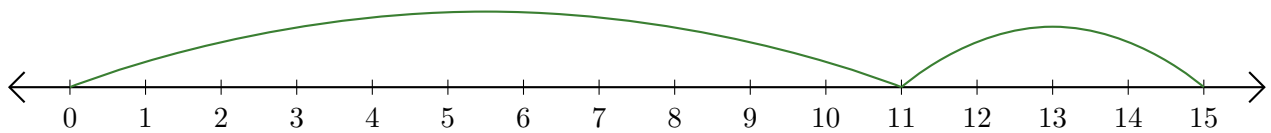
1. $\underline{\quad} + \underline{\quad} = \underline{\quad}$



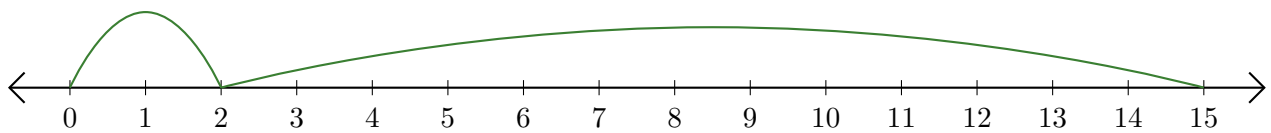
2. $\underline{\quad} + \underline{\quad} = \underline{\quad}$



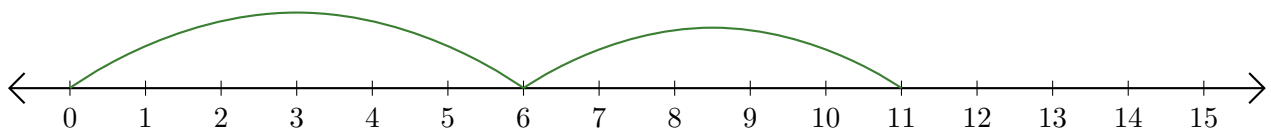
3. $\underline{\quad} + \underline{\quad} = \underline{\quad}$



4. $\underline{\quad} + \underline{\quad} = \underline{\quad}$



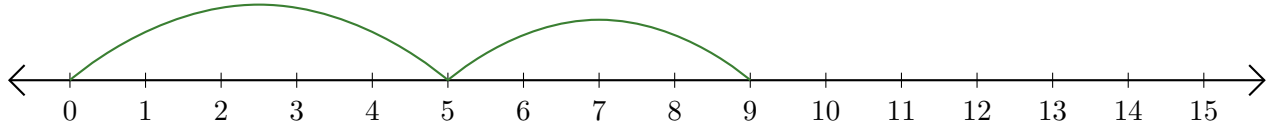
5. $\underline{\quad} + \underline{\quad} = \underline{\quad}$



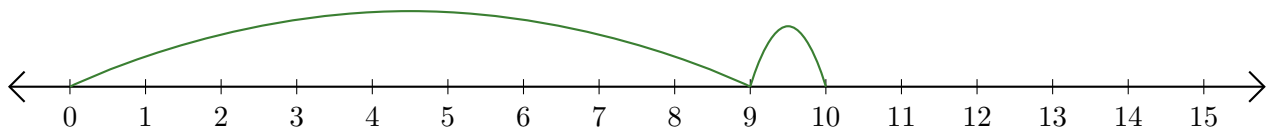
Reading Number Lines (J) Answers

Write the question that each number line demonstrates.

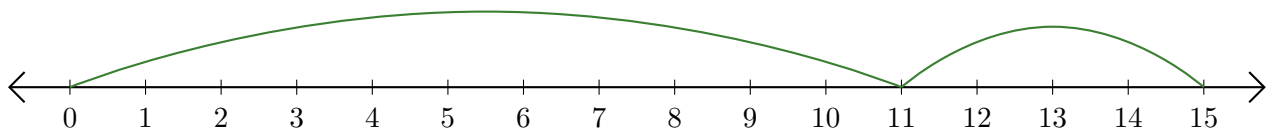
1. $\underline{5} + \underline{4} = \underline{9}$



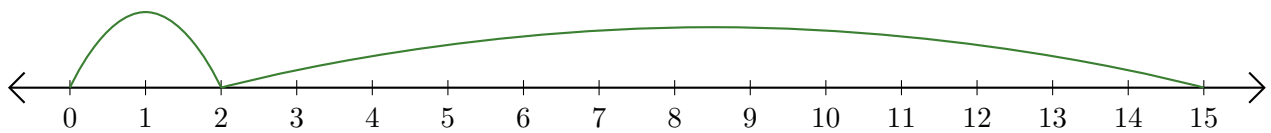
2. $\underline{9} + \underline{1} = \underline{10}$



3. $\underline{11} + \underline{4} = \underline{15}$



4. $\underline{2} + \underline{13} = \underline{15}$



5. $\underline{6} + \underline{5} = \underline{11}$

