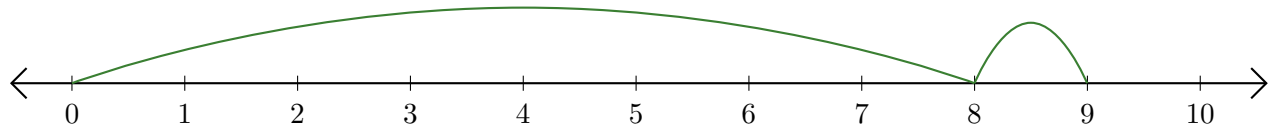


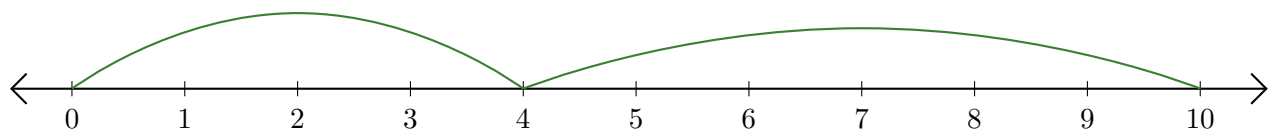
Reading Number Lines (D)

Write the question that each number line demonstrates.

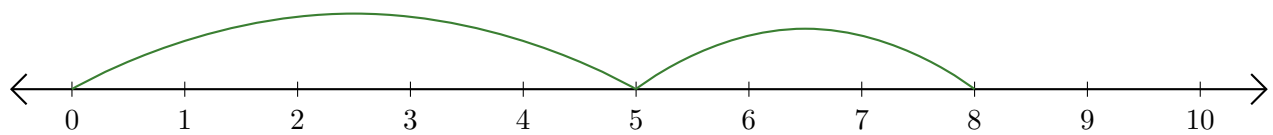
1. $\underline{\quad} + \underline{\quad} = \underline{\quad}$



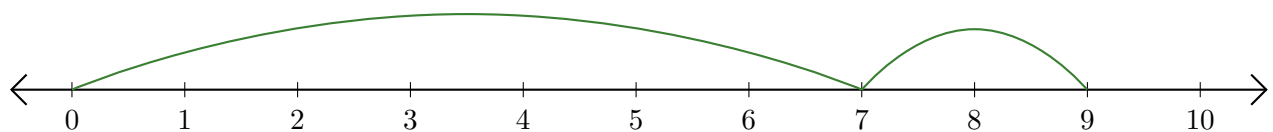
2. $\underline{\quad} + \underline{\quad} = \underline{\quad}$



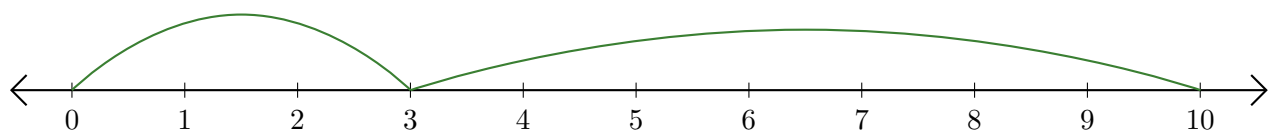
3. $\underline{\quad} + \underline{\quad} = \underline{\quad}$



4. $\underline{\quad} + \underline{\quad} = \underline{\quad}$



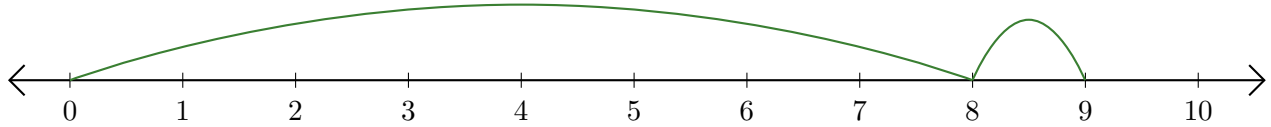
5. $\underline{\quad} + \underline{\quad} = \underline{\quad}$



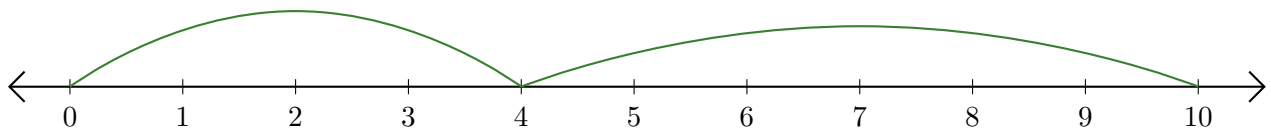
Reading Number Lines (D) Answers

Write the question that each number line demonstrates.

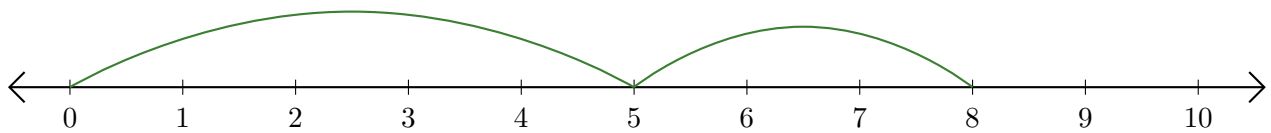
1. $\underline{8} + \underline{1} = \underline{9}$



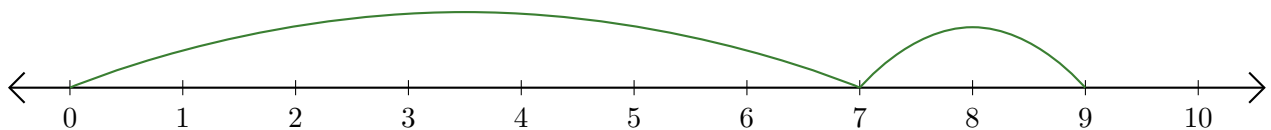
2. $\underline{4} + \underline{6} = \underline{10}$



3. $\underline{5} + \underline{3} = \underline{8}$



4. $\underline{7} + \underline{2} = \underline{9}$



5. $\underline{3} + \underline{7} = \underline{10}$

