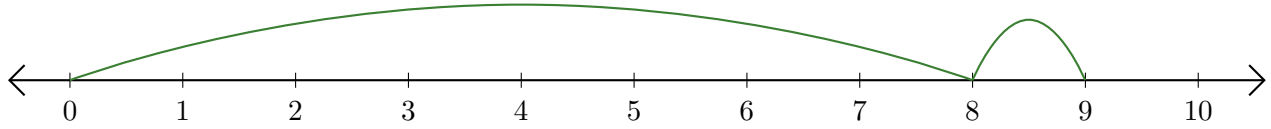


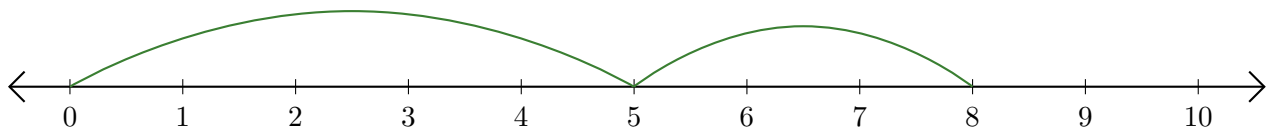
# Reading Number Lines (B)

Write the question that each number line demonstrates.

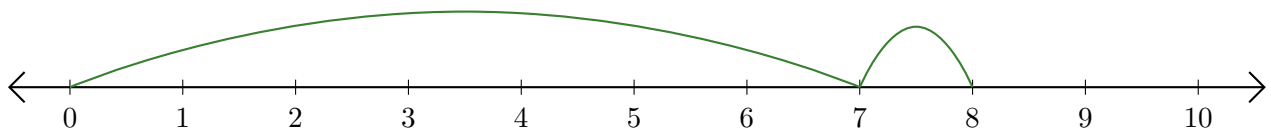
1.  $\underline{\quad} + \underline{\quad} = \underline{\quad}$



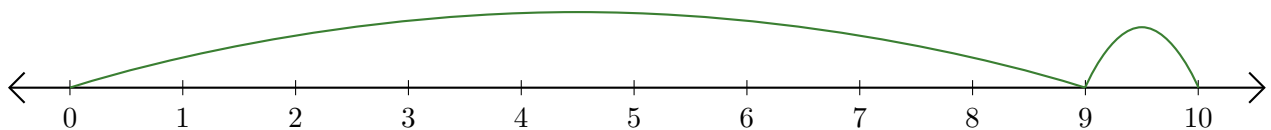
2.  $\underline{\quad} + \underline{\quad} = \underline{\quad}$



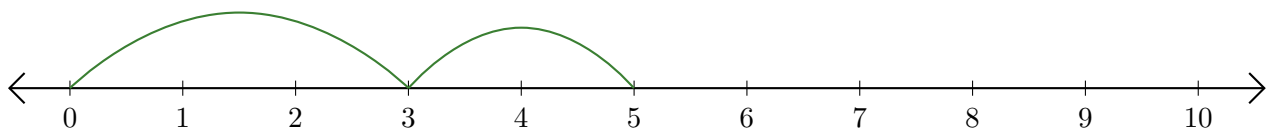
3.  $\underline{\quad} + \underline{\quad} = \underline{\quad}$



4.  $\underline{\quad} + \underline{\quad} = \underline{\quad}$



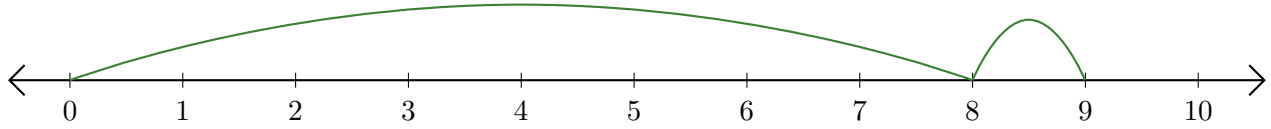
5.  $\underline{\quad} + \underline{\quad} = \underline{\quad}$



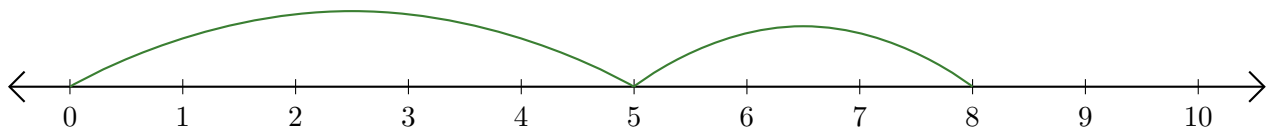
# Reading Number Lines (B) Answers

Write the question that each number line demonstrates.

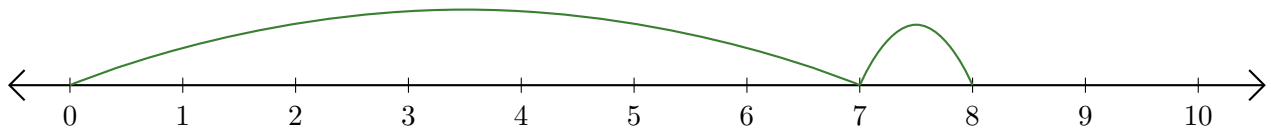
1.  $\underline{8} + \underline{1} = \underline{9}$



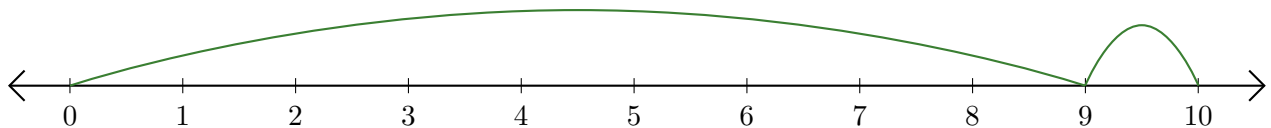
2.  $\underline{5} + \underline{3} = \underline{8}$



3.  $\underline{7} + \underline{1} = \underline{8}$



4.  $\underline{9} + \underline{1} = \underline{10}$



5.  $\underline{3} + \underline{2} = \underline{5}$

