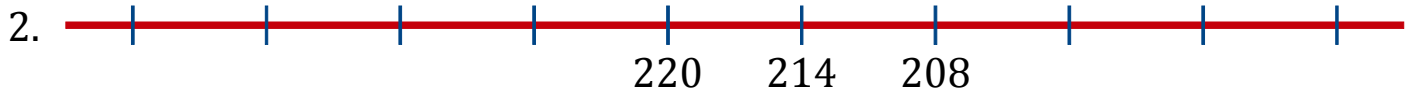


# Number Line Sequences (C)

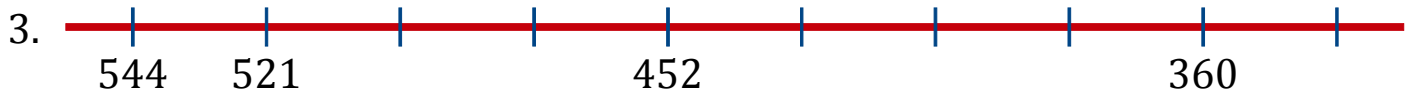
Fill in the missing numbers on each number line.




Common difference: \_\_\_\_\_



Common difference: \_\_\_\_\_



Common difference: \_\_\_\_\_



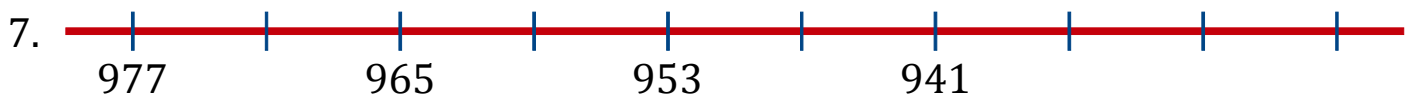
Common difference: \_\_\_\_\_




Common difference: \_\_\_\_\_



Common difference: \_\_\_\_\_



Common difference: \_\_\_\_\_



Common difference: \_\_\_\_\_

# Number Line Sequences (C) Answers

Fill in the missing numbers on each number line.

