

# Number Line Sequences (G)

Fill in the missing numbers on each number line.



Common difference: \_\_\_\_\_




Common difference: \_\_\_\_\_




Common difference: \_\_\_\_\_




Common difference: \_\_\_\_\_



Common difference: \_\_\_\_\_



Common difference: \_\_\_\_\_



Common difference: \_\_\_\_\_



Common difference: \_\_\_\_\_

# Number Line Sequences (G) Answers

Fill in the missing numbers on each number line.

