

Number Line Sequences (B)

Fill in the missing numbers on each number line.



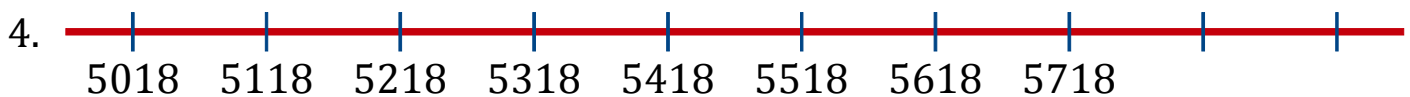
Common difference: _____



Common difference: _____




Common difference: _____



Common difference: _____




Common difference: _____



Common difference: _____



Common difference: _____



Common difference: _____