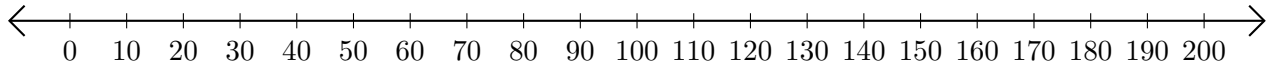


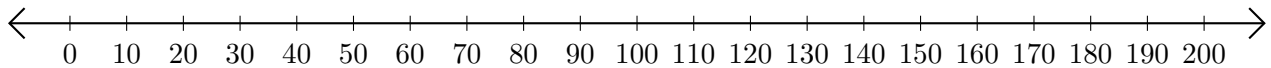
Subtracting on Number Lines (H)

Use the number lines to calculate each difference.

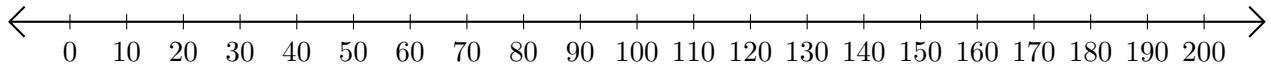
1. $180 - 140 = \underline{\quad}$



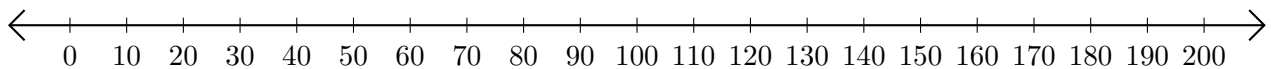
2. $200 - 80 = \underline{\quad}$



3. $190 - 160 = \underline{\quad}$



4. $190 - 120 = \underline{\quad}$



5. $130 - 30 = \underline{\quad}$

