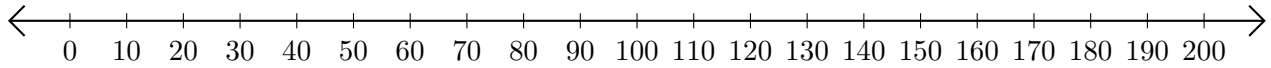


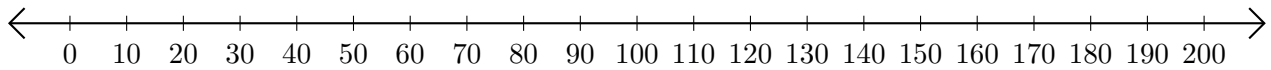
Subtracting on Number Lines (A)

Use the number lines to calculate each difference.

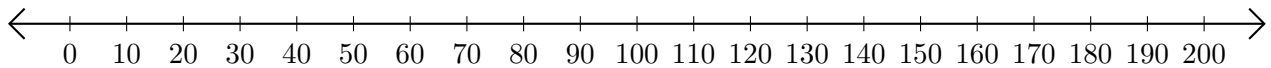
1. $160 - 150 = \underline{\quad}$



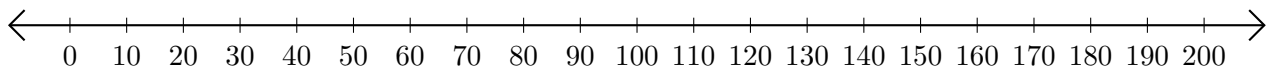
2. $190 - 170 = \underline{\quad}$



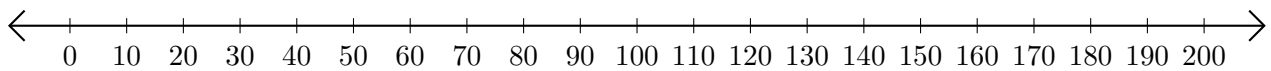
3. $150 - 120 = \underline{\quad}$



4. $160 - 130 = \underline{\quad}$



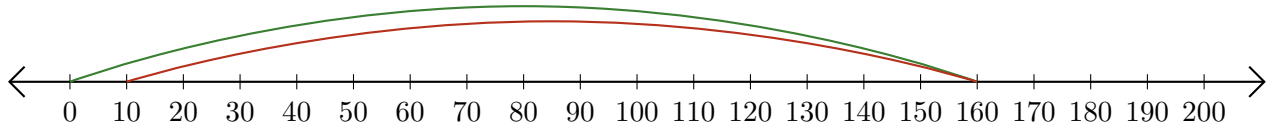
5. $40 - 20 = \underline{\quad}$



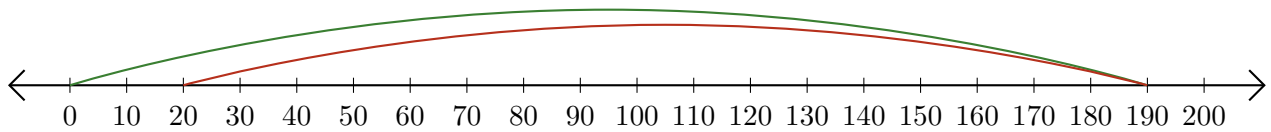
Subtracting on Number Lines (A) Answers

Use the number lines to calculate each difference.

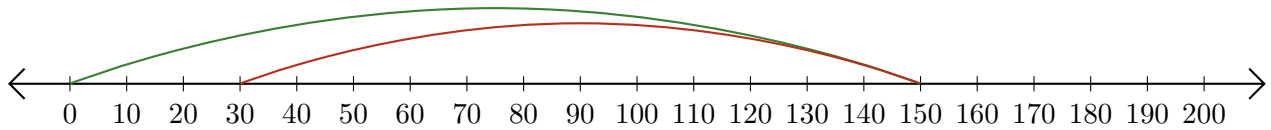
1. $160 - 150 = \underline{10}$



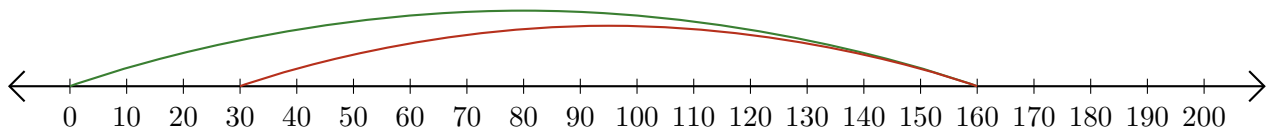
2. $190 - 170 = \underline{20}$



3. $150 - 120 = \underline{30}$



4. $160 - 130 = \underline{30}$



5. $40 - 20 = \underline{20}$

