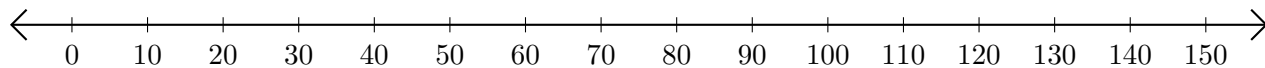


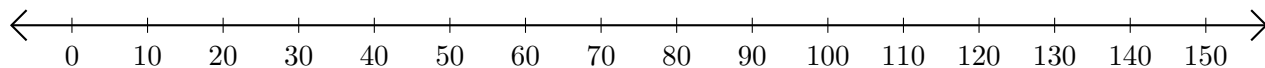
Subtracting on Number Lines (I)

Use the number lines to calculate each difference.

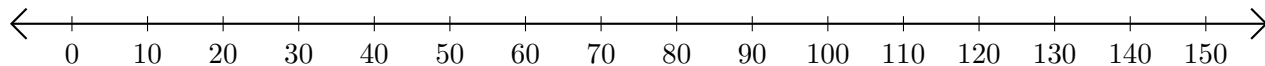
1. $80 - 70 = \underline{\quad}$



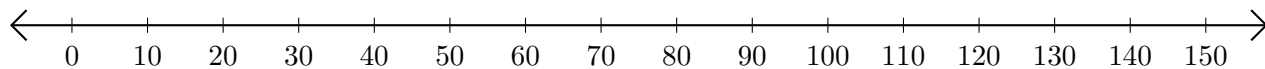
2. $80 - 10 = \underline{\quad}$



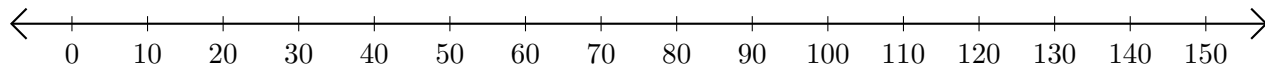
3. $90 - 30 = \underline{\quad}$



4. $150 - 140 = \underline{\quad}$



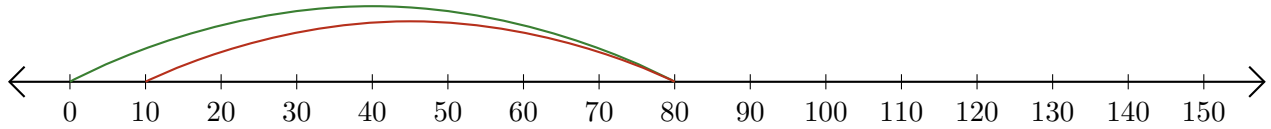
5. $140 - 90 = \underline{\quad}$



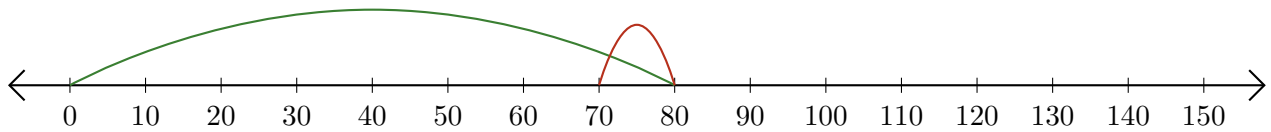
Subtracting on Number Lines (I) Answers

Use the number lines to calculate each difference.

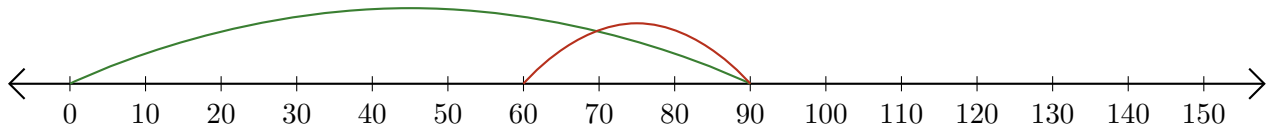
1. $80 - 70 = \underline{10}$



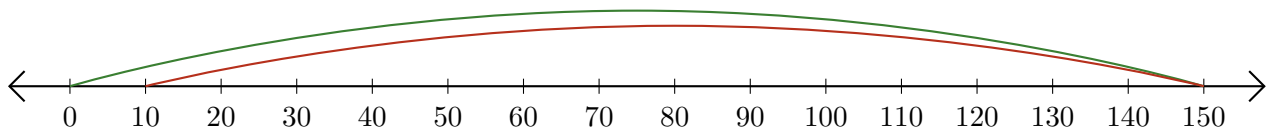
2. $80 - 10 = \underline{70}$



3. $90 - 30 = \underline{60}$



4. $150 - 140 = \underline{10}$



5. $140 - 90 = \underline{50}$

