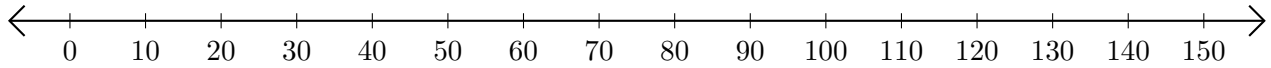


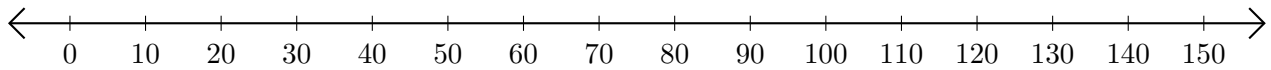
# Subtracting on Number Lines (A)

Use the number lines to calculate each difference.

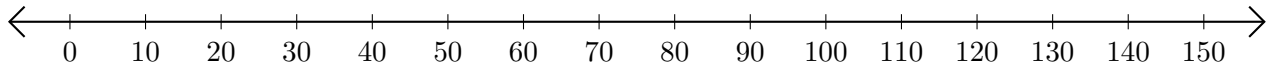
1.  $60 - 10 = \underline{\quad}$



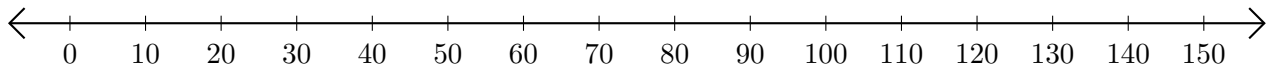
2.  $150 - 130 = \underline{\quad}$



3.  $80 - 30 = \underline{\quad}$



4.  $80 - 50 = \underline{\quad}$



5.  $120 - 20 = \underline{\quad}$

