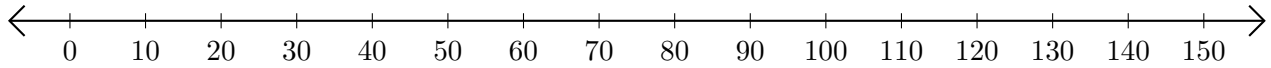


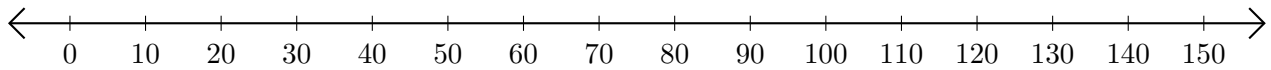
Subtracting on Number Lines (A)

Use the number lines to calculate each difference.

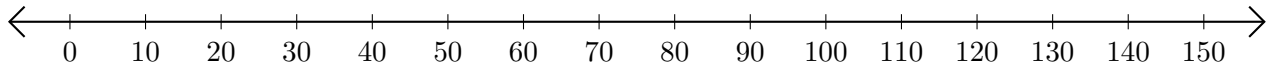
1. $60 - 10 = \underline{\quad}$



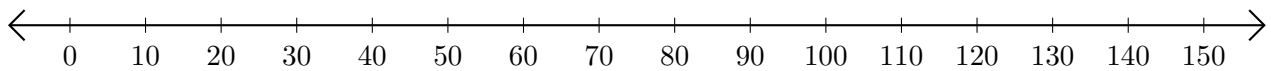
2. $150 - 130 = \underline{\quad}$



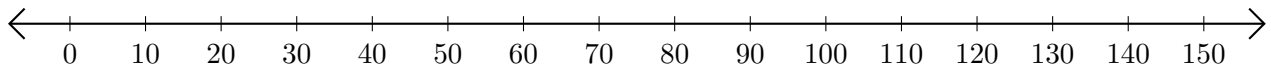
3. $80 - 30 = \underline{\quad}$



4. $80 - 50 = \underline{\quad}$



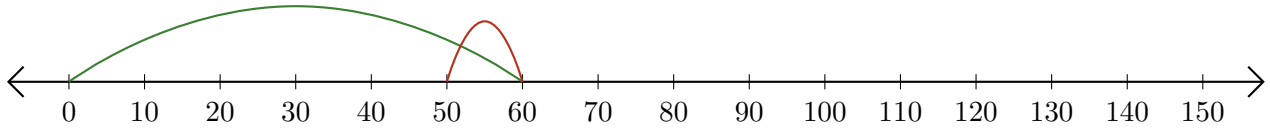
5. $120 - 20 = \underline{\quad}$



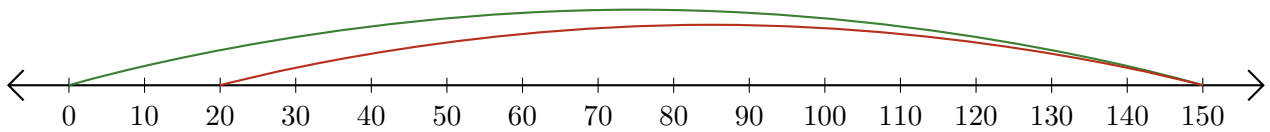
Subtracting on Number Lines (A) Answers

Use the number lines to calculate each difference.

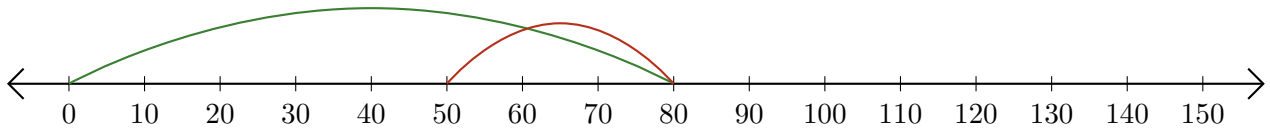
1. $60 - 10 = \underline{50}$



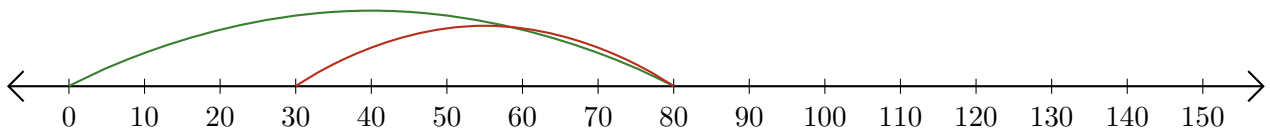
2. $150 - 130 = \underline{20}$



3. $80 - 30 = \underline{50}$



4. $80 - 50 = \underline{30}$



5. $120 - 20 = \underline{100}$

