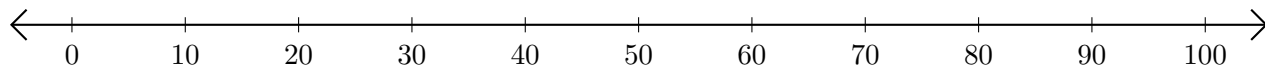


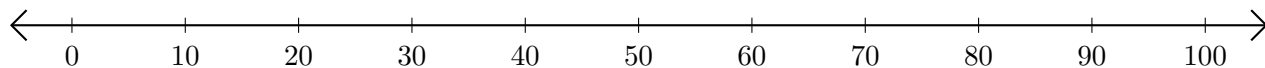
# Subtracting on Number Lines (I)

Use the number lines to calculate each difference.

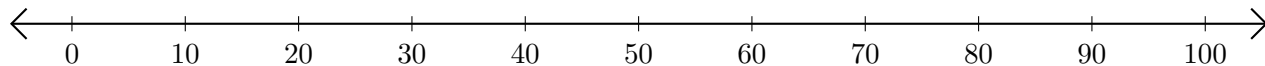
1.  $100 - 60 = \underline{\quad}$



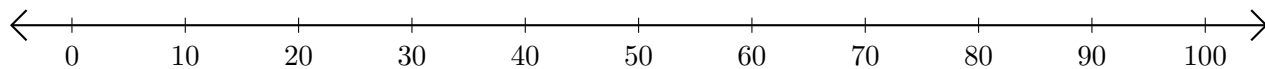
2.  $60 - 30 = \underline{\quad}$



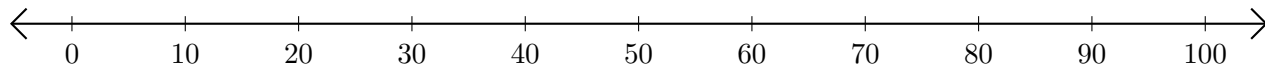
3.  $100 - 40 = \underline{\quad}$



4.  $80 - 50 = \underline{\quad}$



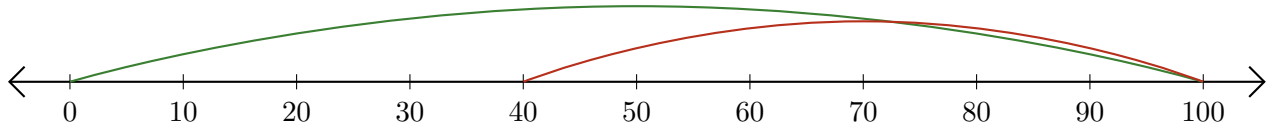
5.  $90 - 20 = \underline{\quad}$



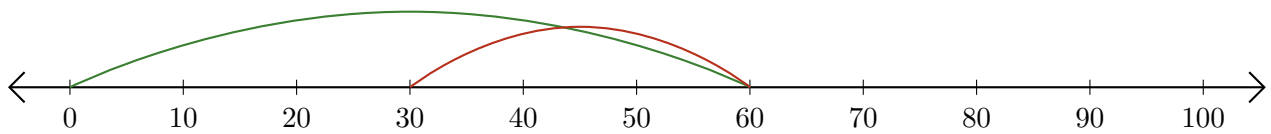
# Subtracting on Number Lines (I) Answers

Use the number lines to calculate each difference.

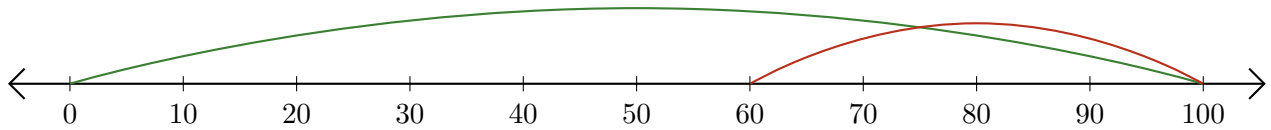
1.  $100 - 60 = \underline{40}$



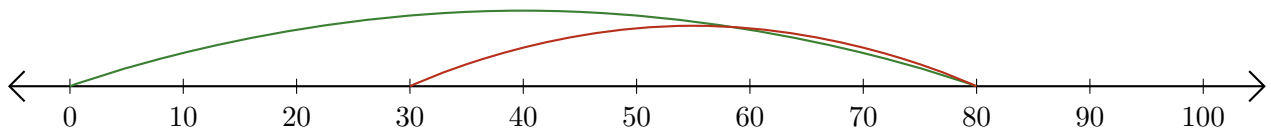
2.  $60 - 30 = \underline{30}$



3.  $100 - 40 = \underline{60}$



4.  $80 - 50 = \underline{30}$



5.  $90 - 20 = \underline{70}$

