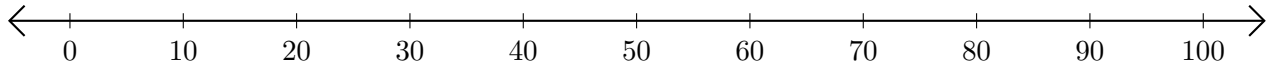


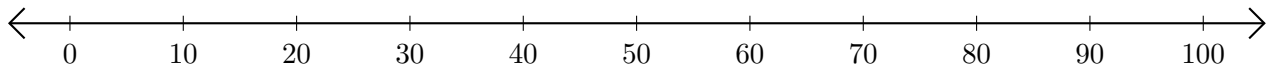
Subtracting on Number Lines (E)

Use the number lines to calculate each difference.

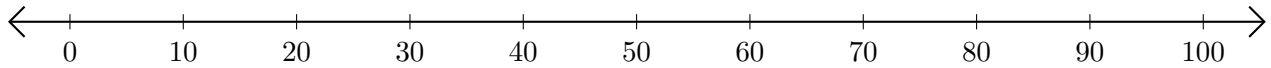
1. $90 - 70 = \underline{\quad}$



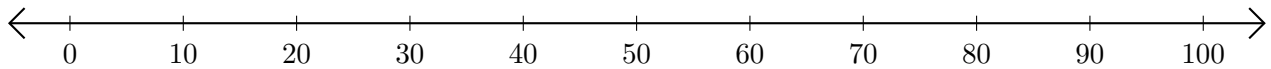
2. $60 - 40 = \underline{\quad}$



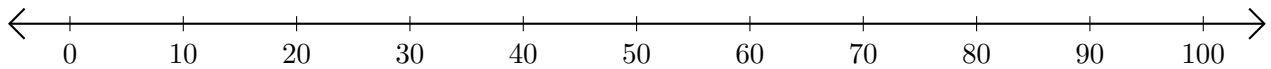
3. $100 - 90 = \underline{\quad}$



4. $20 - 10 = \underline{\quad}$



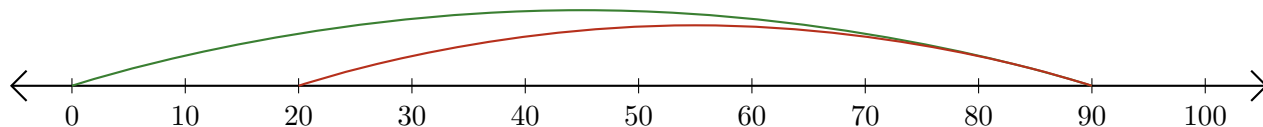
5. $30 - 20 = \underline{\quad}$



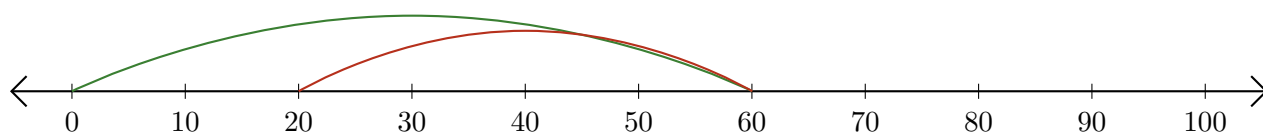
Subtracting on Number Lines (E) Answers

Use the number lines to calculate each difference.

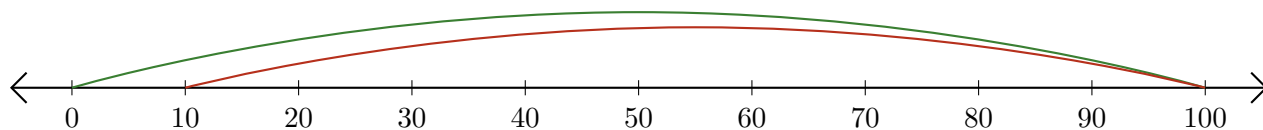
1. $90 - 70 = \underline{20}$



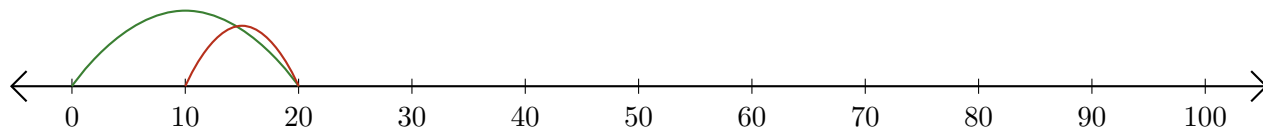
2. $60 - 40 = \underline{20}$



3. $100 - 90 = \underline{10}$



4. $20 - 10 = \underline{10}$



5. $30 - 20 = \underline{10}$

