

# Subtracting on Number Lines (D)

Use the number lines to calculate each difference.

1.  $70 - 50 = \underline{\quad}$



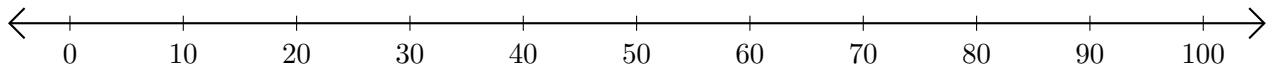
2.  $60 - 10 = \underline{\quad}$



3.  $100 - 30 = \underline{\quad}$



4.  $40 - 20 = \underline{\quad}$



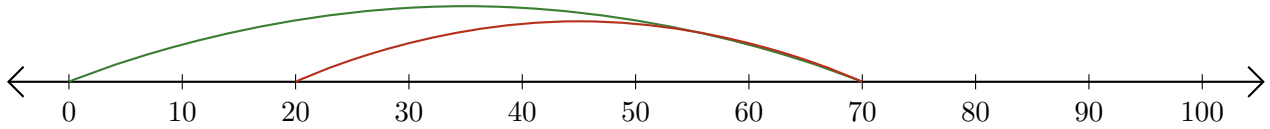
5.  $80 - 40 = \underline{\quad}$



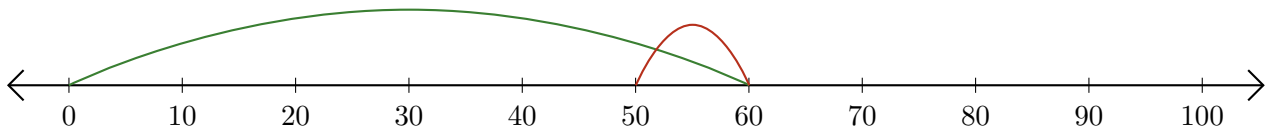
# Subtracting on Number Lines (D) Answers

Use the number lines to calculate each difference.

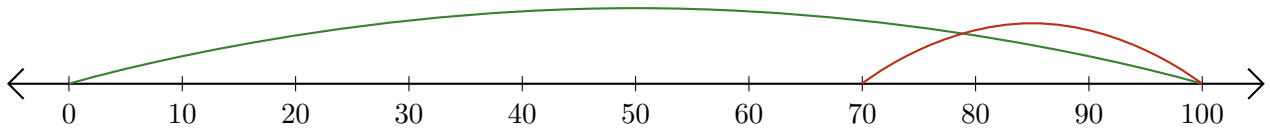
1.  $70 - 50 = \underline{20}$



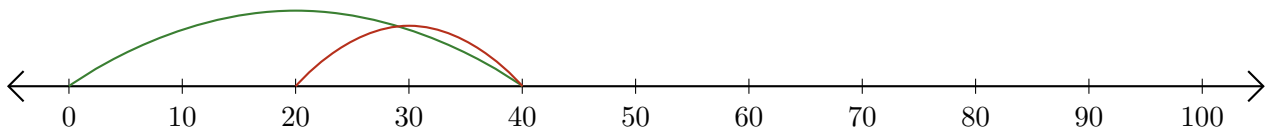
2.  $60 - 10 = \underline{50}$



3.  $100 - 30 = \underline{70}$



4.  $40 - 20 = \underline{20}$



5.  $80 - 40 = \underline{40}$

