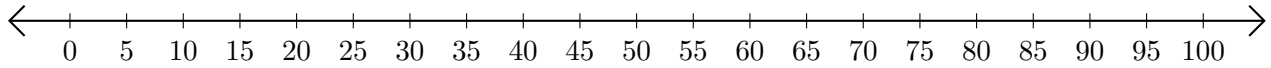


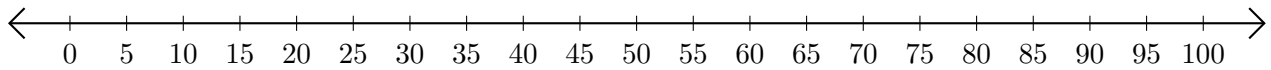
Subtracting on Number Lines (G)

Use the number lines to calculate each difference.

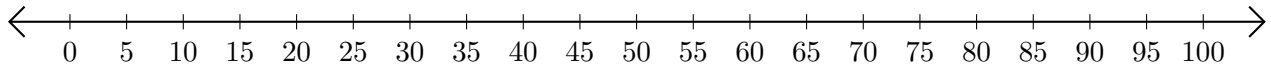
1. $55 - 25 = \underline{\quad}$



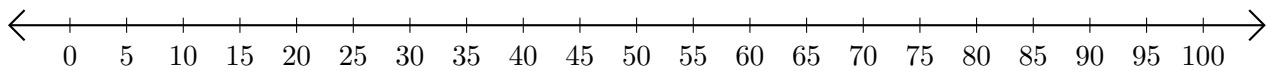
2. $65 - 30 = \underline{\quad}$



3. $95 - 90 = \underline{\quad}$



4. $95 - 85 = \underline{\quad}$



5. $75 - 60 = \underline{\quad}$

