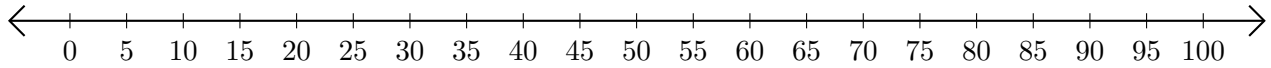


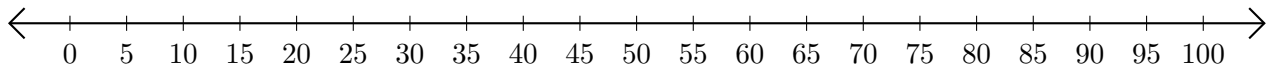
# Subtracting on Number Lines (G)

Use the number lines to calculate each difference.

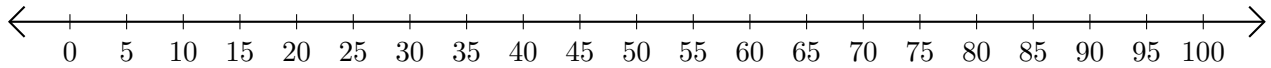
1.  $55 - 25 = \underline{\quad}$



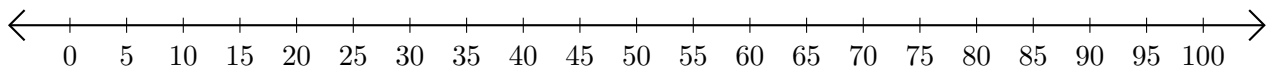
2.  $65 - 30 = \underline{\quad}$



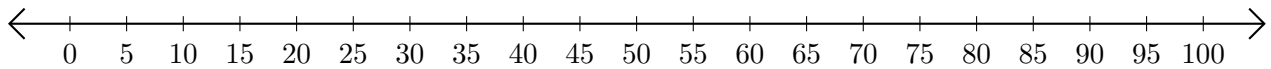
3.  $95 - 90 = \underline{\quad}$



4.  $95 - 85 = \underline{\quad}$



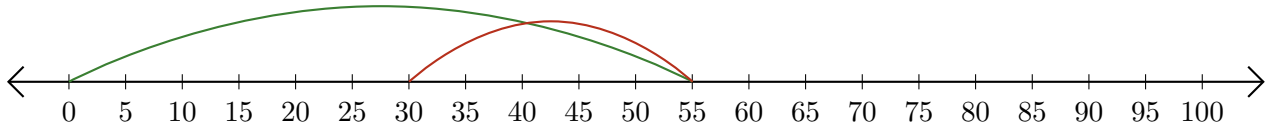
5.  $75 - 60 = \underline{\quad}$



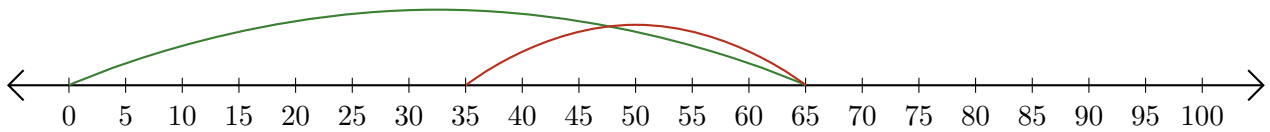
# Subtracting on Number Lines (G) Answers

Use the number lines to calculate each difference.

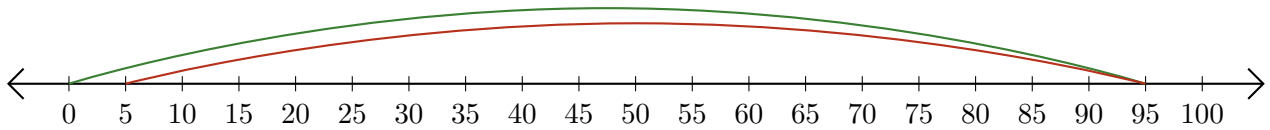
1.  $55 - 25 = \underline{30}$



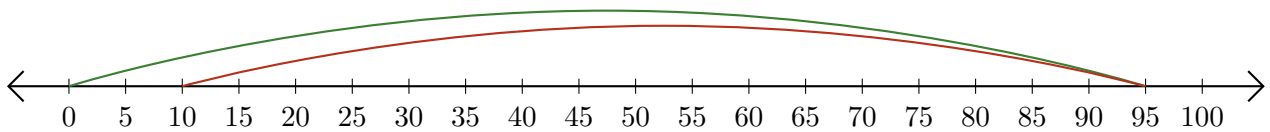
2.  $65 - 30 = \underline{35}$



3.  $95 - 90 = \underline{5}$



4.  $95 - 85 = \underline{10}$



5.  $75 - 60 = \underline{15}$

