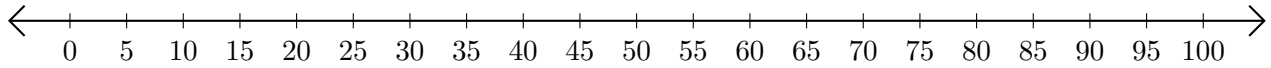


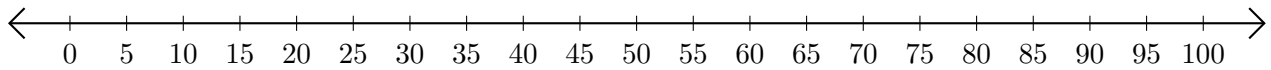
Subtracting on Number Lines (E)

Use the number lines to calculate each difference.

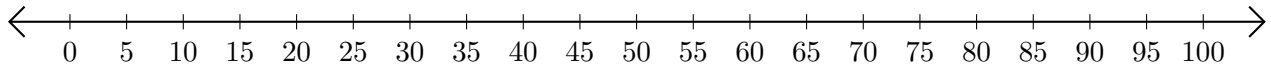
1. $100 - 50 = \underline{\quad}$



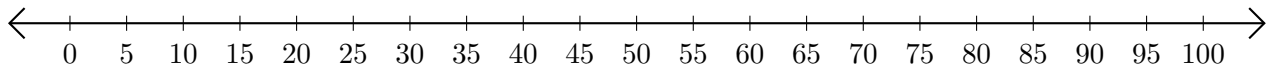
2. $80 - 60 = \underline{\quad}$



3. $80 - 65 = \underline{\quad}$



4. $55 - 35 = \underline{\quad}$



5. $85 - 75 = \underline{\quad}$

