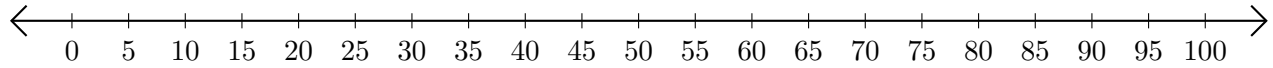


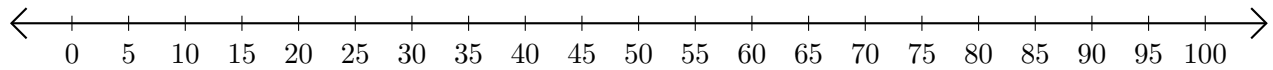
Subtracting on Number Lines (E)

Use the number lines to calculate each difference.

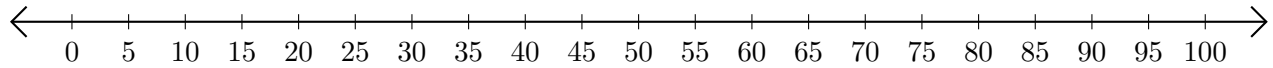
1. $100 - 50 = \underline{\quad}$



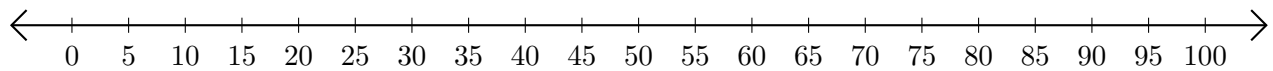
2. $80 - 60 = \underline{\quad}$



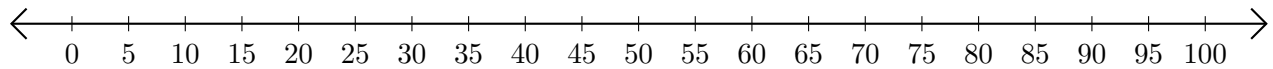
3. $80 - 65 = \underline{\quad}$



4. $55 - 35 = \underline{\quad}$



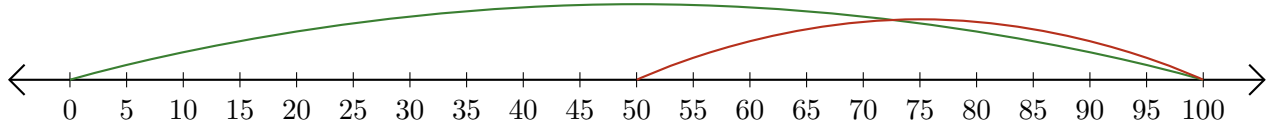
5. $85 - 75 = \underline{\quad}$



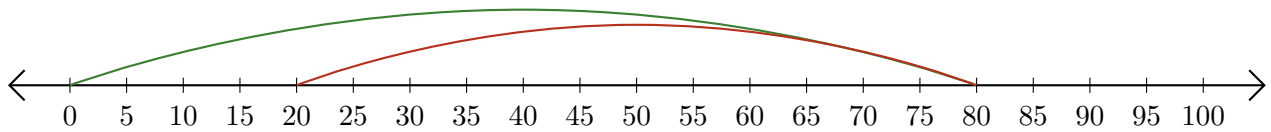
Subtracting on Number Lines (E) Answers

Use the number lines to calculate each difference.

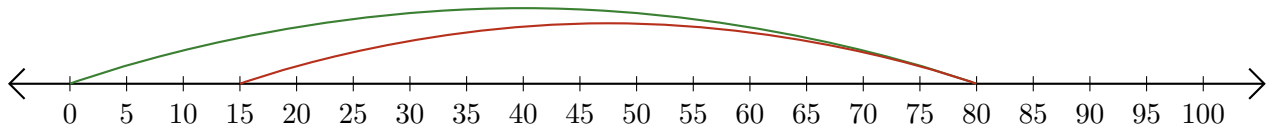
1. $100 - 50 = \underline{50}$



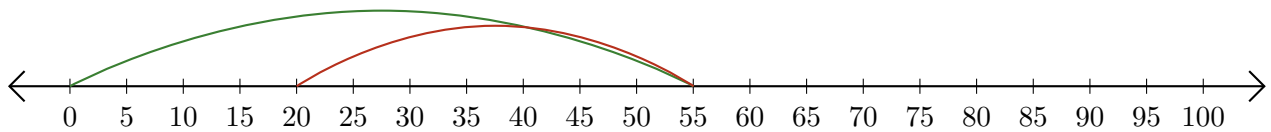
2. $80 - 60 = \underline{20}$



3. $80 - 65 = \underline{15}$



4. $55 - 35 = \underline{20}$



5. $85 - 75 = \underline{10}$

