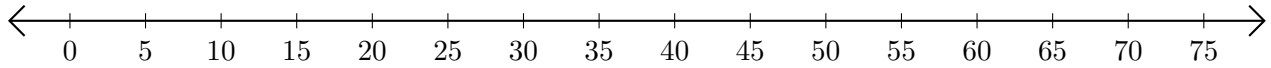


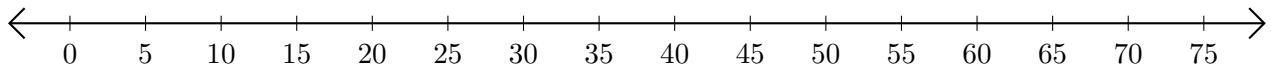
Subtracting on Number Lines (J)

Use the number lines to calculate each difference.

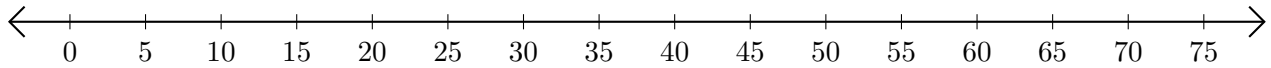
1. $30 - 20 = \underline{\quad}$



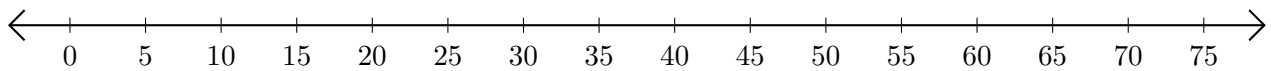
2. $75 - 50 = \underline{\quad}$



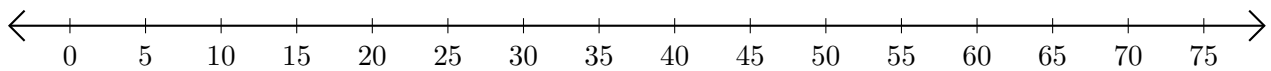
3. $55 - 30 = \underline{\quad}$



4. $70 - 65 = \underline{\quad}$




5. $55 - 40 = \underline{\quad}$



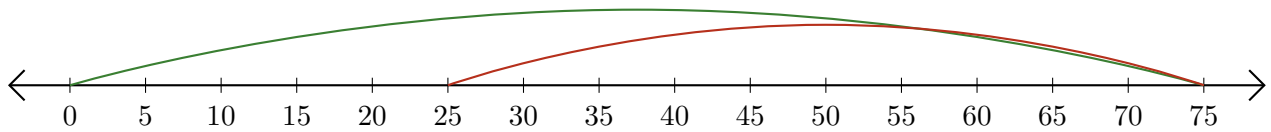
Subtracting on Number Lines (J) Answers

Use the number lines to calculate each difference.

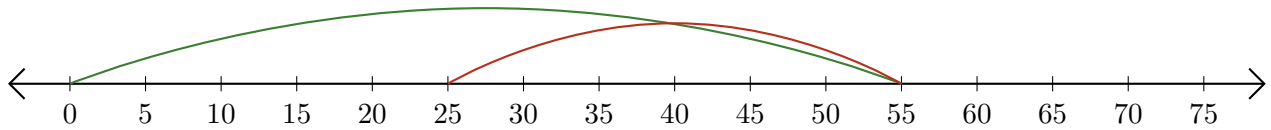
1. $30 - 20 = \underline{10}$



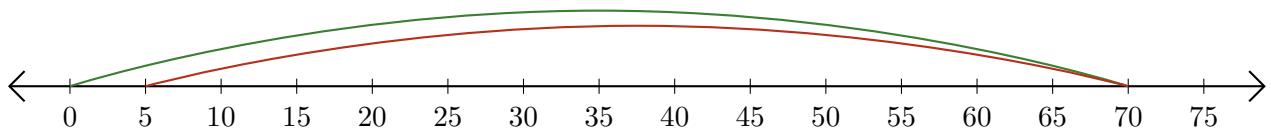
2. $75 - 50 = \underline{25}$



3. $55 - 30 = \underline{25}$



4. $70 - 65 = \underline{5}$



5. $55 - 40 = \underline{15}$

