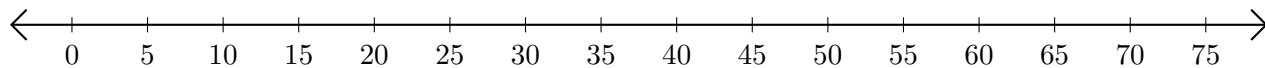


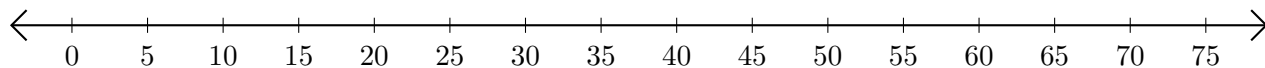
Subtracting on Number Lines (I)

Use the number lines to calculate each difference.

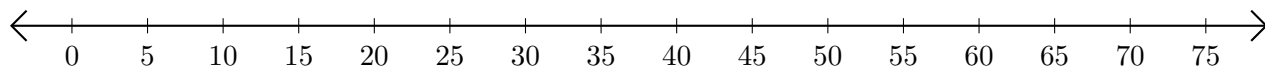
1. $40 - 15 = \underline{\quad}$



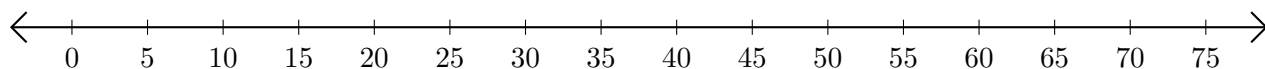
2. $40 - 20 = \underline{\quad}$



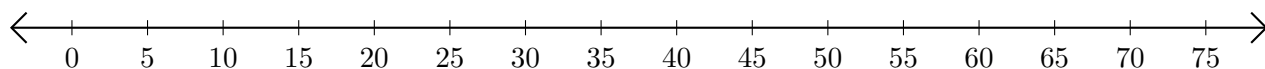
3. $45 - 30 = \underline{\quad}$



4. $75 - 40 = \underline{\quad}$



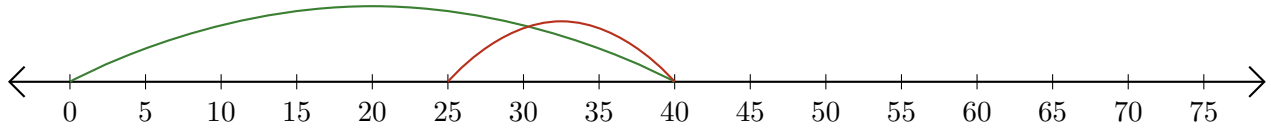
5. $75 - 25 = \underline{\quad}$



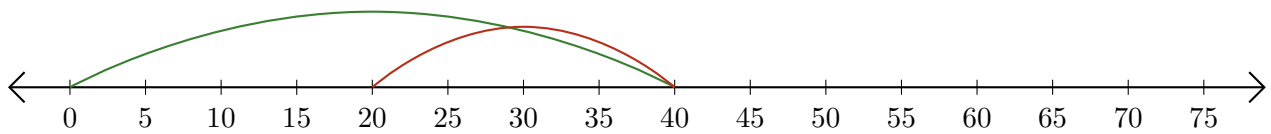
Subtracting on Number Lines (I) Answers

Use the number lines to calculate each difference.

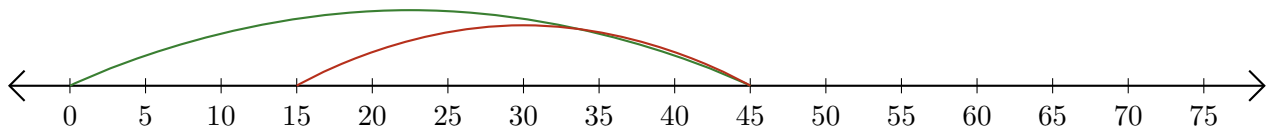
1. $40 - 15 = \underline{25}$



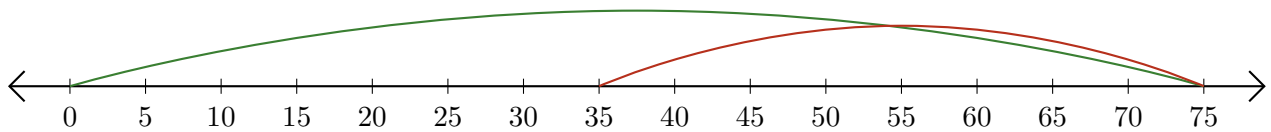
2. $40 - 20 = \underline{20}$



3. $45 - 30 = \underline{15}$



4. $75 - 40 = \underline{35}$



5. $75 - 25 = \underline{50}$

