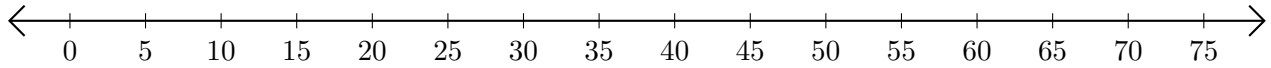


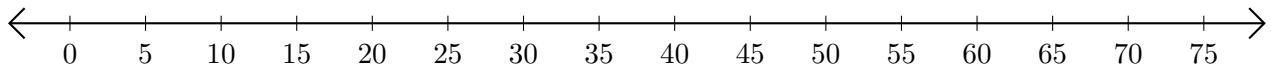
Subtracting on Number Lines (H)

Use the number lines to calculate each difference.

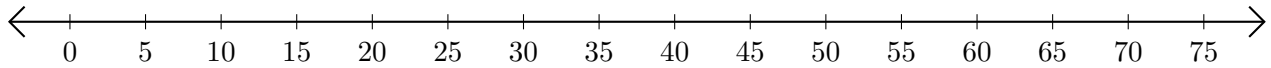
1. $75 - 70 = \underline{\quad}$



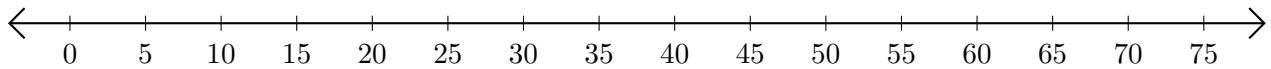
2. $70 - 60 = \underline{\quad}$



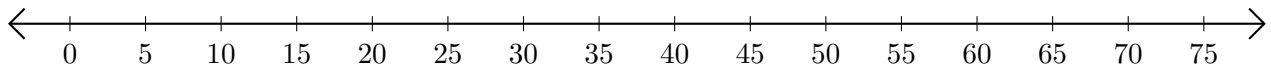
3. $60 - 10 = \underline{\quad}$



4. $60 - 45 = \underline{\quad}$



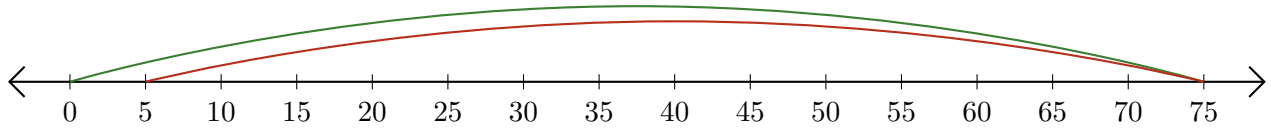
5. $70 - 40 = \underline{\quad}$



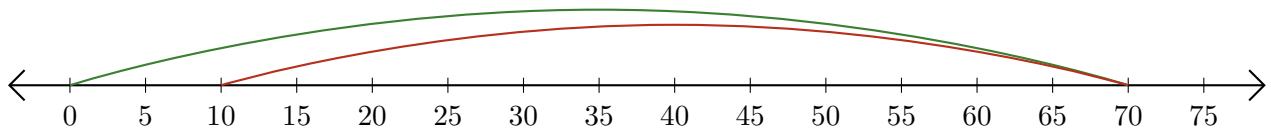
Subtracting on Number Lines (H) Answers

Use the number lines to calculate each difference.

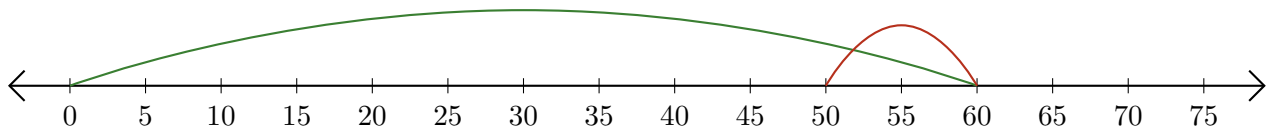
1. $75 - 70 = \underline{5}$



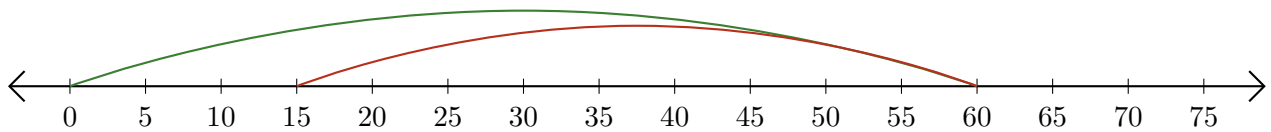
2. $70 - 60 = \underline{10}$



3. $60 - 10 = \underline{50}$



4. $60 - 45 = \underline{15}$



5. $70 - 40 = \underline{30}$

