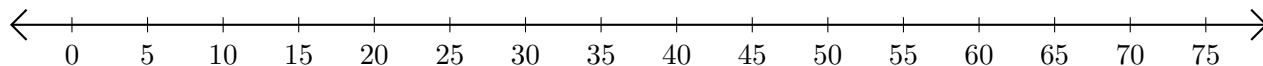


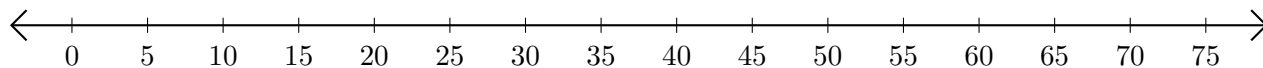
Subtracting on Number Lines (F)

Use the number lines to calculate each difference.

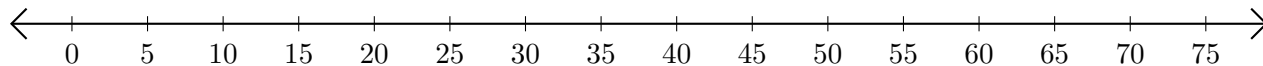
1. $50 - 35 = \underline{\quad}$



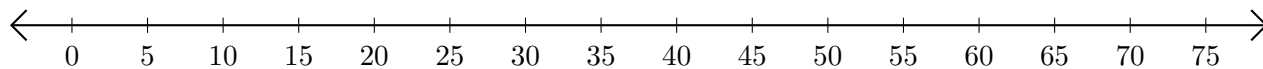
2. $45 - 15 = \underline{\quad}$



3. $75 - 45 = \underline{\quad}$



4. $75 - 60 = \underline{\quad}$



5. $55 - 40 = \underline{\quad}$

