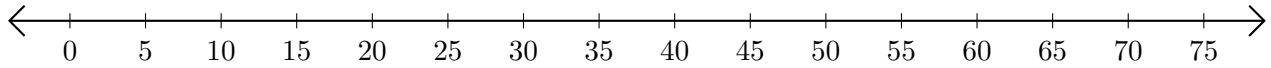


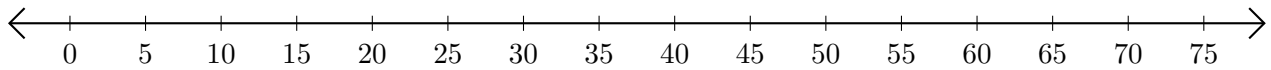
## Subtracting on Number Lines (E)

Use the number lines to calculate each difference.

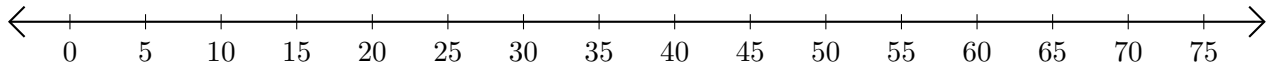
1.  $35 - 10 = \underline{\quad}$



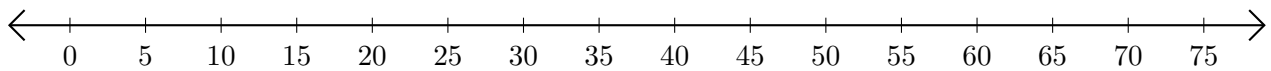
2.  $75 - 55 = \underline{\quad}$



3.  $75 - 20 = \underline{\quad}$



4.  $75 - 70 = \underline{\quad}$



5.  $55 - 50 = \underline{\quad}$

