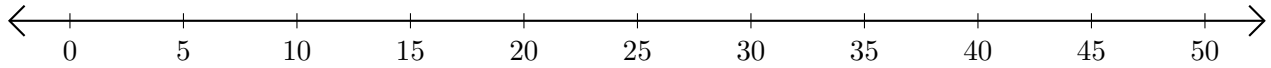


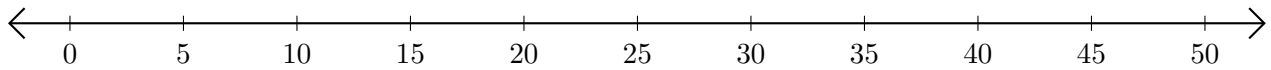
Subtracting on Number Lines (G)

Use the number lines to calculate each difference.

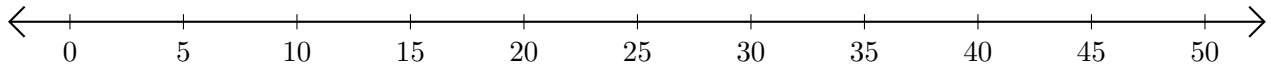
1. $30 - 15 = \underline{\quad}$



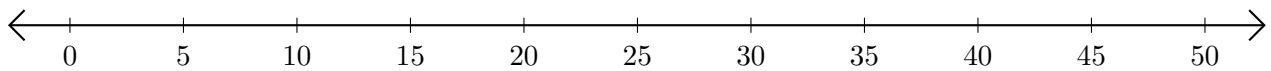
2. $45 - 30 = \underline{\quad}$



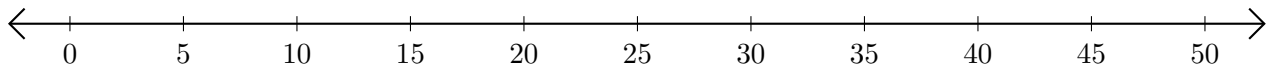
3. $25 - 20 = \underline{\quad}$



4. $45 - 35 = \underline{\quad}$



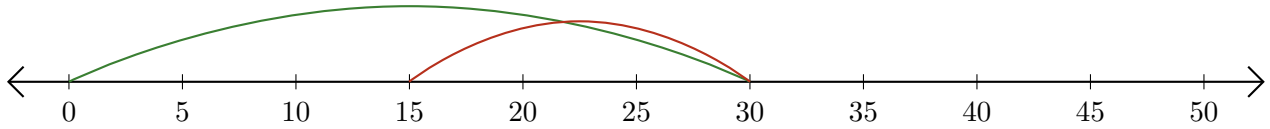
5. $30 - 10 = \underline{\quad}$



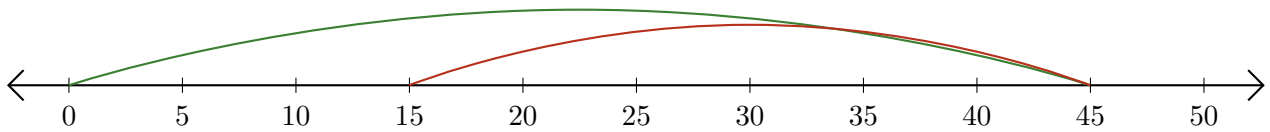
Subtracting on Number Lines (G) Answers

Use the number lines to calculate each difference.

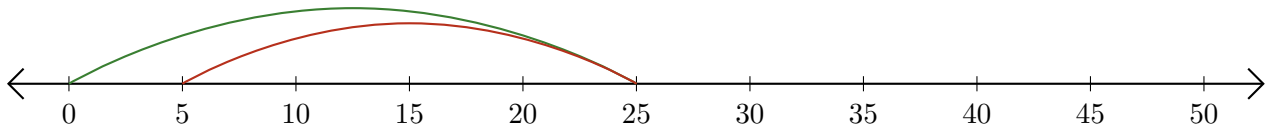
1. $30 - 15 = \underline{15}$



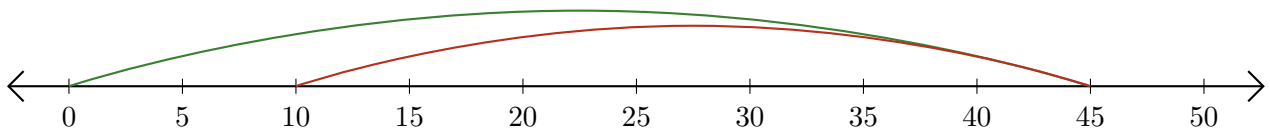
2. $45 - 30 = \underline{15}$



3. $25 - 20 = \underline{5}$



4. $45 - 35 = \underline{10}$



5. $30 - 10 = \underline{20}$

