

Subtracting on Number Lines (C)

Use the number lines to calculate each difference.

1. $50 - 15 = \underline{\quad}$



2. $50 - 45 = \underline{\quad}$



3. $45 - 30 = \underline{\quad}$



4. $50 - 5 = \underline{\quad}$



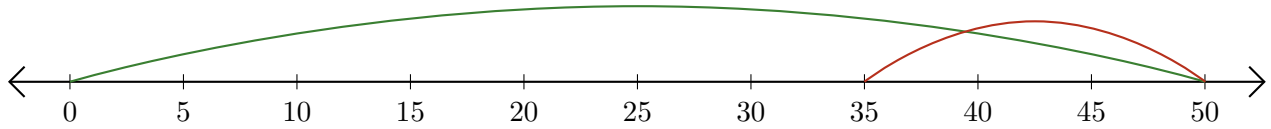
5. $50 - 35 = \underline{\quad}$



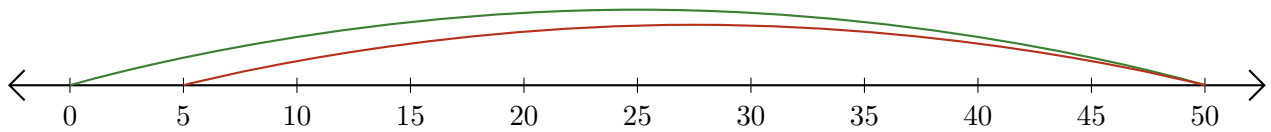
Subtracting on Number Lines (C) Answers

Use the number lines to calculate each difference.

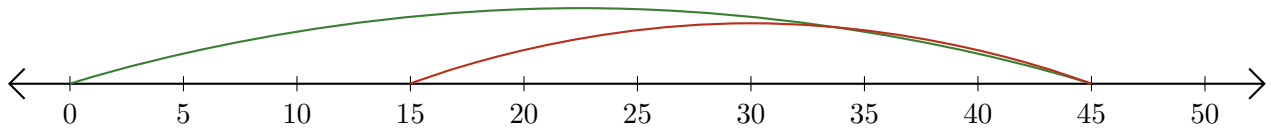
1. $50 - 15 = \underline{35}$



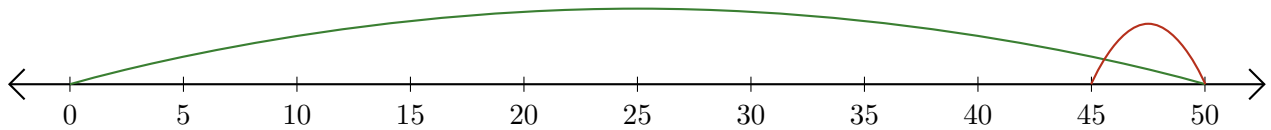
2. $50 - 45 = \underline{5}$



3. $45 - 30 = \underline{15}$



4. $50 - 5 = \underline{45}$



5. $50 - 35 = \underline{15}$

