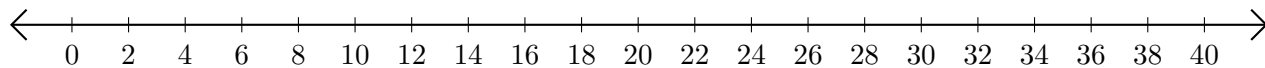


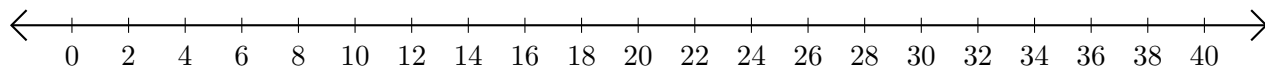
Subtracting on Number Lines (I)

Use the number lines to calculate each difference.

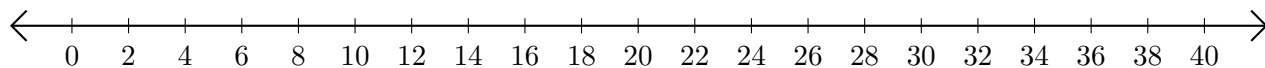
1. $28 - 22 = \underline{\quad}$



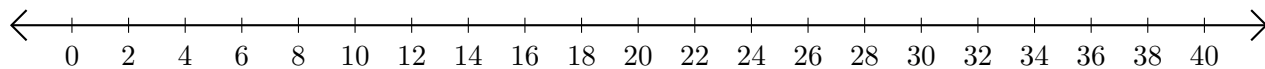
2. $32 - 2 = \underline{\quad}$



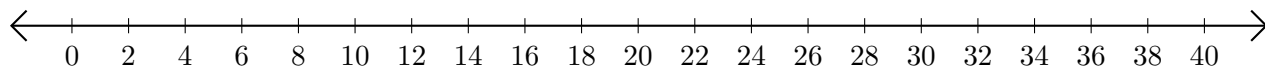
3. $36 - 16 = \underline{\quad}$



4. $38 - 36 = \underline{\quad}$



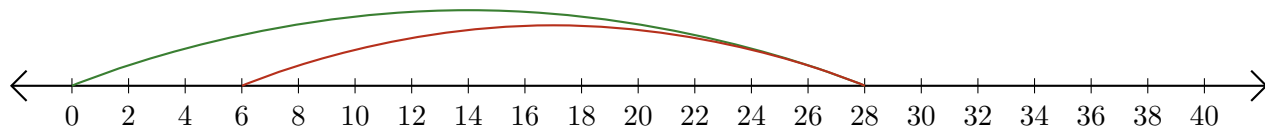
5. $22 - 12 = \underline{\quad}$



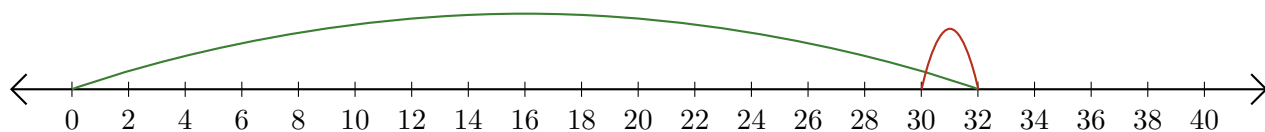
Subtracting on Number Lines (I) Answers

Use the number lines to calculate each difference.

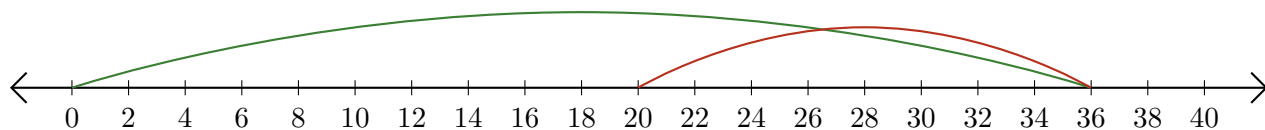
1. $28 - 22 = \underline{6}$



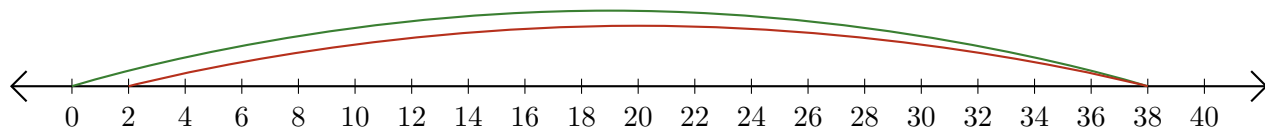
2. $32 - 2 = \underline{30}$



3. $36 - 16 = \underline{20}$



4. $38 - 36 = \underline{2}$



5. $22 - 12 = \underline{10}$

