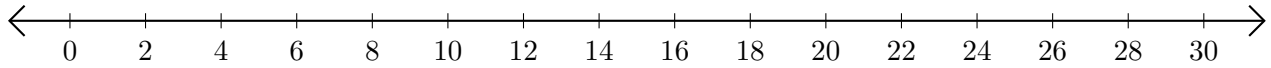


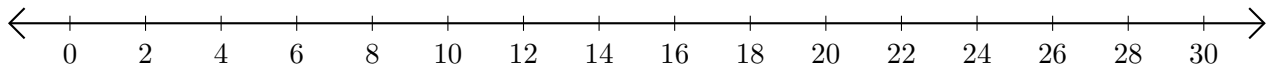
Subtracting on Number Lines (H)

Use the number lines to calculate each difference.

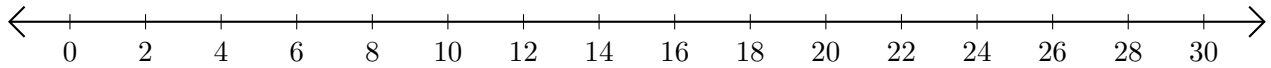
1. $16 - 8 = \underline{\quad}$



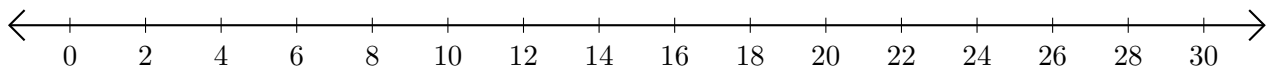
2. $18 - 10 = \underline{\quad}$



3. $18 - 6 = \underline{\quad}$



4. $24 - 16 = \underline{\quad}$



5. $24 - 22 = \underline{\quad}$

