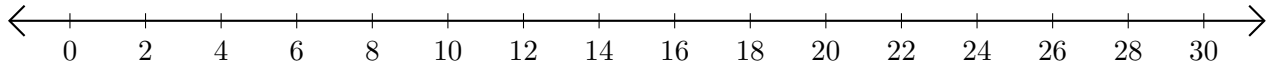


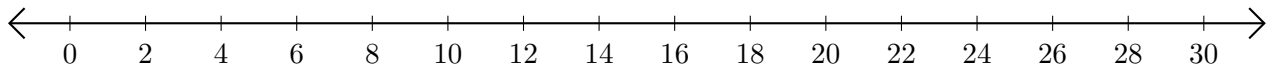
Subtracting on Number Lines (G)

Use the number lines to calculate each difference.

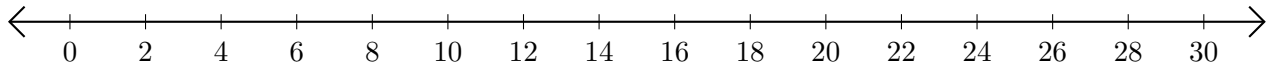
1. $20 - 18 = \underline{\quad}$



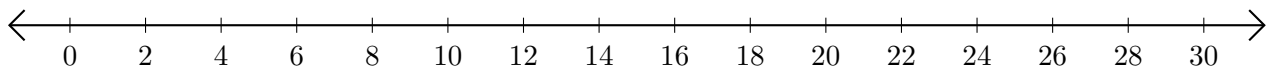
2. $22 - 12 = \underline{\quad}$



3. $26 - 4 = \underline{\quad}$



4. $24 - 14 = \underline{\quad}$



5. $10 - 2 = \underline{\quad}$

