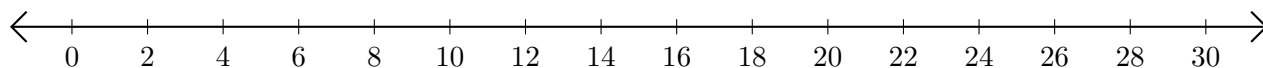


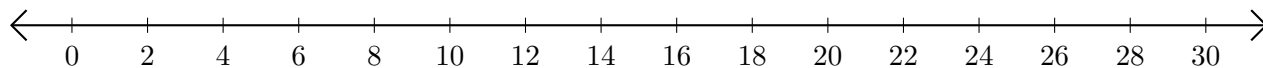
## Subtracting on Number Lines (F)

Use the number lines to calculate each difference.

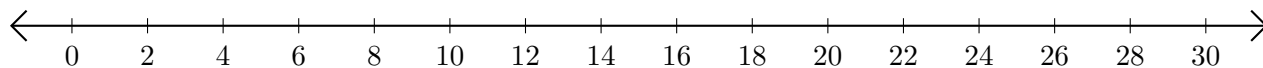
1.  $26 - 22 = \underline{\quad}$



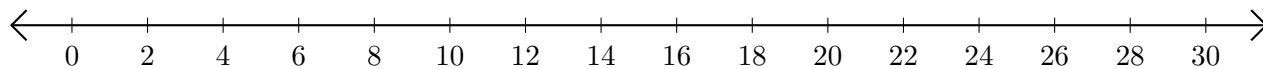
2.  $22 - 14 = \underline{\quad}$



3.  $30 - 28 = \underline{\quad}$



4.  $24 - 16 = \underline{\quad}$



5.  $18 - 4 = \underline{\quad}$

