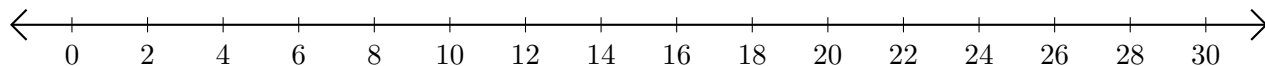


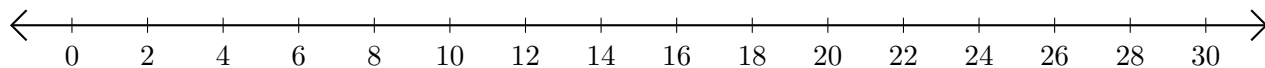
Subtracting on Number Lines (F)

Use the number lines to calculate each difference.

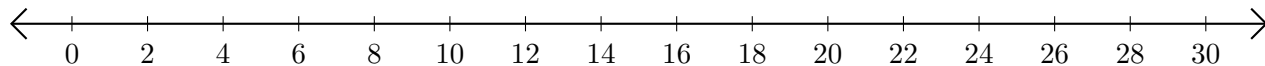
1. $26 - 22 = \underline{\quad}$



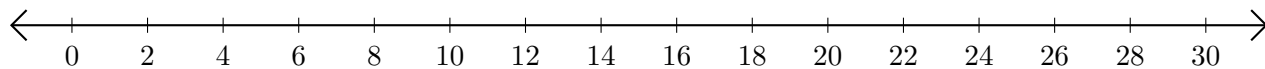
2. $22 - 14 = \underline{\quad}$



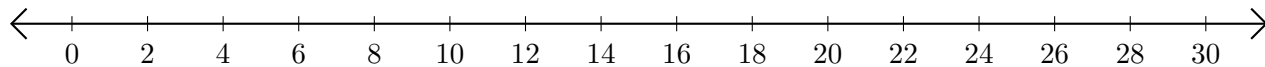
3. $30 - 28 = \underline{\quad}$



4. $24 - 16 = \underline{\quad}$



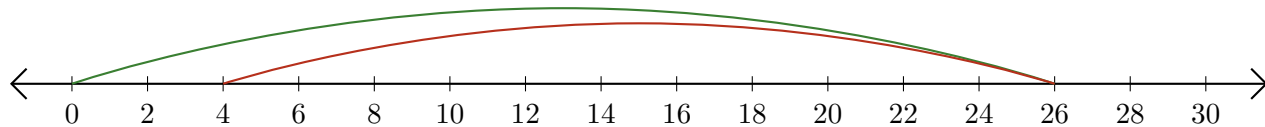
5. $18 - 4 = \underline{\quad}$



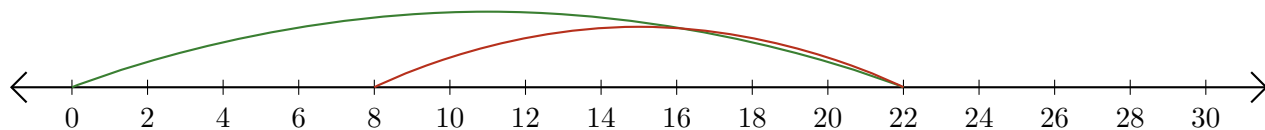
Subtracting on Number Lines (F) Answers

Use the number lines to calculate each difference.

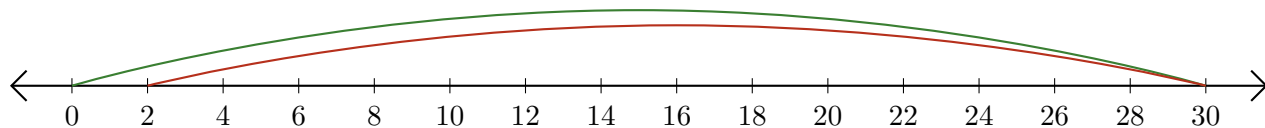
1. $26 - 22 = \underline{4}$



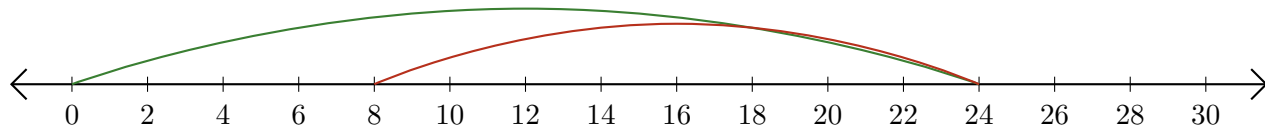
2. $22 - 14 = \underline{8}$



3. $30 - 28 = \underline{2}$



4. $24 - 16 = \underline{8}$



5. $18 - 4 = \underline{14}$

