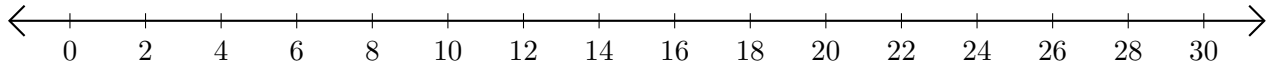


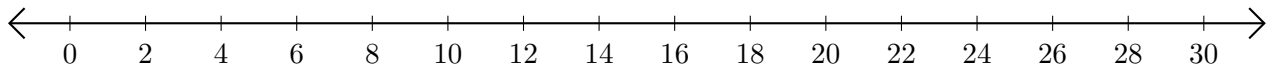
Subtracting on Number Lines (D)

Use the number lines to calculate each difference.

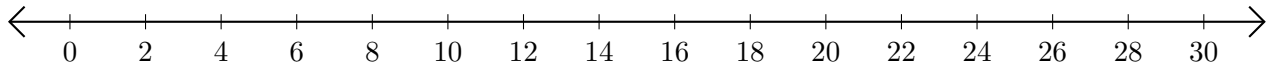
1. $22 - 16 = \underline{\quad}$



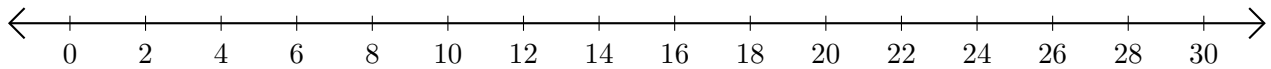
2. $30 - 18 = \underline{\quad}$



3. $22 - 20 = \underline{\quad}$



4. $28 - 26 = \underline{\quad}$



5. $30 - 24 = \underline{\quad}$

