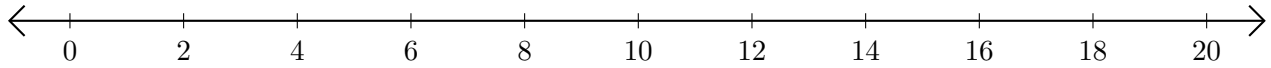


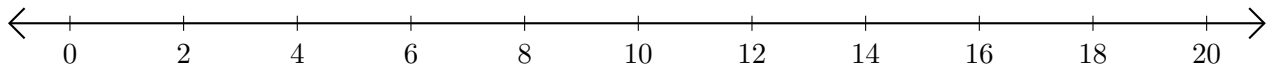
## Subtracting on Number Lines (J)

Use the number lines to calculate each difference.

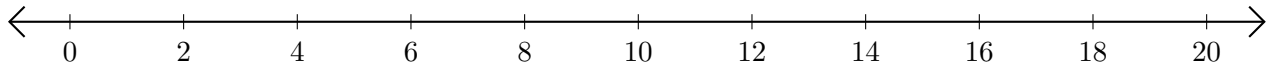
1.  $8 - 6 = \underline{\quad}$



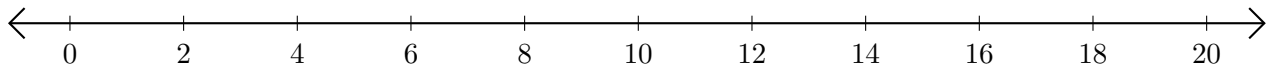
2.  $20 - 18 = \underline{\quad}$



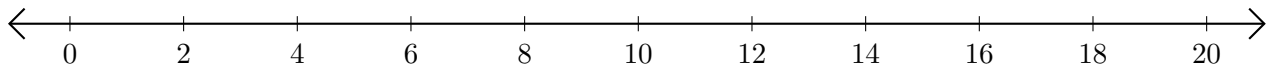
3.  $20 - 2 = \underline{\quad}$



4.  $20 - 8 = \underline{\quad}$



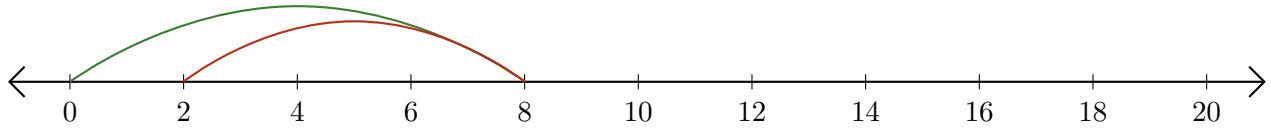
5.  $18 - 14 = \underline{\quad}$



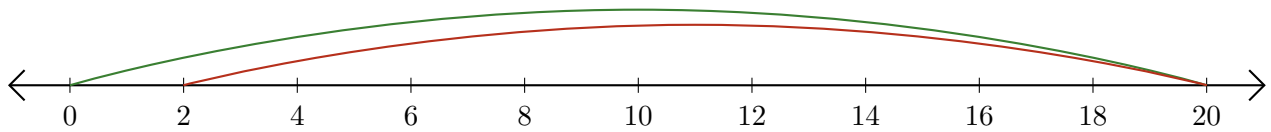
# Subtracting on Number Lines (J) Answers

Use the number lines to calculate each difference.

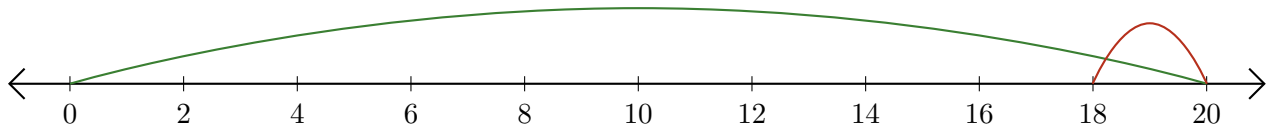
1.  $8 - 6 = \underline{2}$



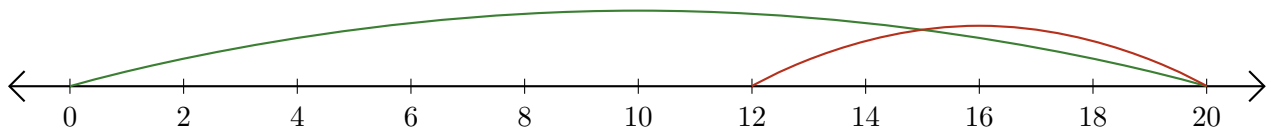
2.  $20 - 18 = \underline{2}$



3.  $20 - 2 = \underline{18}$



4.  $20 - 8 = \underline{12}$



5.  $18 - 14 = \underline{4}$

