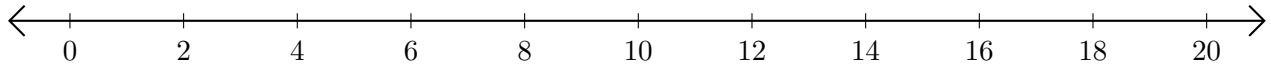


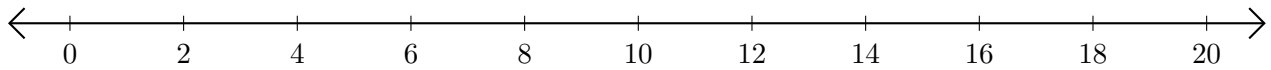
## Subtracting on Number Lines (F)

Use the number lines to calculate each difference.

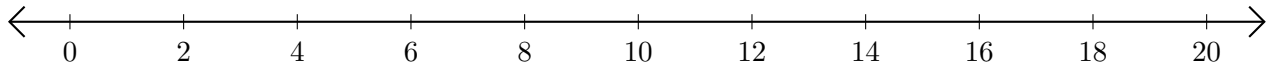
1.  $6 - 2 = \underline{\quad}$



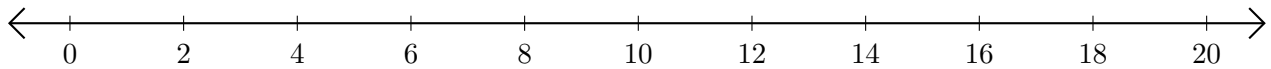
2.  $16 - 10 = \underline{\quad}$



3.  $10 - 8 = \underline{\quad}$



4.  $18 - 14 = \underline{\quad}$



5.  $20 - 4 = \underline{\quad}$

