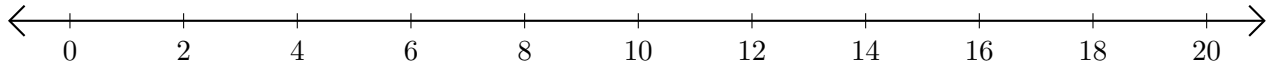


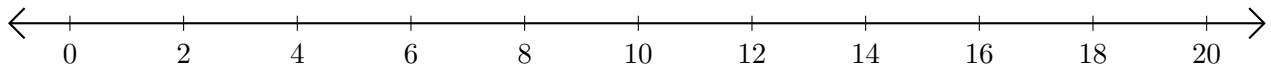
Subtracting on Number Lines (E)

Use the number lines to calculate each difference.

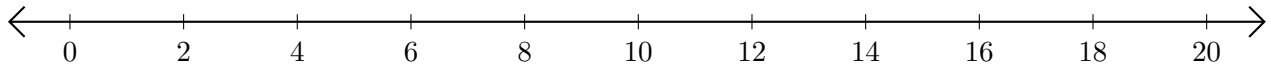
1. $20 - 18 = \underline{\quad}$



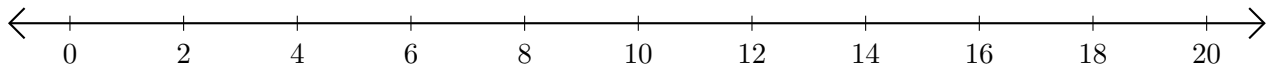
2. $14 - 6 = \underline{\quad}$



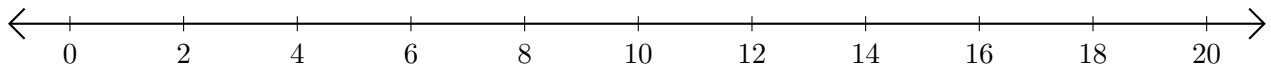
3. $10 - 4 = \underline{\quad}$



4. $6 - 2 = \underline{\quad}$



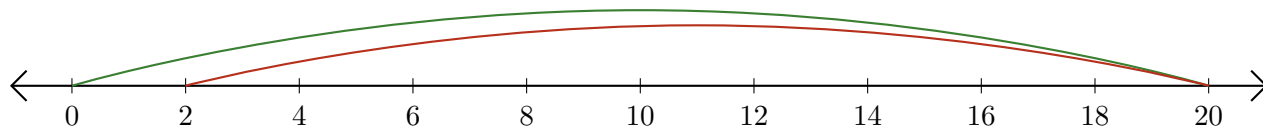
5. $20 - 10 = \underline{\quad}$



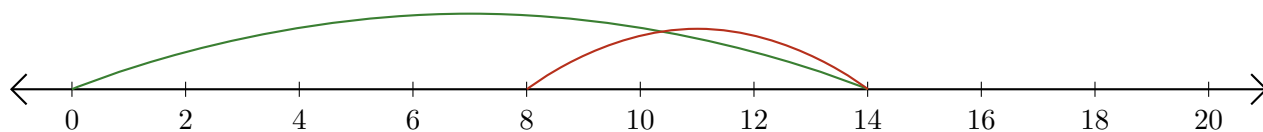
Subtracting on Number Lines (E) Answers

Use the number lines to calculate each difference.

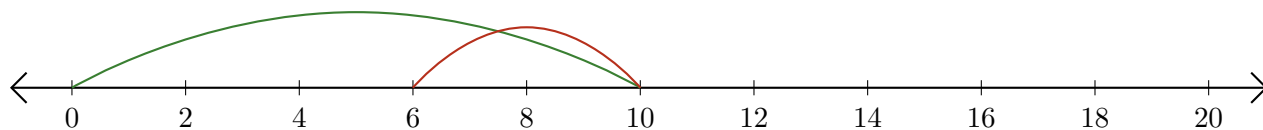
1. $20 - 18 = \underline{2}$



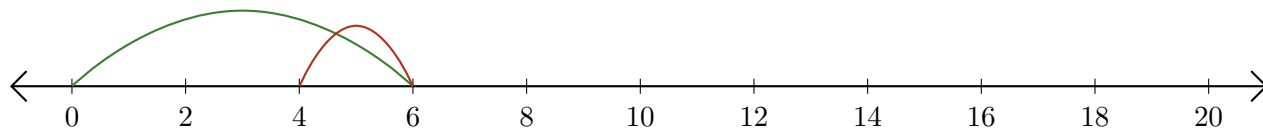
2. $14 - 6 = \underline{8}$



3. $10 - 4 = \underline{6}$



4. $6 - 2 = \underline{4}$



5. $20 - 10 = \underline{10}$

