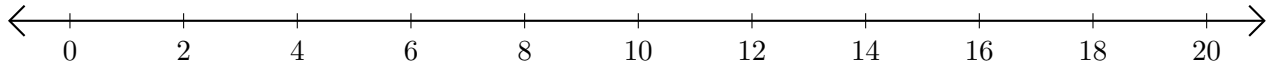


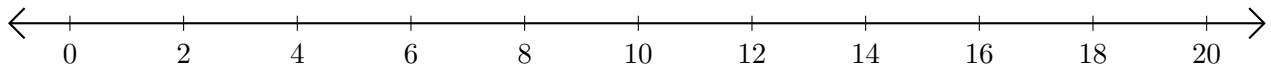
## Subtracting on Number Lines (C)

Use the number lines to calculate each difference.

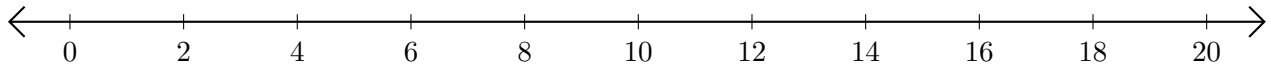
1.  $18 - 14 = \underline{\quad}$



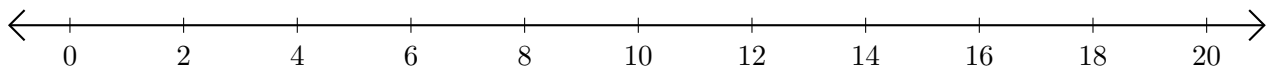
2.  $18 - 8 = \underline{\quad}$



3.  $18 - 10 = \underline{\quad}$



4.  $16 - 6 = \underline{\quad}$



5.  $20 - 12 = \underline{\quad}$

