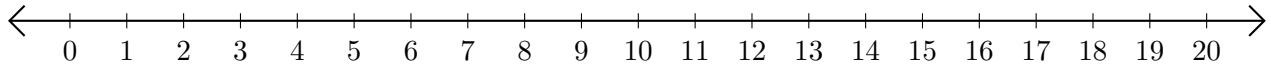


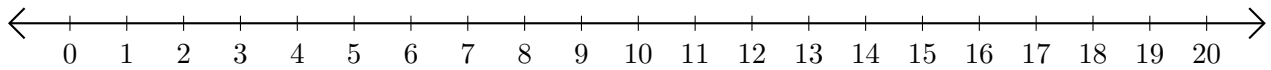
Subtracting on Number Lines (J)

Use the number lines to calculate each difference.

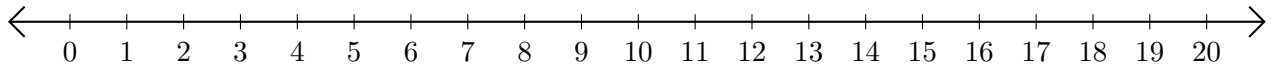
1. $18 - 1 = \underline{\quad}$



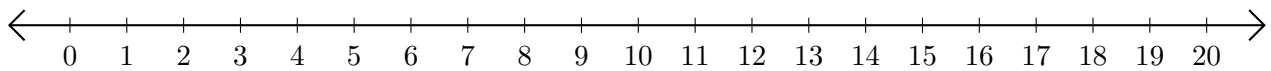
2. $15 - 7 = \underline{\quad}$



3. $18 - 17 = \underline{\quad}$



4. $18 - 16 = \underline{\quad}$



5. $20 - 19 = \underline{\quad}$

