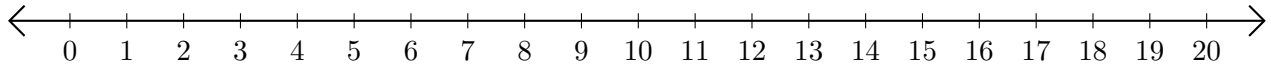


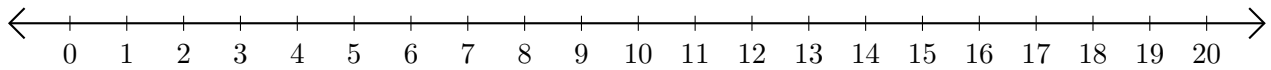
# Subtracting on Number Lines (J)

Use the number lines to calculate each difference.

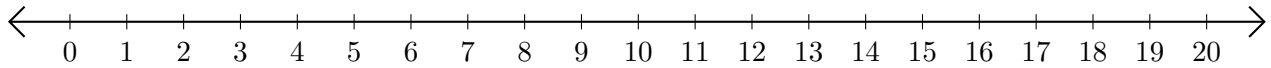
1.  $18 - 1 = \underline{\quad}$



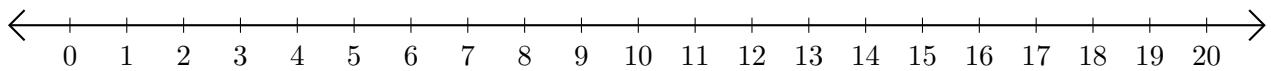
2.  $15 - 7 = \underline{\quad}$



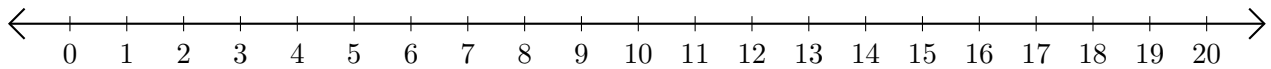
3.  $18 - 17 = \underline{\quad}$



4.  $18 - 16 = \underline{\quad}$



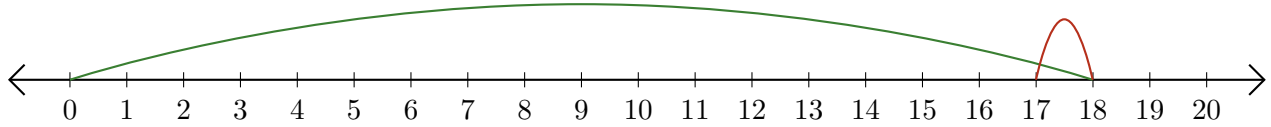
5.  $20 - 19 = \underline{\quad}$



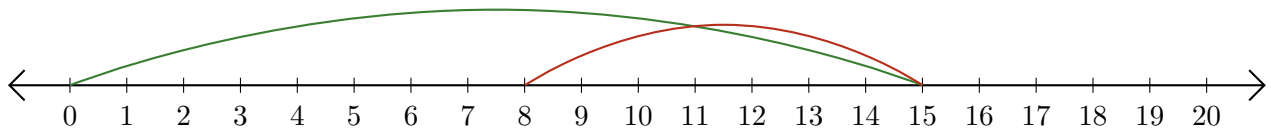
# Subtracting on Number Lines (J) Answers

Use the number lines to calculate each difference.

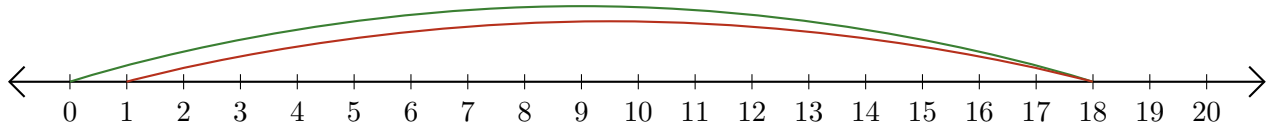
1.  $18 - 1 = \underline{17}$



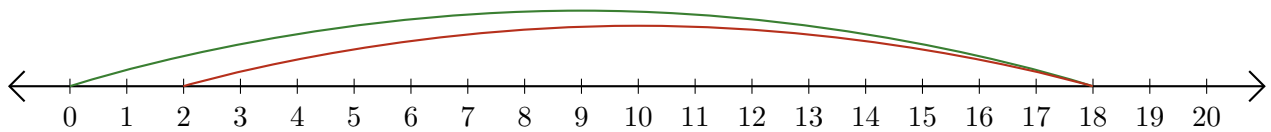
2.  $15 - 7 = \underline{8}$



3.  $18 - 17 = \underline{1}$



4.  $18 - 16 = \underline{2}$



5.  $20 - 19 = \underline{1}$

